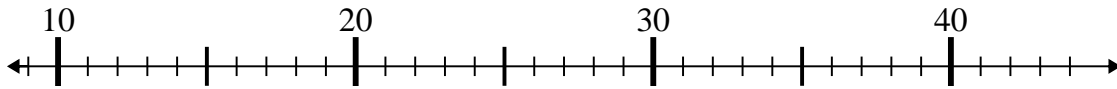




Benutze den Zahlenstrahl um jede Aufgabe zu lösen.

Antworten

1) $16 + 8 =$



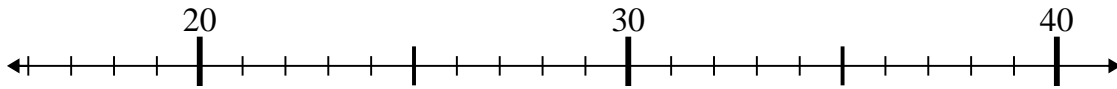
1. _____

2) $17 + 5 =$



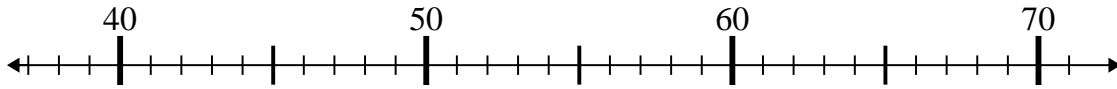
2. _____

3) $24 + 3 =$



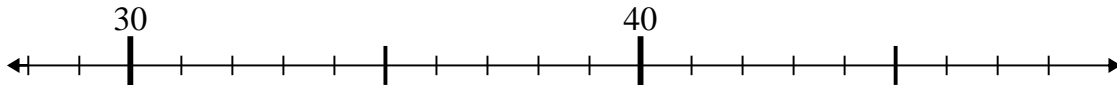
3. _____

4) $53 + 16 =$



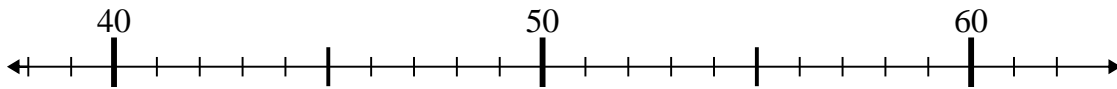
4. _____

5) $45 - 2 =$



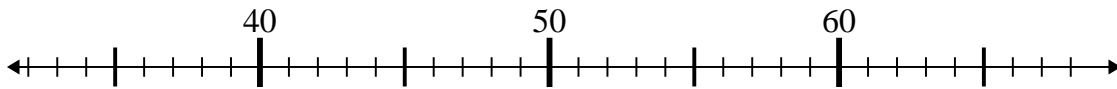
5. _____

6) $46 + 12 =$



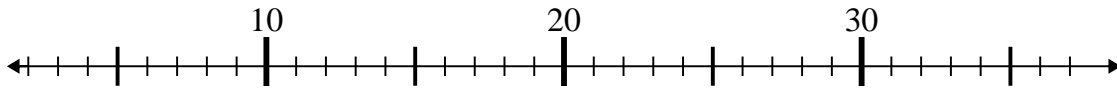
6. _____

7) $38 + 18 =$



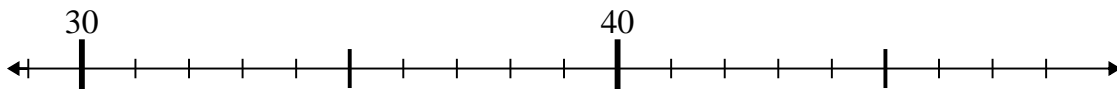
7. _____

8) $5 + 2 =$



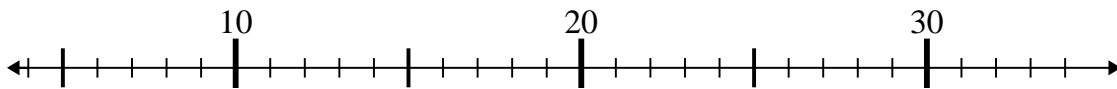
8. _____

9) $48 - 18 =$



9. _____

10) $22 - 17 =$



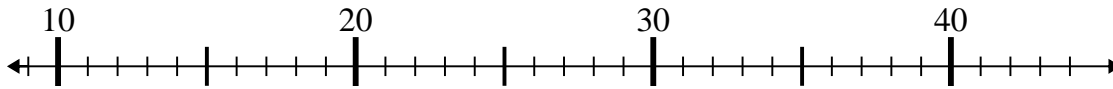
10. _____



Benutze den Zahlenstrahl um jede Aufgabe zu lösen.

Antworten

1) $16 + 8 =$



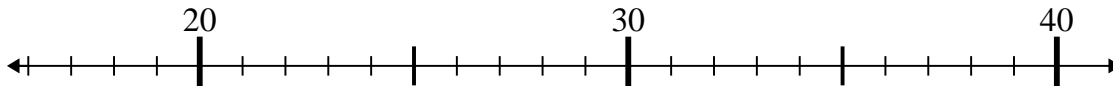
1. 24

2) $17 + 5 =$



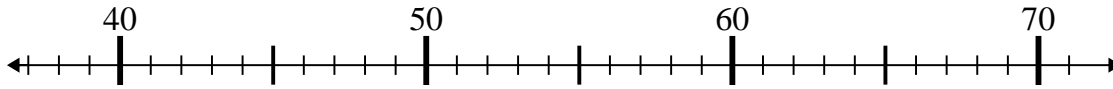
2. 22

3) $24 + 3 =$



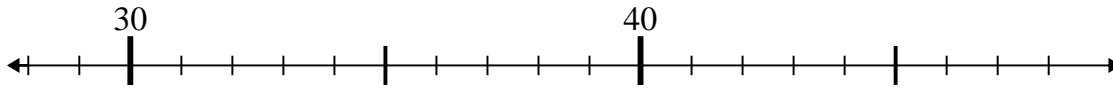
3. 27

4) $53 + 16 =$



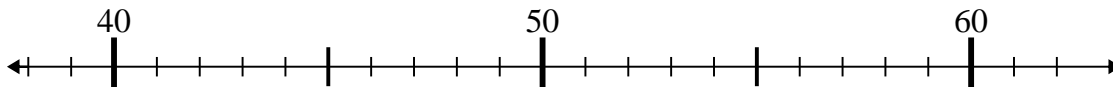
4. 69

5) $45 - 2 =$



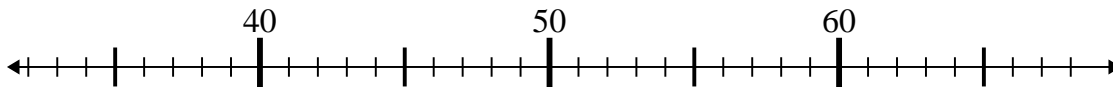
5. 43

6) $46 + 12 =$



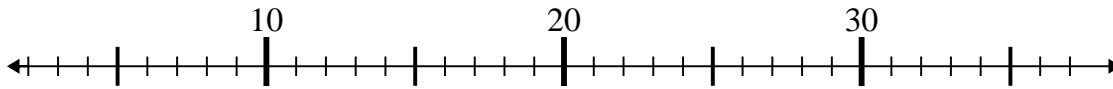
6. 58

7) $38 + 18 =$



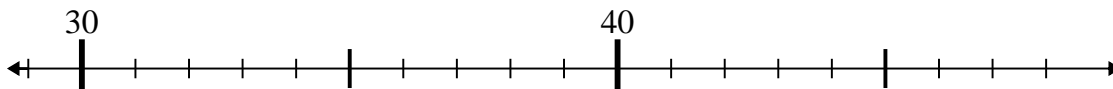
7. 56

8) $5 + 2 =$



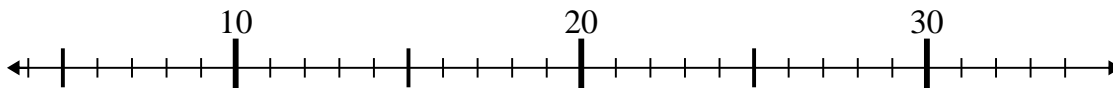
8. 7

9) $48 - 18 =$



9. 30

10) $22 - 17 =$



10. 5