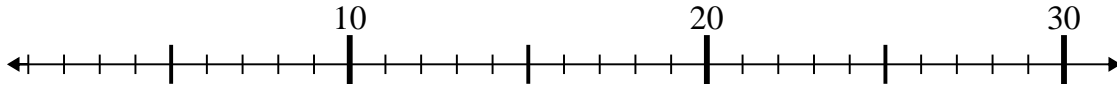




Benutze den Zahlenstrahl um jede Aufgabe zu lösen.

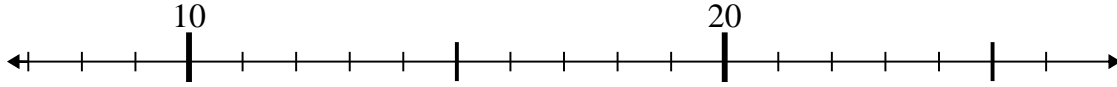
**Antworten**

1)  $3 + 17 =$



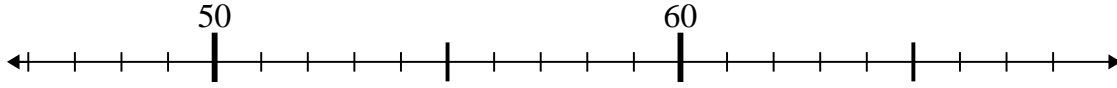
1. \_\_\_\_\_

2)  $14 + 9 =$



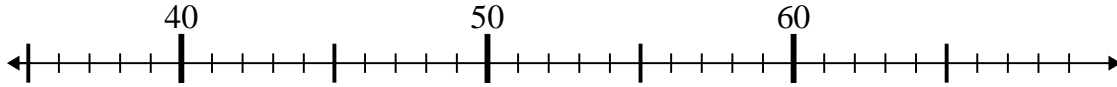
2. \_\_\_\_\_

3)  $59 - 8 =$



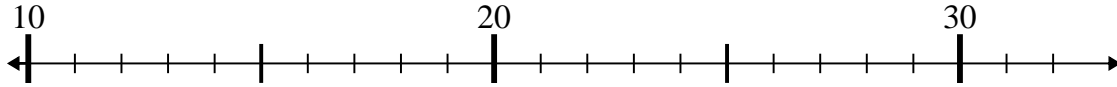
3. \_\_\_\_\_

4)  $43 - 5 =$



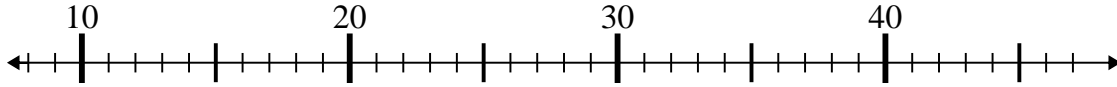
4. \_\_\_\_\_

5)  $26 - 14 =$



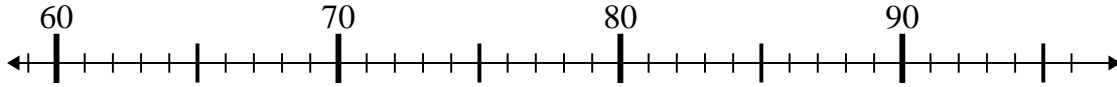
5. \_\_\_\_\_

6)  $15 + 23 =$



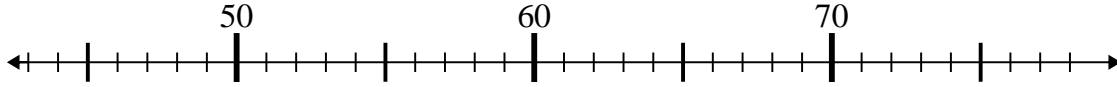
6. \_\_\_\_\_

7)  $91 + 2 =$



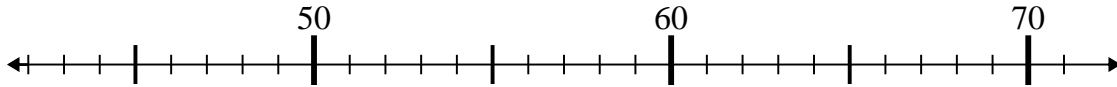
7. \_\_\_\_\_

8)  $47 + 1 =$



8. \_\_\_\_\_

9)  $71 - 8 =$



9. \_\_\_\_\_

10)  $72 + 16 =$



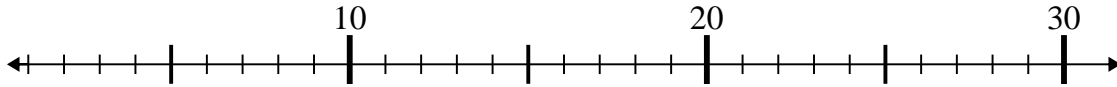
10. \_\_\_\_\_



Benutze den Zahlenstrahl um jede Aufgabe zu lösen.

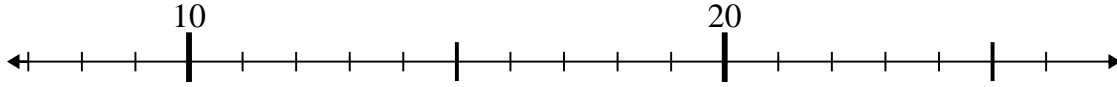
**Antworten**

1)  $3 + 17 =$



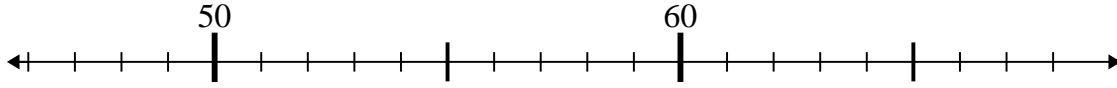
1. 20

2)  $14 + 9 =$



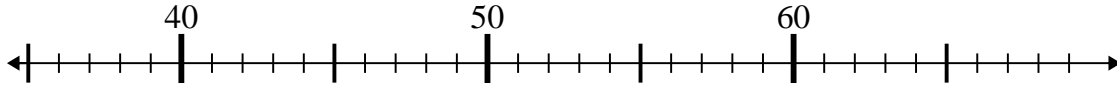
2. 23

3)  $59 - 8 =$



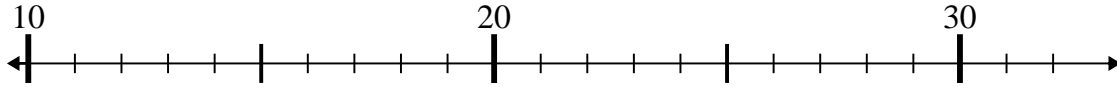
3. 51

4)  $43 - 5 =$



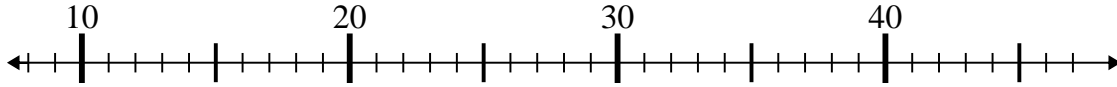
4. 38

5)  $26 - 14 =$



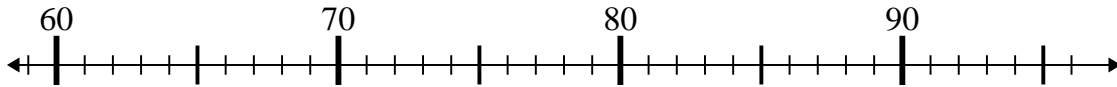
5. 12

6)  $15 + 23 =$



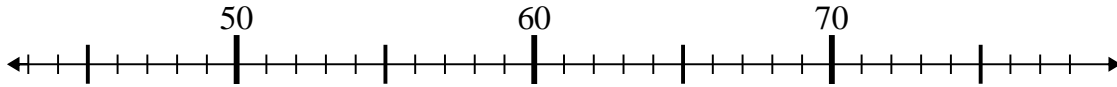
6. 38

7)  $91 + 2 =$



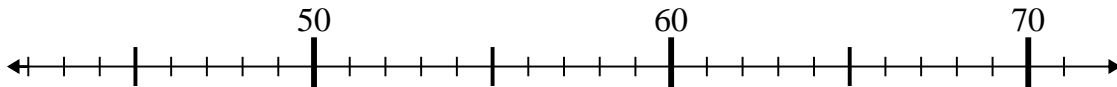
7. 93

8)  $47 + 1 =$



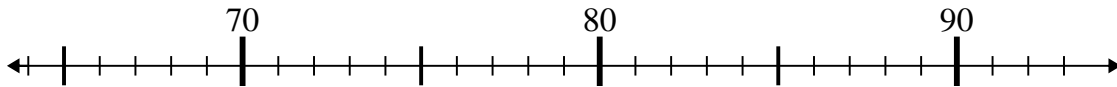
8. 48

9)  $71 - 8 =$



9. 63

10)  $72 + 16 =$



10. 88