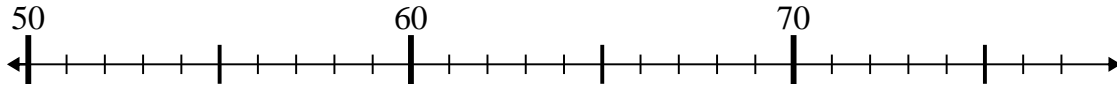




Benutze den Zahlenstrahl um jede Aufgabe zu lösen.

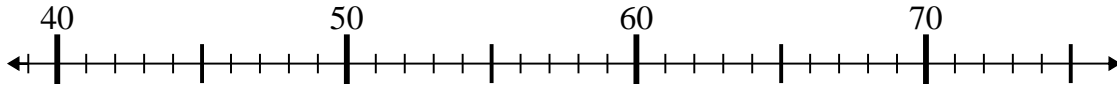
Antworten

1) $70 - 16 =$



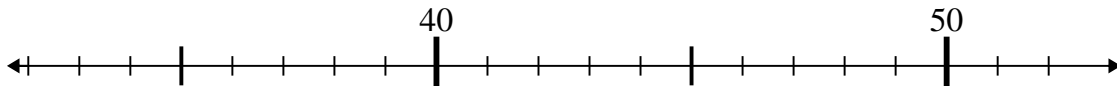
1. _____

2) $39 + 6 =$



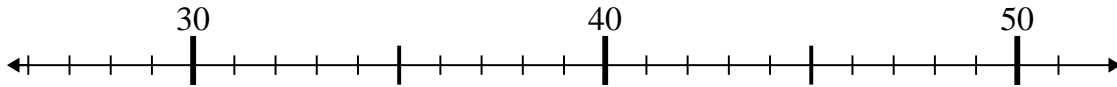
2. _____

3) $46 + 3 =$



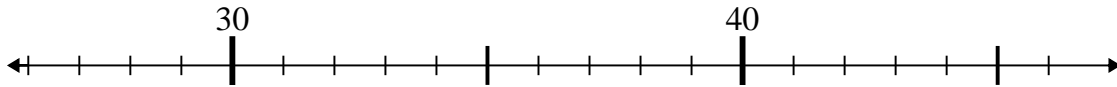
3. _____

4) $31 + 8 =$



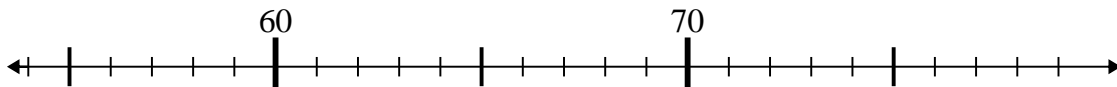
4. _____

5) $36 - 1 =$



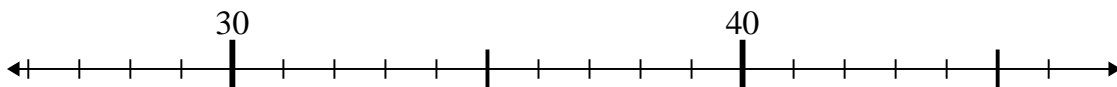
5. _____

6) $70 + 8 =$



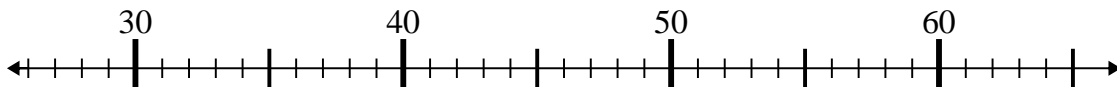
6. _____

7) $46 - 1 =$



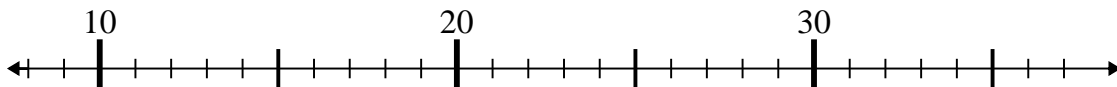
7. _____

8) $27 + 8 =$



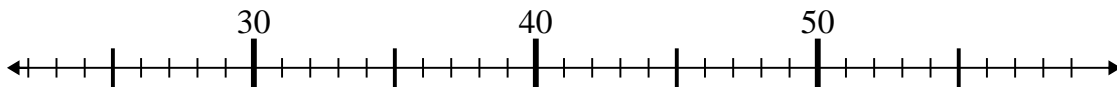
8. _____

9) $18 + 1 =$



9. _____

10) $25 + 3 =$



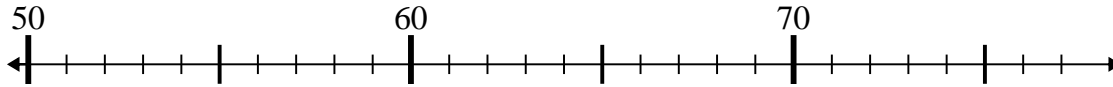
10. _____



Benutze den Zahlenstrahl um jede Aufgabe zu lösen.

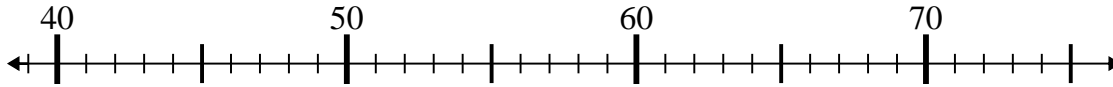
Antworten

1) $70 - 16 =$



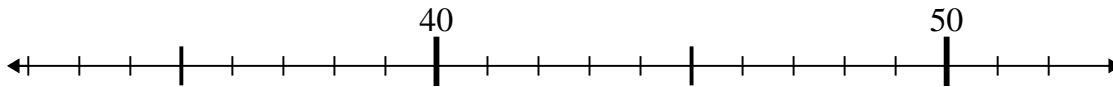
1. 54

2) $39 + 6 =$



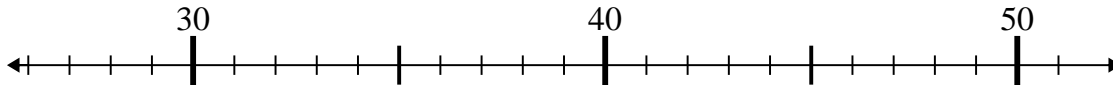
2. 45

3) $46 + 3 =$



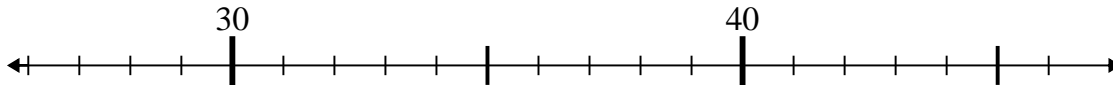
3. 49

4) $31 + 8 =$



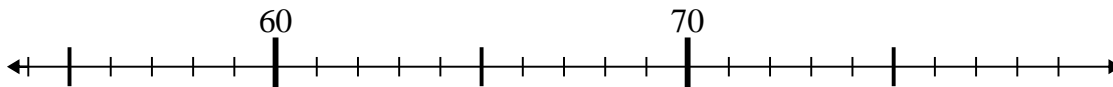
4. 39

5) $36 - 1 =$



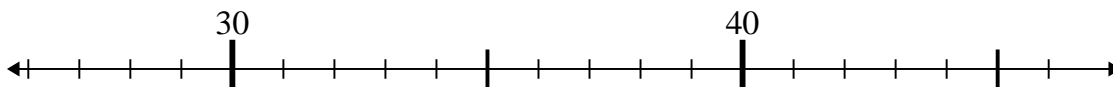
5. 35

6) $70 + 8 =$



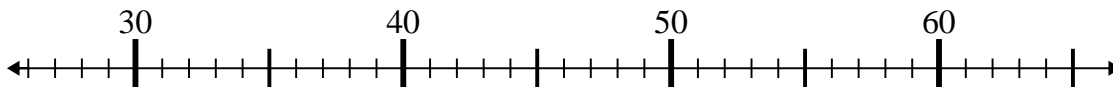
6. 78

7) $46 - 1 =$



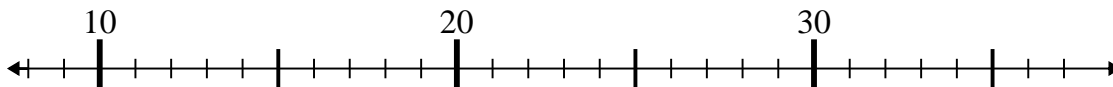
7. 45

8) $27 + 8 =$



8. 35

9) $18 + 1 =$



9. 19

10) $25 + 3 =$



10. 28