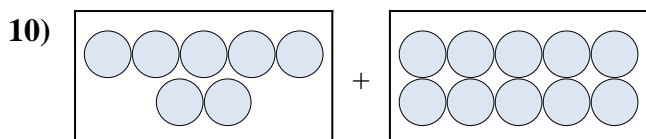

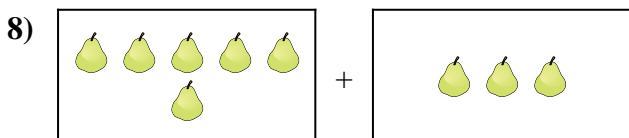

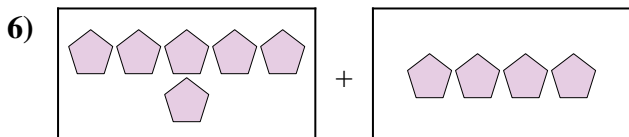
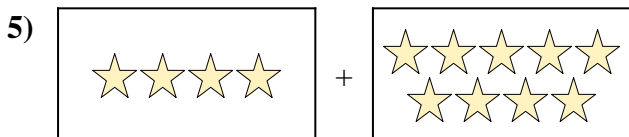
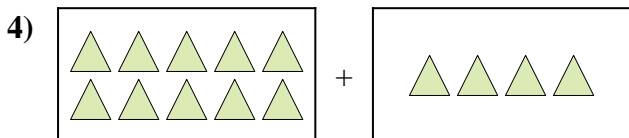
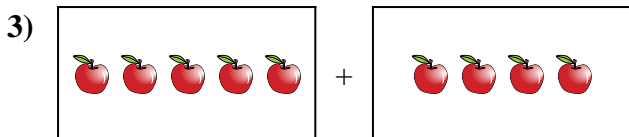
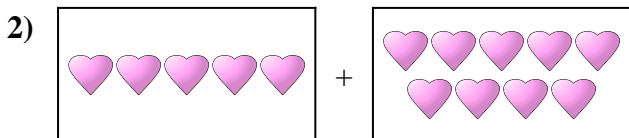
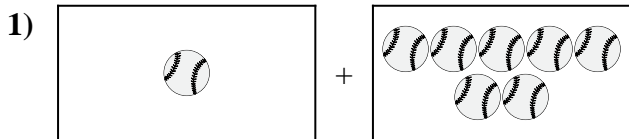




Drücken Sie das visuelle Problem als Gleichung mit Antwort aus.

Antworten



1. _____

2. _____

3. _____

4. _____

5. _____

6. _____

7. _____

8. _____

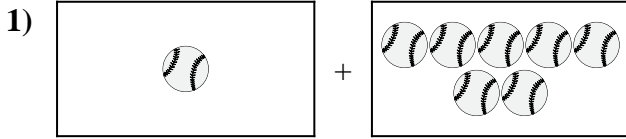
9. _____

10. _____

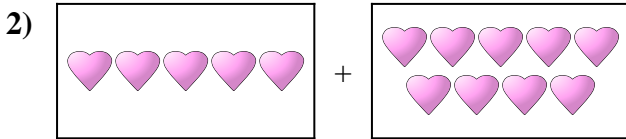


Drücken Sie das visuelle Problem als Gleichung mit Antwort aus.

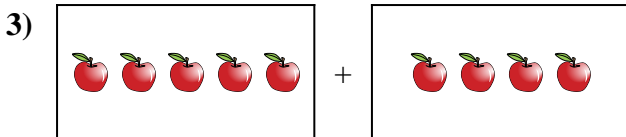
Antworten



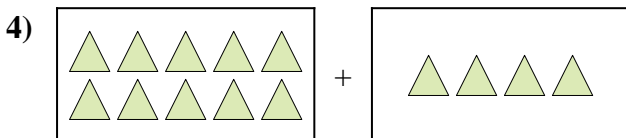
1. **1 + 7 = 8**



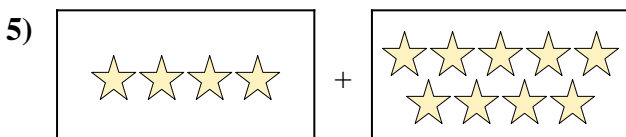
2. **5 + 9 = 14**



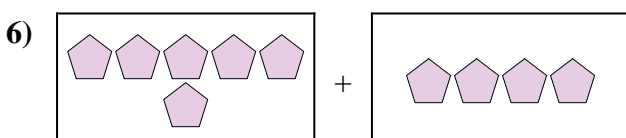
3. **5 + 4 = 9**




4. **10 + 4 = 14**



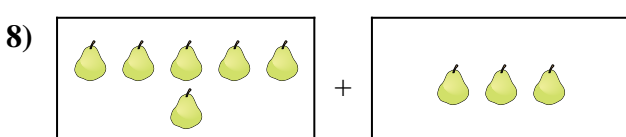
5. **4 + 9 = 13**




6. **6 + 4 = 10**



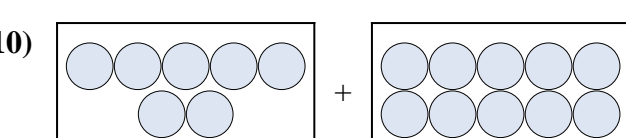
7. **6 + 10 = 16**



8. **6 + 3 = 9**



9. **7 + 4 = 11**



10. **7 + 10 = 17**