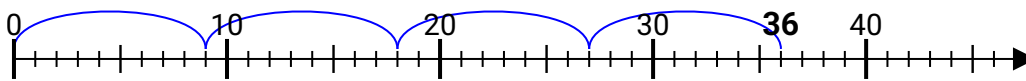


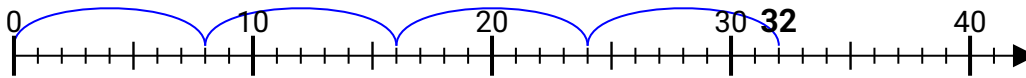


Benutze den Zahlenstrahl zur Lösung jeder Aufgabe.

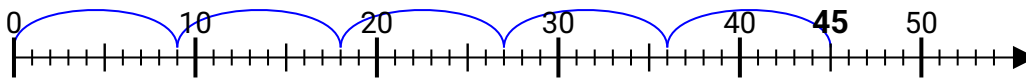
1) $36:9=$



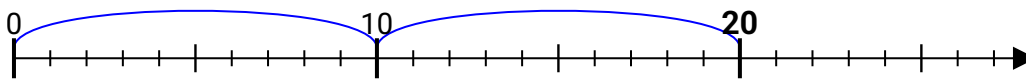
2) $32:8=$



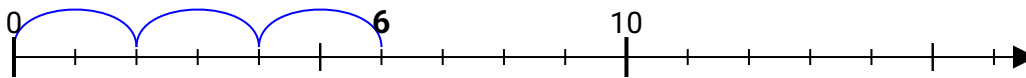
3) $45:9=$



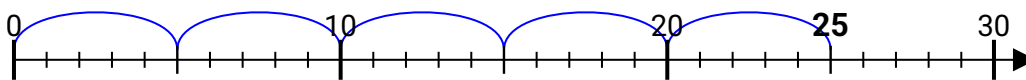
4) $20:10=$



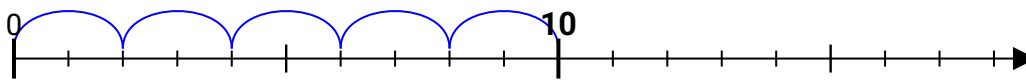
5) $6:2=$



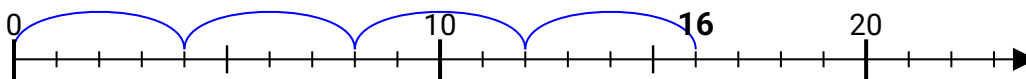
6) $25:5=$



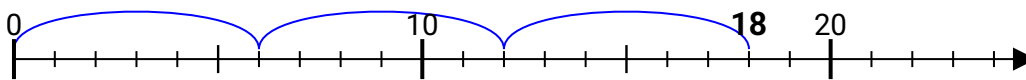
7) $10:2=$



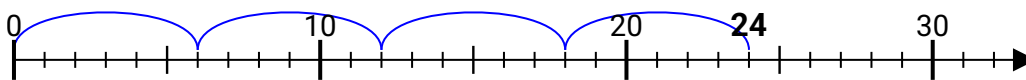
8) $16:4=$



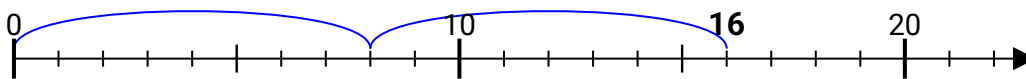
9) $18:6=$



10) $24:6=$



11) $16:8=$

**Antworten**

1. **4**
2. **4**
3. **5**
4. **2**
5. **3**
6. **5**
7. **5**
8. **4**
9. **3**
10. **4**
11. **2**