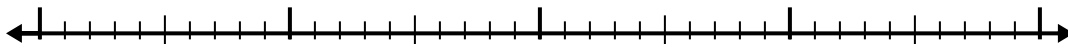





Verwenden Sie den Zahlenstrahl, um jedes Problem zu lösen.

**Antworten**


1)  $3,2 - 1,3 =$



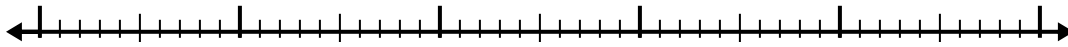
2)  $7 - 2,5 =$



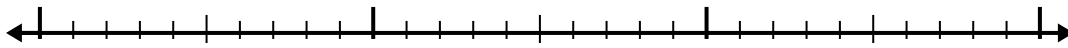
3)  $8,9 - 2,9 =$



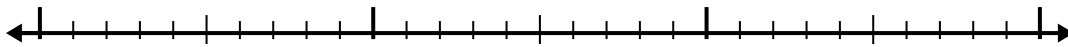
4)  $7,7 - 3,9 =$



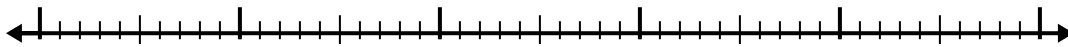
5)  $9,7 - 1,3 =$




6)  $3,5 - 1,5 =$




7)  $10,2 - 3,4 =$




8)  $8,6 - 2,4 =$



9)  $5,8 - 2,3 =$



10)  $6,1 - 1,6 =$

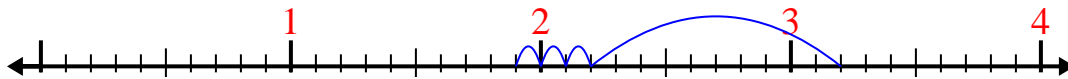


- 1. \_\_\_\_\_
- 2. \_\_\_\_\_
- 3. \_\_\_\_\_
- 4. \_\_\_\_\_
- 5. \_\_\_\_\_
- 6. \_\_\_\_\_
- 7. \_\_\_\_\_
- 8. \_\_\_\_\_
- 9. \_\_\_\_\_
- 10. \_\_\_\_\_

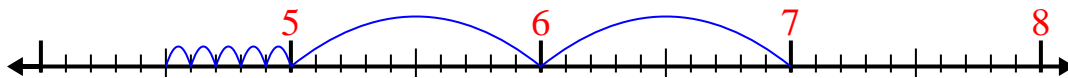


Verwenden Sie den Zahlenstrahl, um jedes Problem zu lösen.

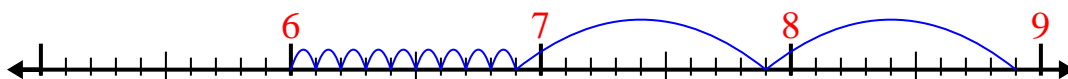
1)  $3,2 - 1,3 =$



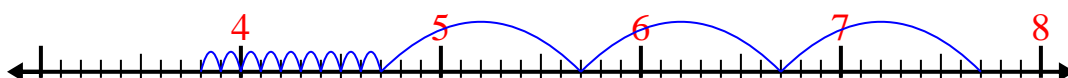
2)  $7 - 2,5 =$



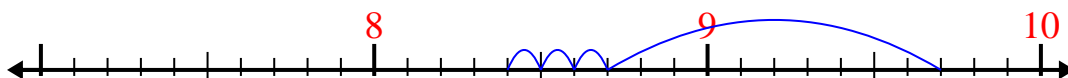
3)  $8,9 - 2,9 =$



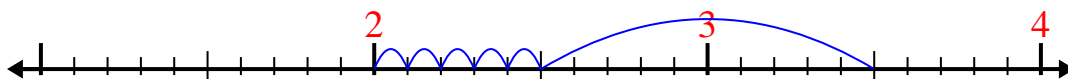
4)  $7,7 - 3,9 =$



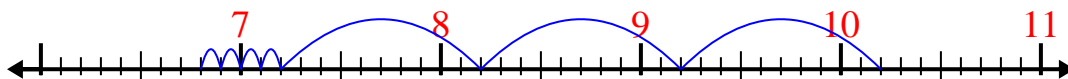
5)  $9,7 - 1,3 =$



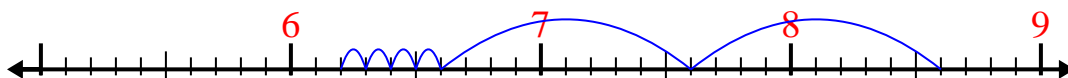
6)  $3,5 - 1,5 =$



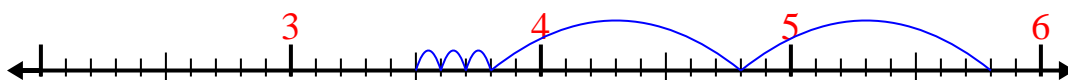
7)  $10,2 - 3,4 =$



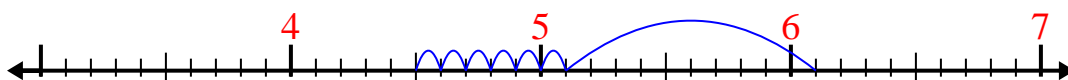
8)  $8,6 - 2,4 =$



9)  $5,8 - 2,3 =$



10)  $6,1 - 1,6 =$

**Antworten**1. 1,92. 4,53. 64. 3,85. 8,46. 27. 6,88. 6,29. 3,510. 4,5