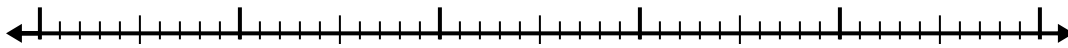




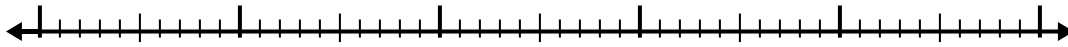
Verwenden Sie den Zahlenstrahl, um jedes Problem zu lösen.

**Antworten**


1)  $8,6 - 3,8 =$



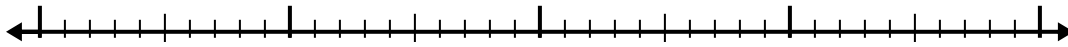
2)  $8,8 - 2,7 =$



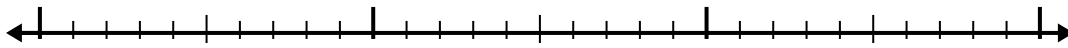
3)  $6,8 - 1,3 =$



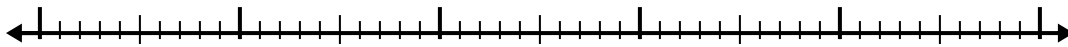
4)  $5,2 - 2,4 =$



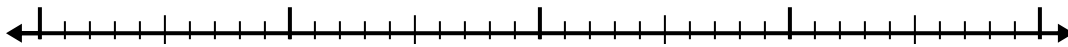
5)  $2,7 - 1,3 =$




6)  $7 - 2,4 =$




7)  $10,5 - 2,5 =$



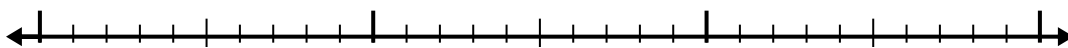
8)  $12,3 - 3,8 =$



9)  $4,2 - 2,7 =$



10)  $3 - 1,3 =$

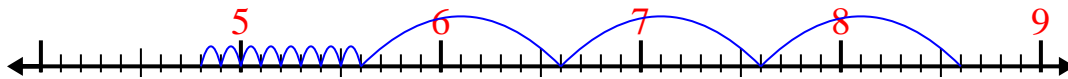


- 1. \_\_\_\_\_
- 2. \_\_\_\_\_
- 3. \_\_\_\_\_
- 4. \_\_\_\_\_
- 5. \_\_\_\_\_
- 6. \_\_\_\_\_
- 7. \_\_\_\_\_
- 8. \_\_\_\_\_
- 9. \_\_\_\_\_
- 10. \_\_\_\_\_

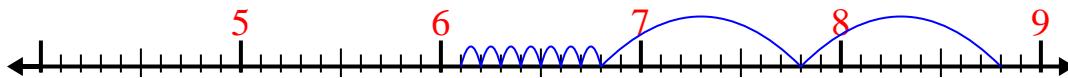


Verwenden Sie den Zahlenstrahl, um jedes Problem zu lösen.

1)  $8,6 - 3,8 =$



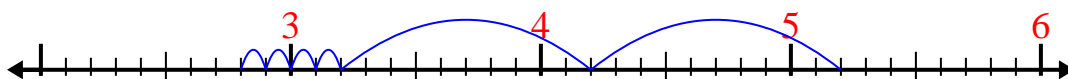
2)  $8,8 - 2,7 =$



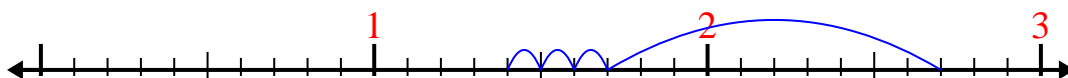
3)  $6,8 - 1,3 =$



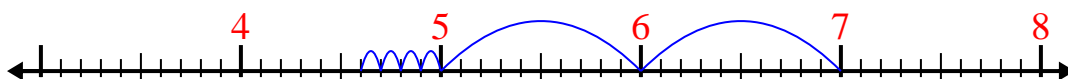
4)  $5,2 - 2,4 =$



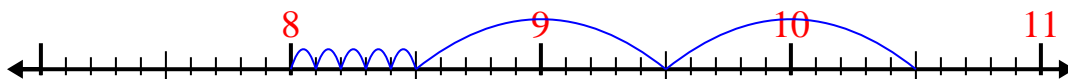
5)  $2,7 - 1,3 =$



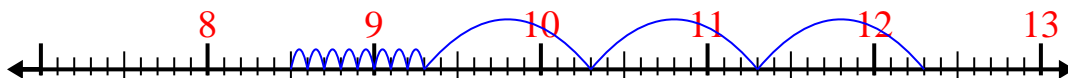
6)  $7 - 2,4 =$



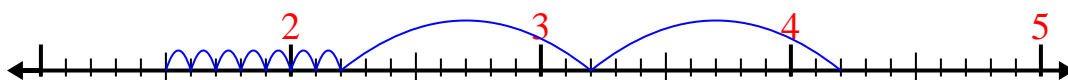
7)  $10,5 - 2,5 =$



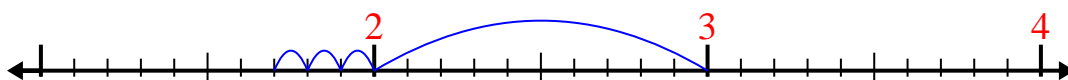
8)  $12,3 - 3,8 =$



9)  $4,2 - 2,7 =$



10)  $3 - 1,3 =$



**Antworten**

1. 4,8

2. 6,1

3. 5,5

4. 2,8

5. 1,4

6. 4,6

7. 8

8. 8,5

9. 1,5

10. 1,7