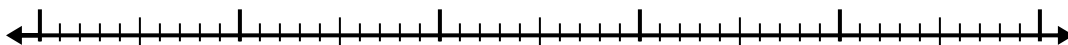




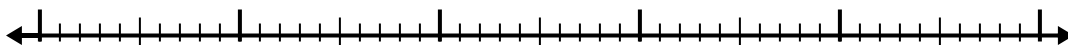
Verwenden Sie den Zahlenstrahl, um jedes Problem zu lösen.

Antworten

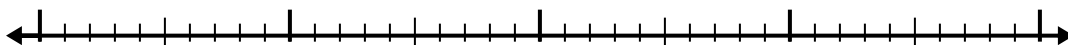
1) $6,2 - 3,6 =$



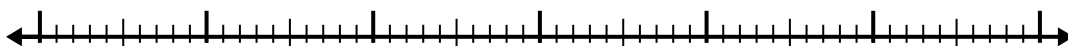
2) $5,2 - 2,2 =$



3) $3,3 - 2,2 =$



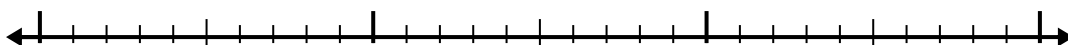
4) $7,6 - 3,9 =$



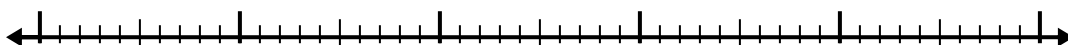
5) $10,4 - 2,2 =$




6) $7,2 - 1,8 =$



7) $5,8 - 3,6 =$



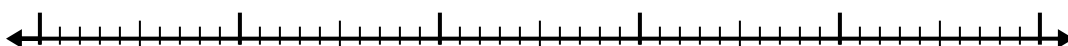
8) $8,2 - 2,8 =$



9) $5,7 - 2,2 =$



10) $4,1 - 2,2 =$



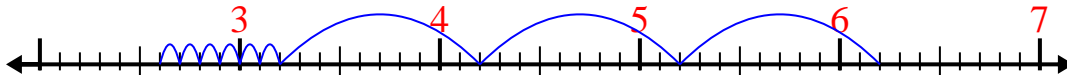
- 1. _____
- 2. _____
- 3. _____
- 4. _____
- 5. _____
- 6. _____
- 7. _____
- 8. _____
- 9. _____
- 10. _____



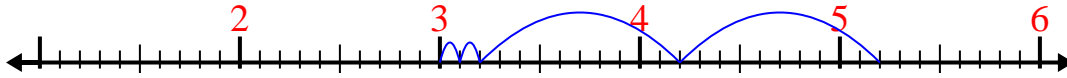
Verwenden Sie den Zahlenstrahl, um jedes Problem zu lösen.

Antworten

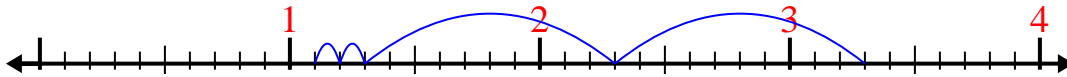
1) $6,2 - 3,6 =$

1. 2,6

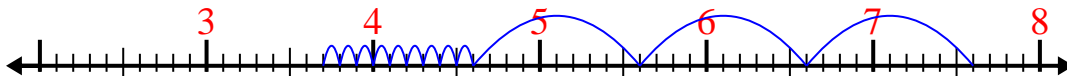
2) $5,2 - 2,2 =$

2. 3

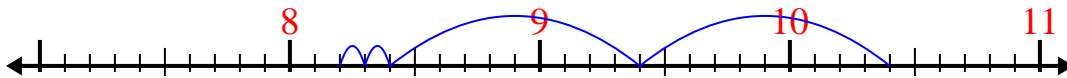
3) $3,3 - 2,2 =$

3. 1,1

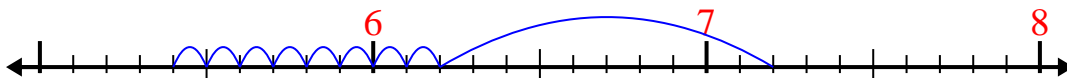
4) $7,6 - 3,9 =$

4. 3,7

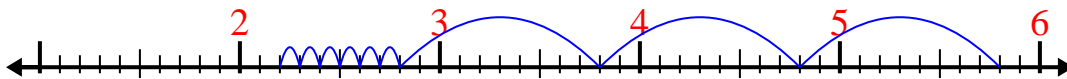
5) $10,4 - 2,2 =$

5. 8,2

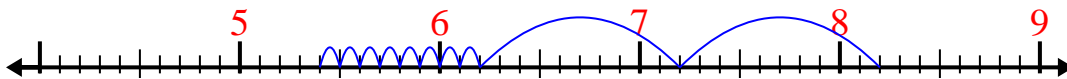
6) $7,2 - 1,8 =$

6. 5,4

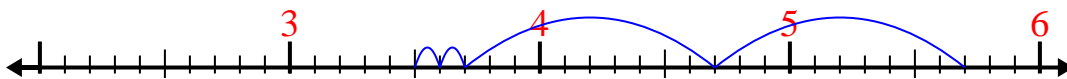
7) $5,8 - 3,6 =$

7. 2,2


8) $8,2 - 2,8 =$

8. 5,4

9) $5,7 - 2,2 =$

9. 3,5

10) $4,1 - 2,2 =$

10. 1,9