







Ordne die folgenden Flächen der Größe nach (von der kleinsten Fläche zur größten) gemäß den Schattierungen.


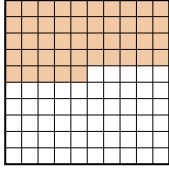

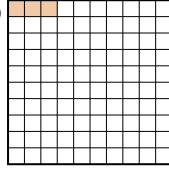
Antworten

Bsp) A  B  C  D 

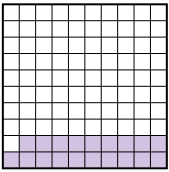

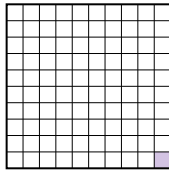
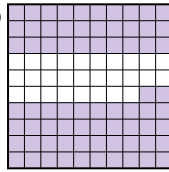
klein 0.05 - B
0.09 - C
0.5 - A
 groß 0.6 - D

Bsp. **B,C,A,D**

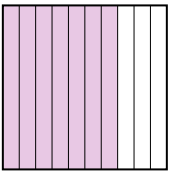
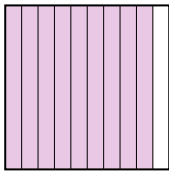
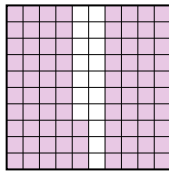
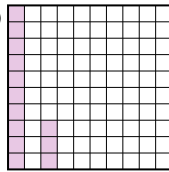
1. _____
2. _____
3. _____
4. _____
5. _____
6. _____
7. _____
8. _____

1) A  B  C  D 

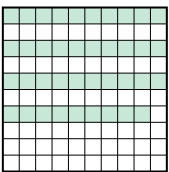

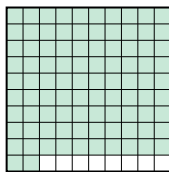
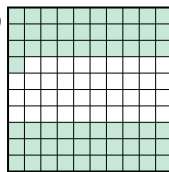
klein _____
 groß _____

2) A  B  C  D 

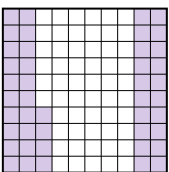

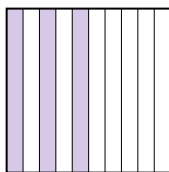

klein _____
 groß _____

3) A  B  C  D 

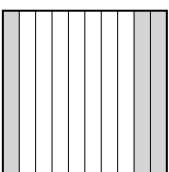

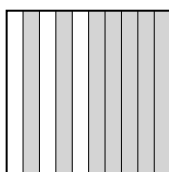
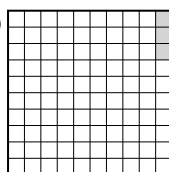
klein _____
 groß _____

4) A  B  C  D 

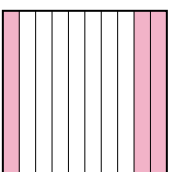
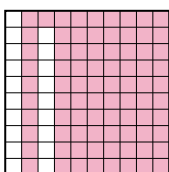
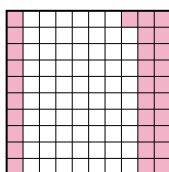
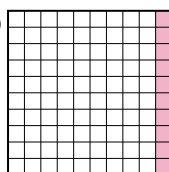
klein _____
 groß _____

5) A  B  C  D 


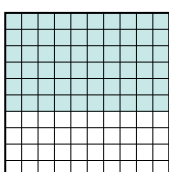

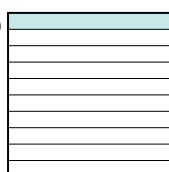
klein _____
 groß _____

6) A  B  C  D 

klein _____
 groß _____

7) A  B  C  D 

klein _____
 groß _____

8) A  B  C  D 

klein _____
 groß _____



Ordne die folgenden Flächen der Größe nach (von der kleinsten Fläche zur größten) gemäß den Schattierungen.

Antworten

Bsp)

A		B		C		D		klein	<u>0.05 - B</u>
								<u>0.09 - C</u>	
							groß	<u>0.5 - A</u>	
								<u>0.6 - D</u>	

1)

A		B		C		D		klein	<u>0.03 - D</u>
								<u>0.1 - C</u>	
							groß	<u>0.4 - A</u>	
								<u>0.45 - B</u>	

2)

A		B		C		D		klein	<u>0.01 - C</u>
								<u>0.19 - A</u>	
							groß	<u>0.72 - D</u>	
								<u>0.8 - B</u>	

3)

A		B		C		D		klein	<u>0.13 - D</u>
								<u>0.7 - A</u>	
							groß	<u>0.83 - C</u>	
								<u>0.9 - B</u>	

4)

A		B		C		D		klein	<u>0.39 - A</u>
								<u>0.61 - D</u>	
							groß	<u>0.8 - B</u>	
								<u>0.92 - C</u>	

5)

A		B		C		D		klein	<u>0.3 - C</u>
								<u>0.44 - A</u>	
							groß	<u>0.65 - D</u>	
								<u>0.91 - B</u>	

6)

A		B		C		D		klein	<u>0.03 - D</u>
								<u>0.14 - B</u>	
							groß	<u>0.3 - A</u>	
								<u>0.7 - C</u>	

7)

A		B		C		D		klein	<u>0.1 - D</u>
								<u>0.3 - A</u>	
							groß	<u>0.31 - C</u>	
								<u>0.81 - B</u>	

8)

A		B		C		D		klein	<u>0.1 - D</u>
								<u>0.6 - B</u>	
							groß	<u>0.7 - A</u>	
								<u>0.9 - C</u>	

- Bsp. **B,C,A,D**
1. **D,C,A,B**
2. **C,A,D,B**
3. **D,A,C,B**
4. **A,D,B,C**
5. **C,A,D,B**
6. **D,B,A,C**
7. **D,A,C,B**
8. **D,B,A,C**