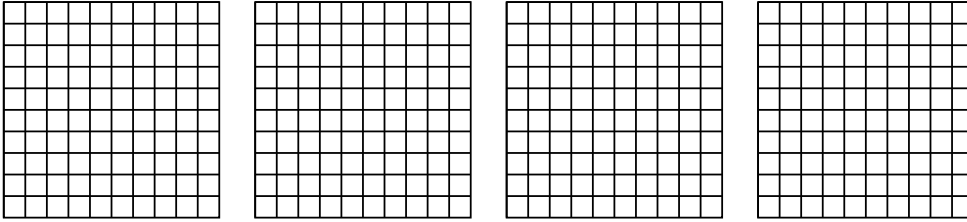




Wende die visuelle Methode an um jede Aufgabe zu lösen.

Antworten

1) $4 \cdot 0,45 =$

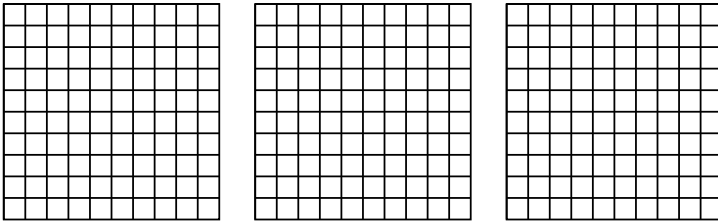


1. _____

2. _____

3. _____

2) $3 \cdot 0,25 =$

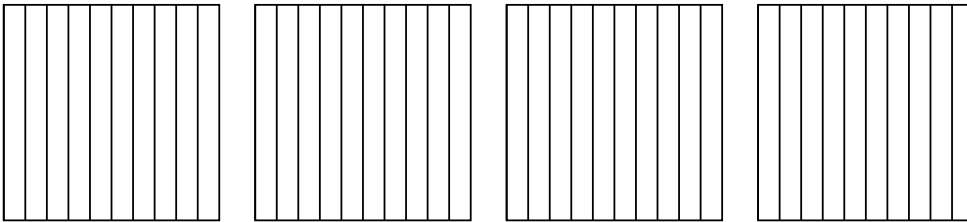


4. _____

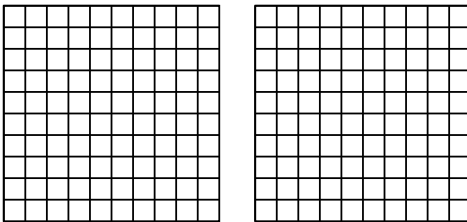
5. _____

6. _____

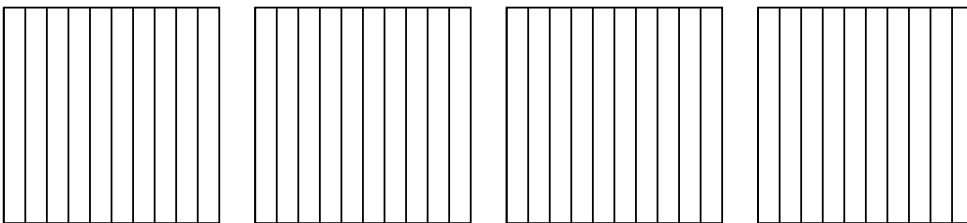
3) $4 \cdot 0,3 =$



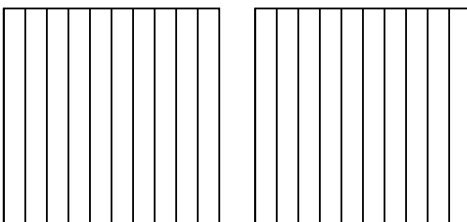
4) $2 \cdot 0,65 =$



5) $4 \cdot 0,4 =$



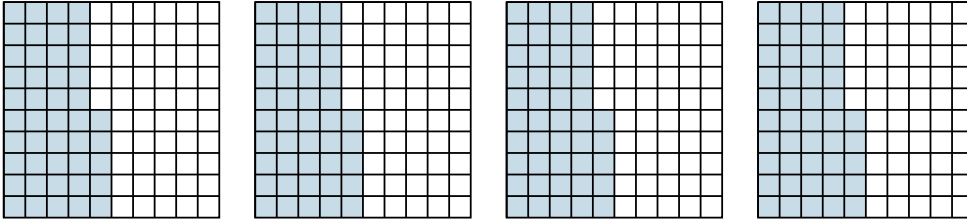
6) $2 \cdot 0,6 =$



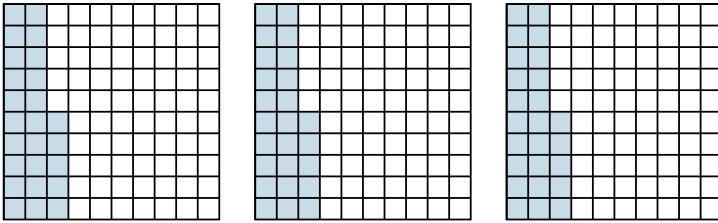


Wende die visuelle Methode an um jede Aufgabe zu lösen.

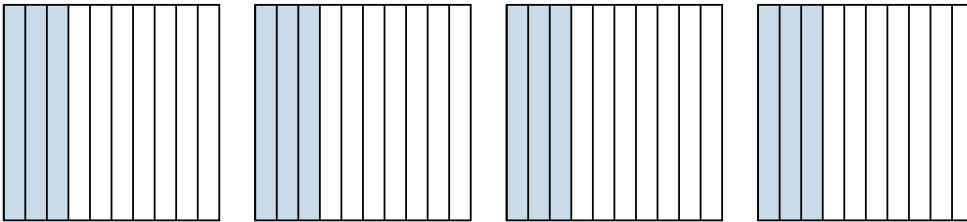
1) $4 \cdot 0,45 =$



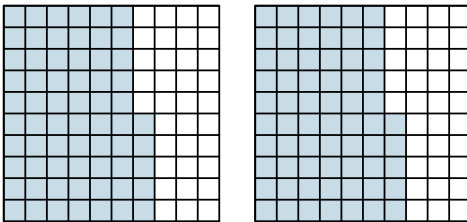
2) $3 \cdot 0,25 =$



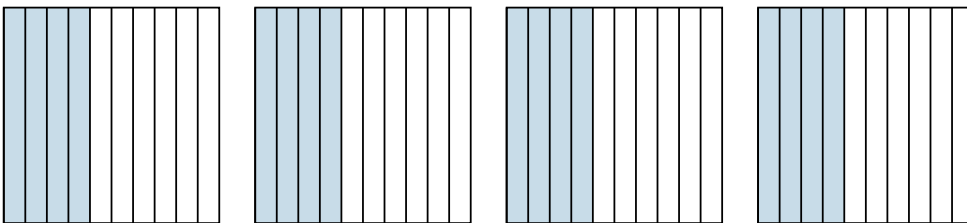
3) $4 \cdot 0,3 =$



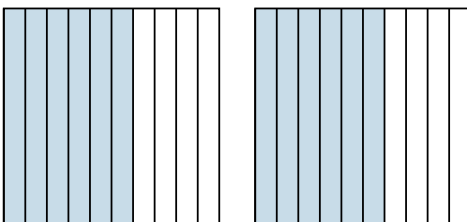
4) $2 \cdot 0,65 =$



5) $4 \cdot 0,4 =$



6) $2 \cdot 0,6 =$

**Antworten**

1. $\frac{180}{100} = 1,8$

2. $\frac{75}{100} = 0,75$

3. $\frac{12}{10} = 1,2$

4. $\frac{130}{100} = 1,3$

5. $\frac{16}{10} = 1,6$

6. $\frac{12}{10} = 1,2$