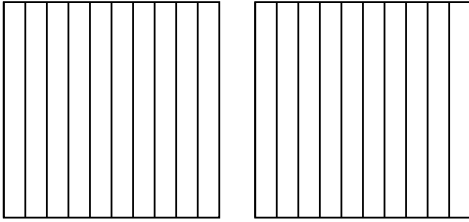




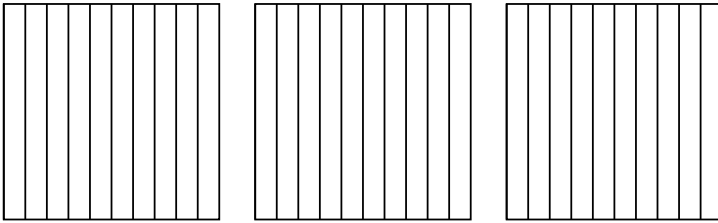
Wende die visuelle Methode an um jede Aufgabe zu lösen.

Antworten

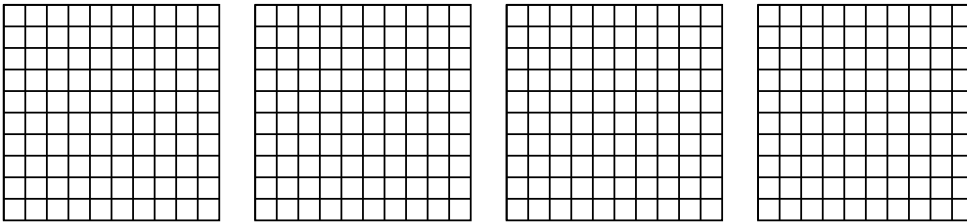
1) $2 \cdot 0,7 =$




2) $3 \cdot 0,5 =$



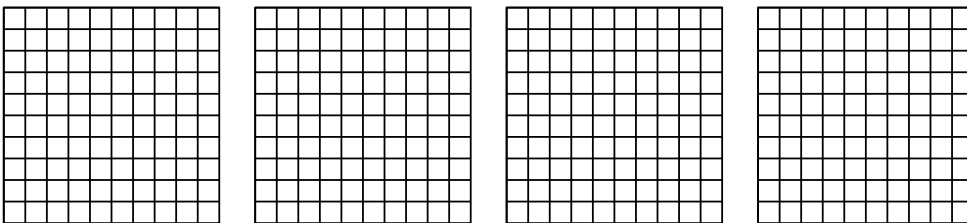
3) $4 \cdot 0,92 =$



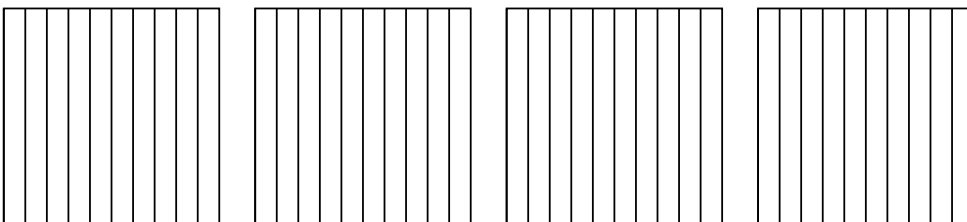
4) $3 \cdot 0,73 =$



5) $4 \cdot 0,20 =$



6) $4 \cdot 0,7 =$

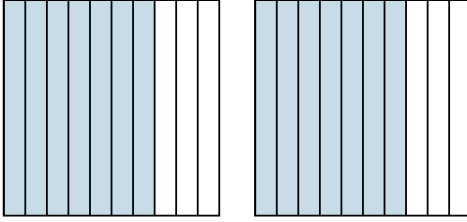


- 1. _____
- 2. _____
- 3. _____
- 4. _____
- 5. _____
- 6. _____

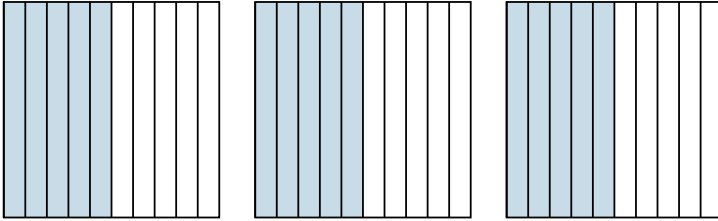


Wende die visuelle Methode an um jede Aufgabe zu lösen.

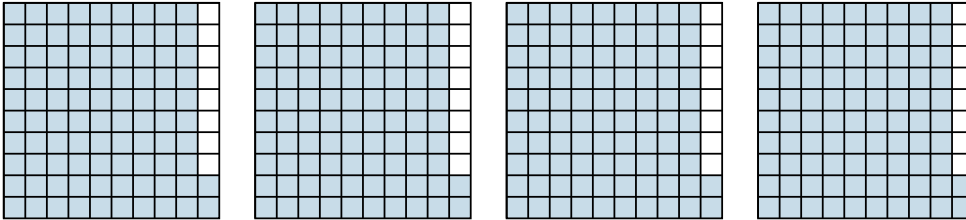
1) $2 \cdot 0,7 =$



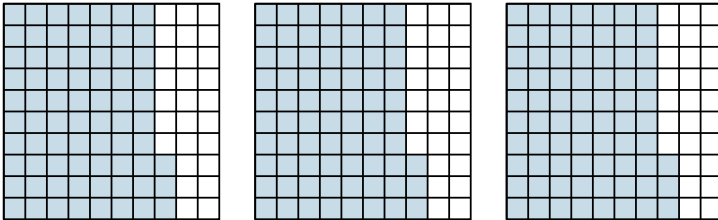
2) $3 \cdot 0,5 =$



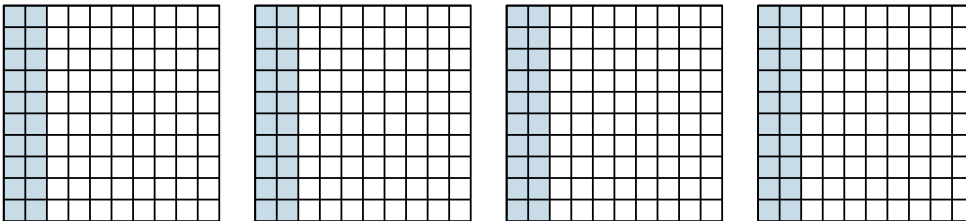
3) $4 \cdot 0,92 =$



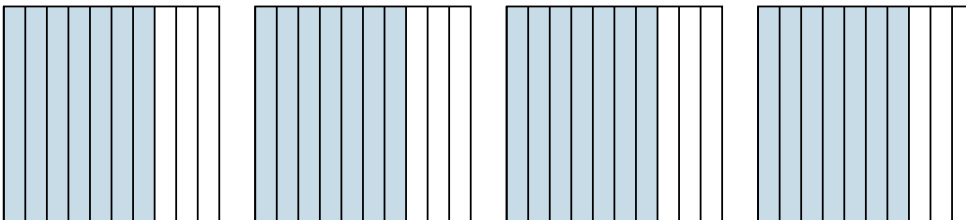
4) $3 \cdot 0,73 =$



5) $4 \cdot 0,20 =$



6) $4 \cdot 0,7 =$

**Antworten**

1. $\frac{14}{10} = 1,4$

2. $\frac{15}{10} = 1,5$

3. $\frac{368}{100} = 3,68$

4. $\frac{219}{100} = 2,19$

5. $\frac{80}{100} = 0,8$

6. $\frac{28}{10} = 2,8$