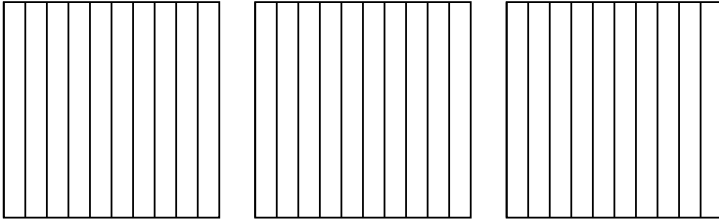


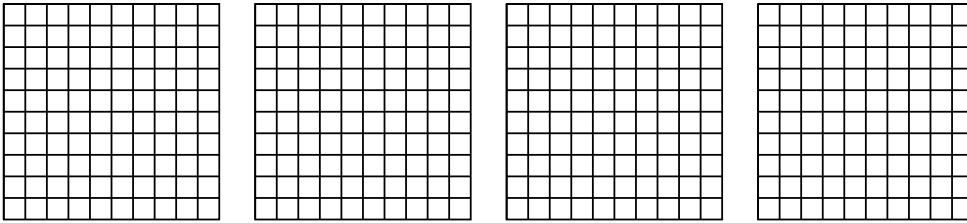


Wende die visuelle Methode an um jede Aufgabe zu lösen.

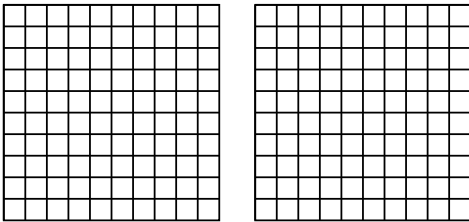
1) $3 \cdot 0,6 =$



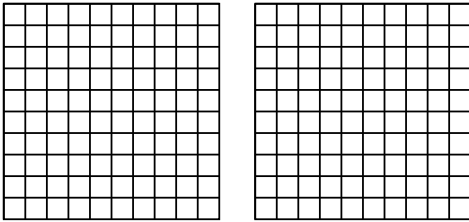
2) $4 \cdot 0,69 =$



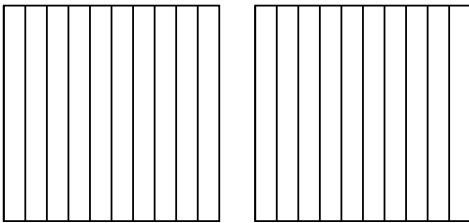
3) $2 \cdot 0,97 =$



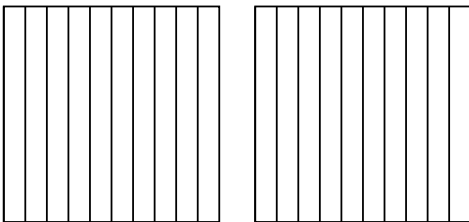
4) $2 \cdot 0,75 =$



5) $2 \cdot 0,3 =$



6) $2 \cdot 0,2 =$



Antworten

1. _____

2. _____

3. _____

4. _____

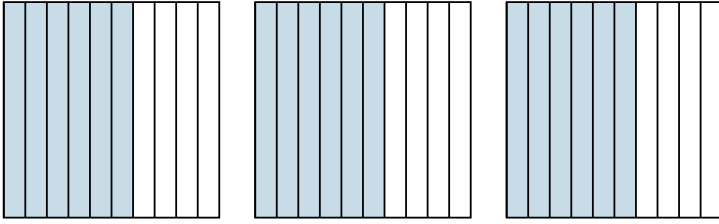
5. _____

6. _____

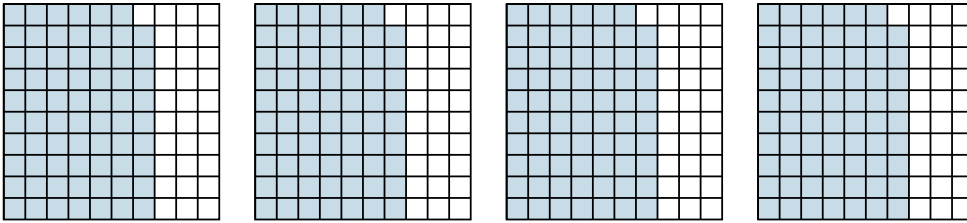


Wende die visuelle Methode an um jede Aufgabe zu lösen.

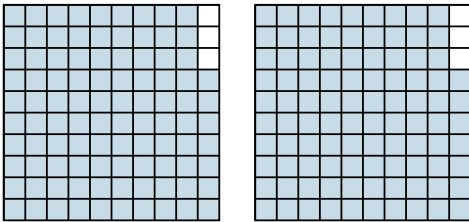
1) $3 \cdot 0,6 =$



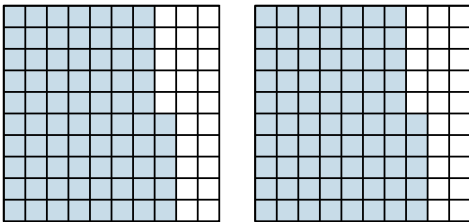
2) $4 \cdot 0,69 =$



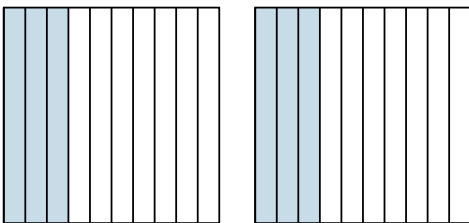
3) $2 \cdot 0,97 =$



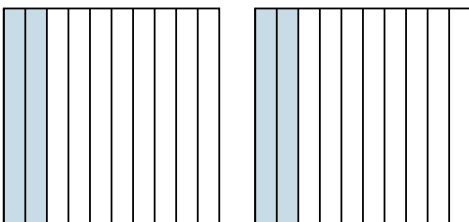
4) $2 \cdot 0,75 =$



5) $2 \cdot 0,3 =$



6) $2 \cdot 0,2 =$

**Antworten**

1. $\frac{18}{10} = 1,8$

2. $\frac{276}{100} = 2,76$

3. $\frac{194}{100} = 1,94$

4. $\frac{150}{100} = 1,5$

5. $\frac{6}{10} = 0,6$

6. $\frac{4}{10} = 0,4$