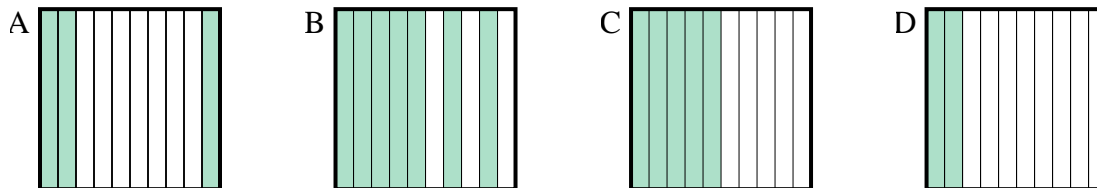


**Bestimme, welcher Buchstabe die Frage richtig beantwortet.****Antworten**

- 1) Which  $10 \times 1$  grid is shaded to represent the decimal number that, when added to 0,5, results in a total of 1.00?

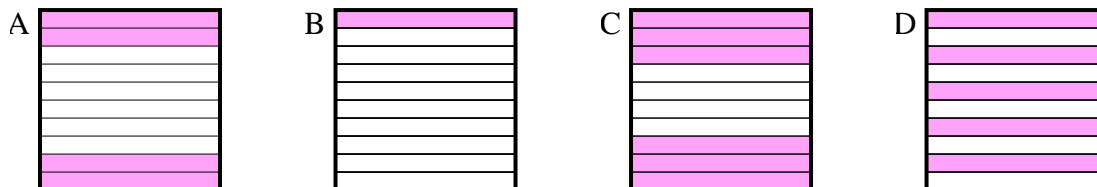


1. \_\_\_\_\_

2. \_\_\_\_\_

3. \_\_\_\_\_

- 2) Which  $10 \times 1$  grid is shaded to represent the decimal number that, when added to 0,6, results in a total of 1.00?

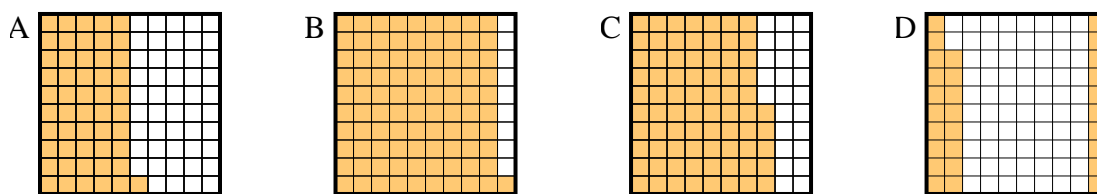


4. \_\_\_\_\_

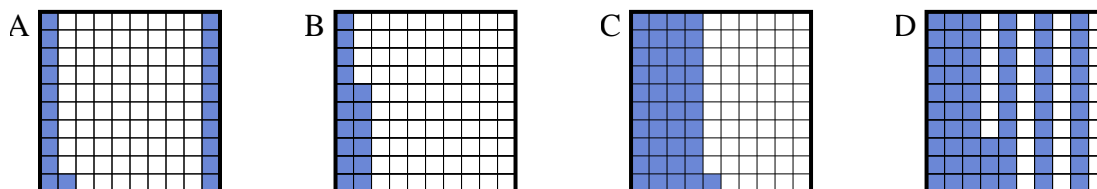
5. \_\_\_\_\_

6. \_\_\_\_\_

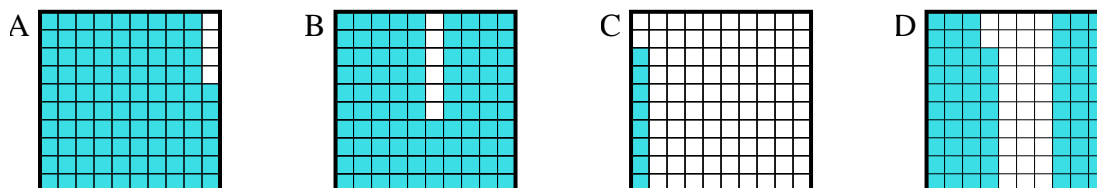
- 3) Which  $10 \times 10$  grid is shaded to represent the decimal number that, when added to 0,72, results in a total of 1.00?



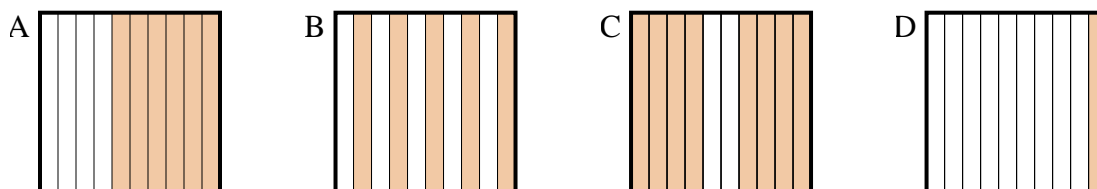
- 4) Which  $10 \times 10$  grid is shaded to represent the decimal number that, when added to 0,59, results in a total of 1.00?



- 5) Which  $10 \times 10$  grid is shaded to represent the decimal number that, when added to 0,32, results in a total of 1.00?



- 6) Which  $10 \times 1$  grid is shaded to represent the decimal number that, when added to 0,4, results in a total of 1.00?

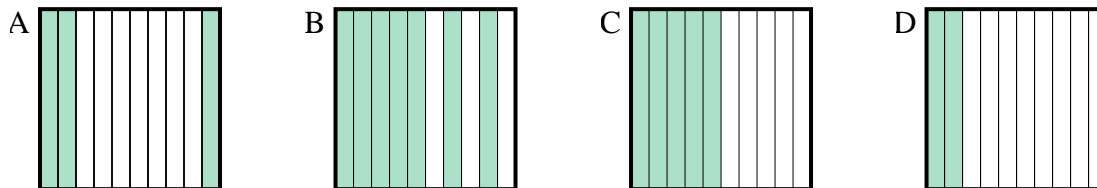




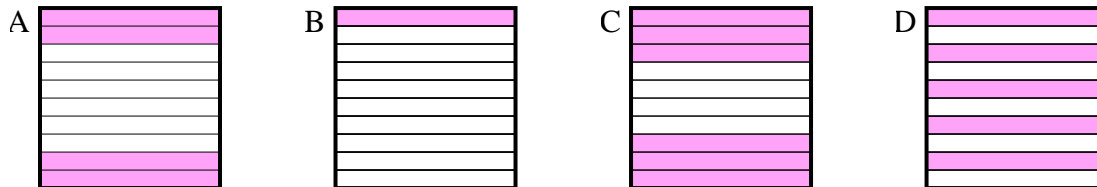
Bestimme, welcher Buchstabe die Frage richtig beantwortet.

**Antworten**

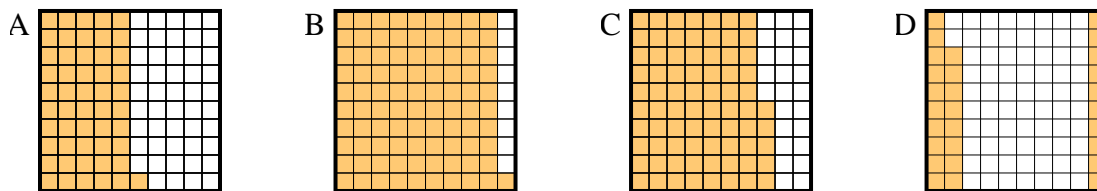
- 1) Which  $10 \times 1$  grid is shaded to represent the decimal number that, when added to 0,5, results in a total of 1.00?

1. **C**

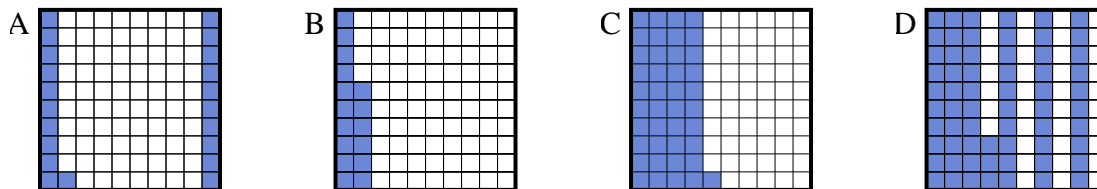
- 2) Which  $10 \times 1$  grid is shaded to represent the decimal number that, when added to 0,6, results in a total of 1.00?

2. **A**3. **D**4. **C**5. **D**6. **A**

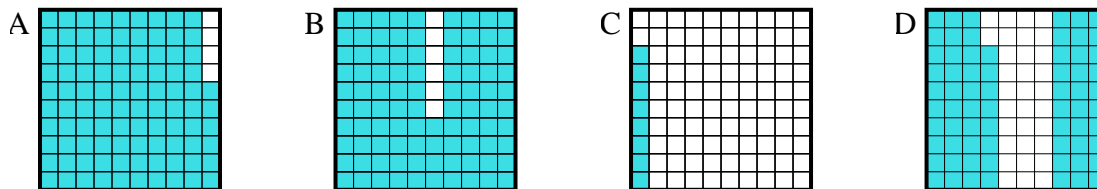
- 3) Which  $10 \times 10$  grid is shaded to represent the decimal number that, when added to 0,72, results in a total of 1.00?



- 4) Which  $10 \times 10$  grid is shaded to represent the decimal number that, when added to 0,59, results in a total of 1.00?



- 5) Which  $10 \times 10$  grid is shaded to represent the decimal number that, when added to 0,32, results in a total of 1.00?



- 6) Which  $10 \times 1$  grid is shaded to represent the decimal number that, when added to 0,4, results in a total of 1.00?

