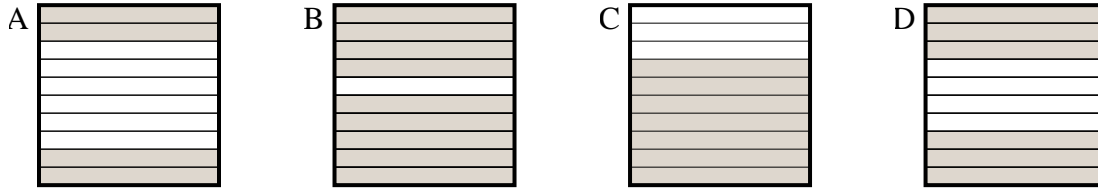




Bestimme, welcher Buchstabe die Frage richtig beantwortet.

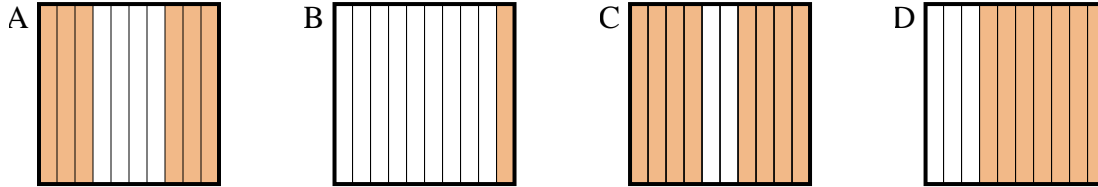
Antworten

1) Which 10×1 grid is shaded to represent the decimal number that, when added to 0,3, results in a total of 1.00?



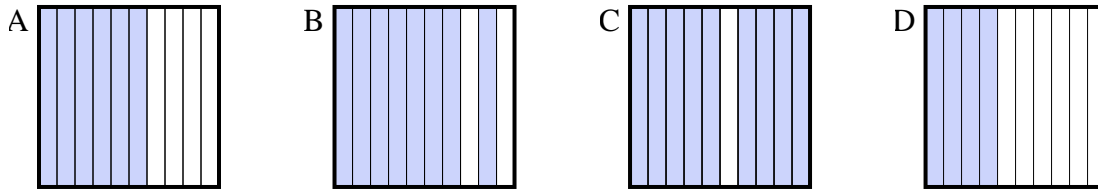
1. _____

2) Which 10×1 grid is shaded to represent the decimal number that, when added to 0,4, results in a total of 1.00?



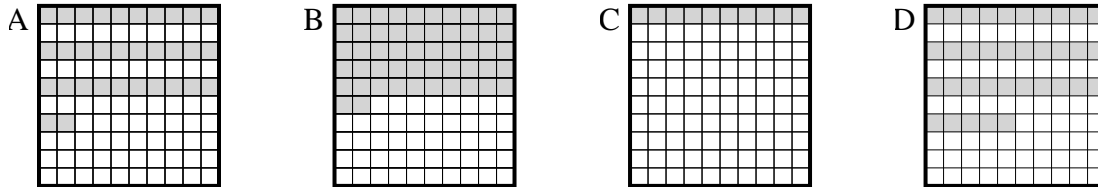
2. _____

3) Which 10×1 grid is shaded to represent the decimal number that, when added to 0,6, results in a total of 1.00?



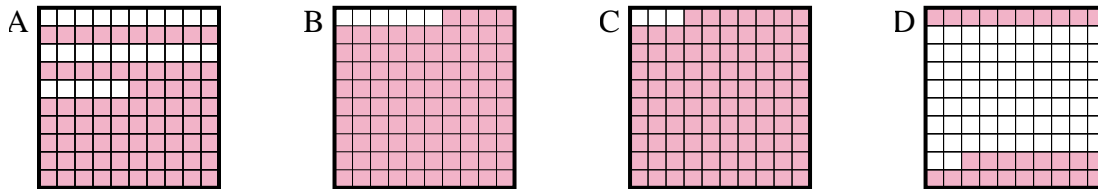
3. _____

4) Which 10×10 grid is shaded to represent the decimal number that, when added to 0,65, results in a total of 1.00?



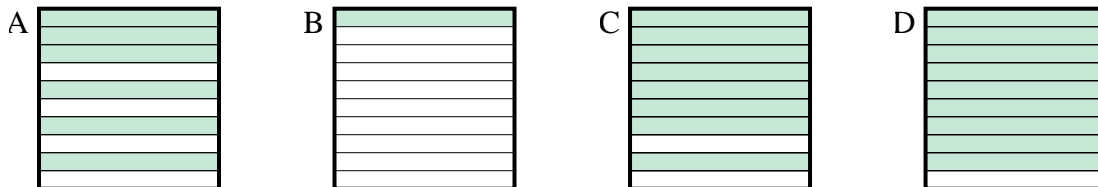
4. _____

5) Which 10×10 grid is shaded to represent the decimal number that, when added to 0,06, results in a total of 1.00?



5. _____

6) Which 10×1 grid is shaded to represent the decimal number that, when added to 0,9, results in a total of 1.00?



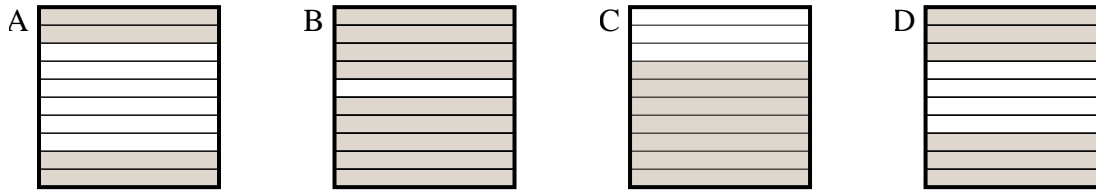
6. _____



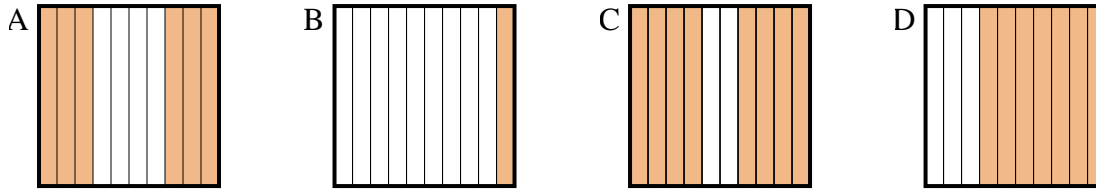
Bestimme, welcher Buchstabe die Frage richtig beantwortet.

Antworten

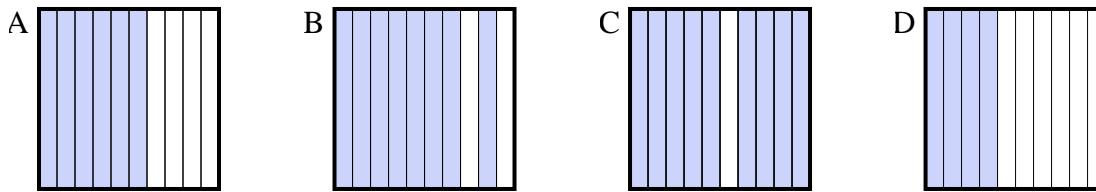
- 1) Which 10×1 grid is shaded to represent the decimal number that, when added to 0,3, results in a total of 1.00?

1. **C**

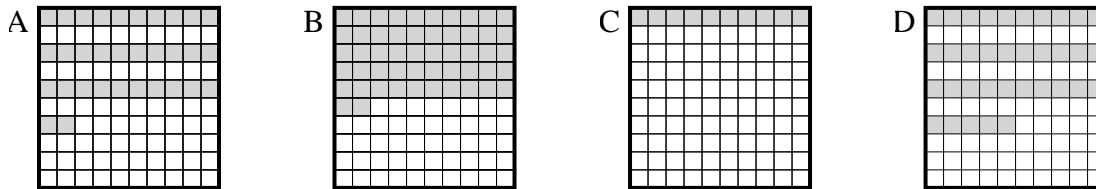
- 2) Which 10×1 grid is shaded to represent the decimal number that, when added to 0,4, results in a total of 1.00?

2. **A** 3. **D** 4. **D** 5. **B** 6. **B**

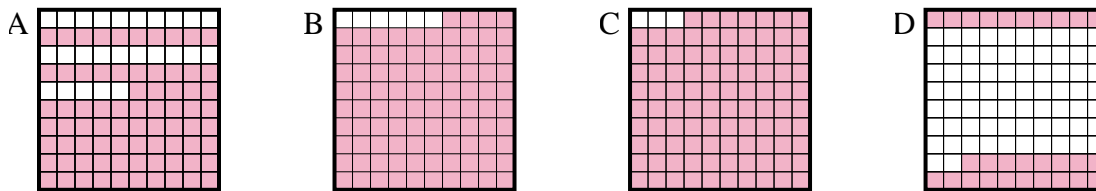
- 3) Which 10×1 grid is shaded to represent the decimal number that, when added to 0,6, results in a total of 1.00?



- 4) Which 10×10 grid is shaded to represent the decimal number that, when added to 0,65, results in a total of 1.00?



- 5) Which 10×10 grid is shaded to represent the decimal number that, when added to 0,06, results in a total of 1.00?



- 6) Which 10×1 grid is shaded to represent the decimal number that, when added to 0,9, results in a total of 1.00?

