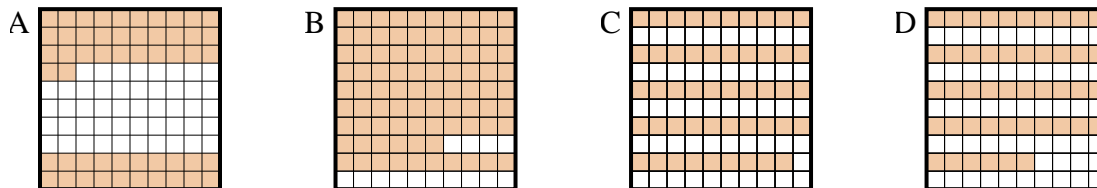
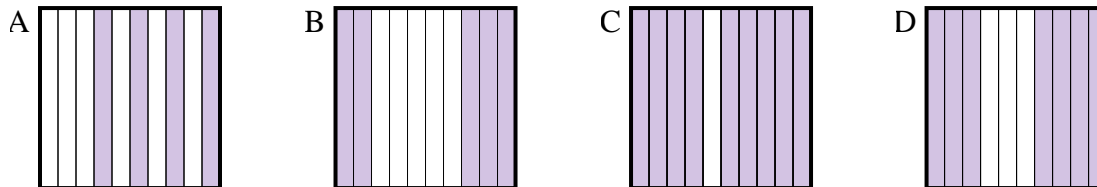


**Bestimme, welcher Buchstabe die Frage richtig beantwortet.****Antworten**

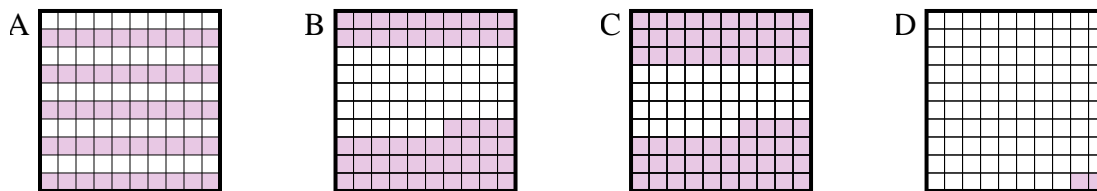
- 1) Which 10×10 grid is shaded to represent the decimal number that, when added to 0,48, results in a total of 1.00?



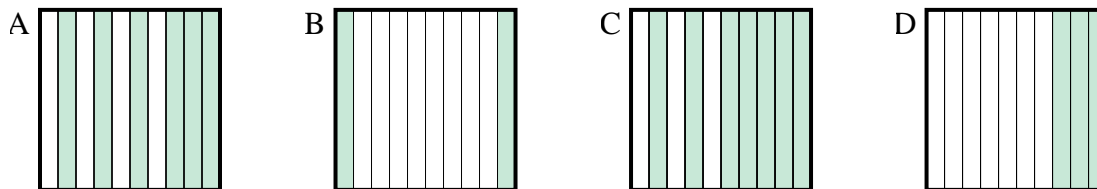
- 2) Which 10×1 grid is shaded to represent the decimal number that, when added to 0,5, results in a total of 1.00?



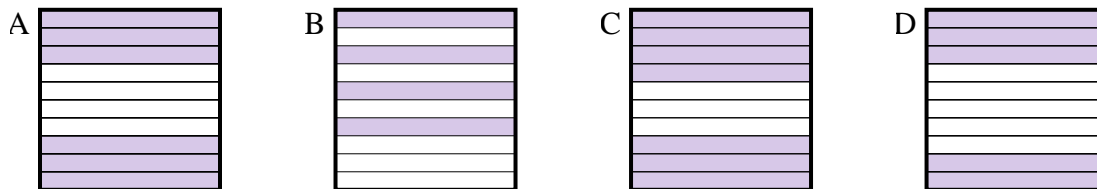
- 3) Which 10×10 grid is shaded to represent the decimal number that, when added to 0,5, results in a total of 1.00?



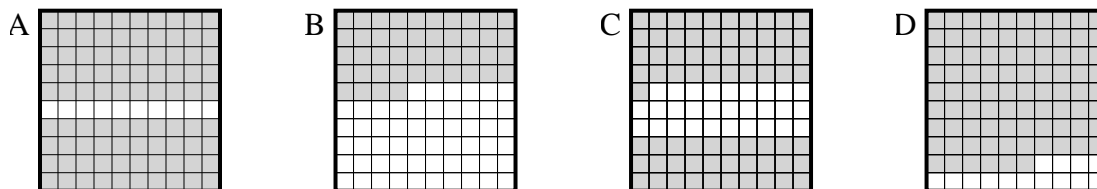
- 4) Which 10×1 grid is shaded to represent the decimal number that, when added to 0,8, results in a total of 1.00?



- 5) Which 10×1 grid is shaded to represent the decimal number that, when added to 0,6, results in a total of 1.00?



- 6) Which 10×10 grid is shaded to represent the decimal number that, when added to 0,1, results in a total of 1.00?



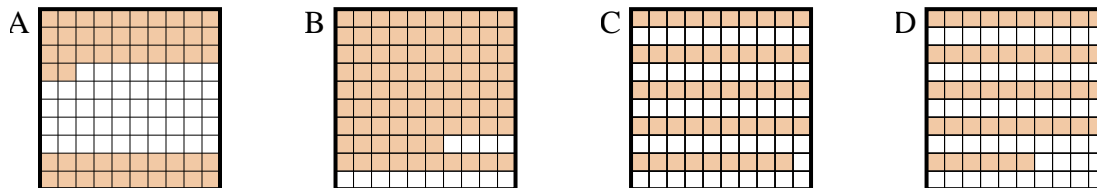
1. _____
2. _____
3. _____
4. _____
5. _____
6. _____



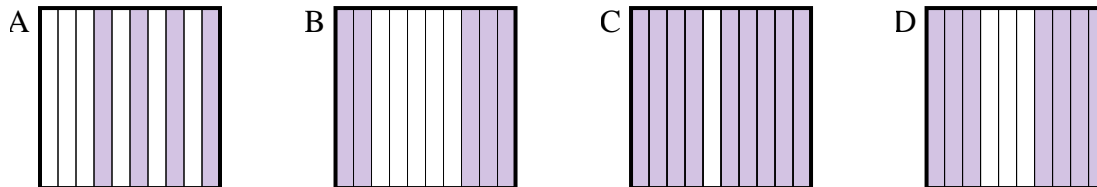
Bestimme, welcher Buchstabe die Frage richtig beantwortet.

Antworten

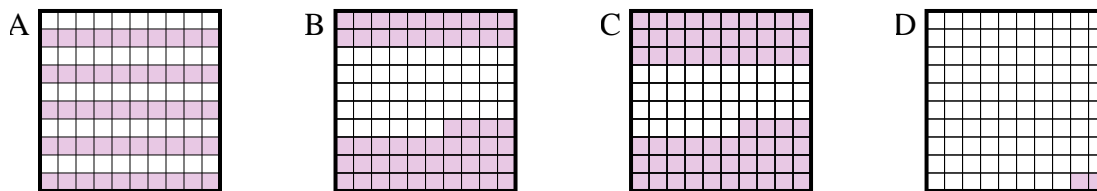
- 1) Which 10×10 grid is shaded to represent the decimal number that, when added to 0,48, results in a total of 1.00?

1. **A**

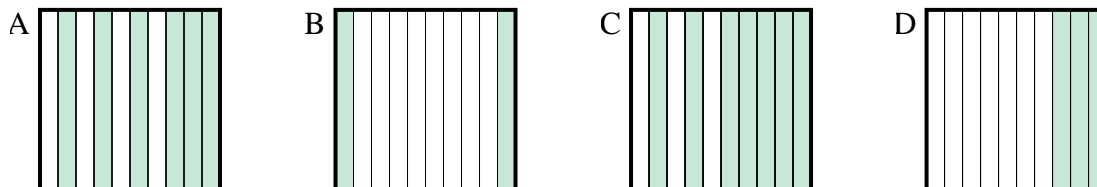
- 2) Which 10×1 grid is shaded to represent the decimal number that, when added to 0,5, results in a total of 1.00?

2. **B**3. **A**4. **B**5. **B**6. **A**

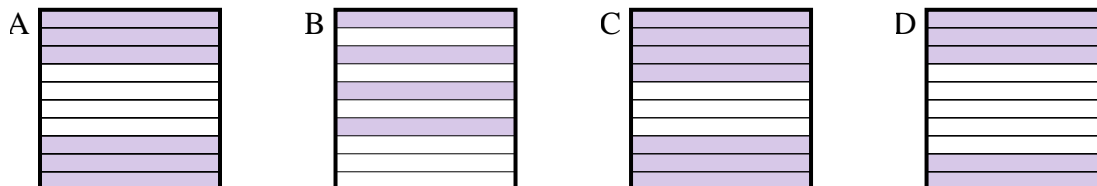
- 3) Which 10×10 grid is shaded to represent the decimal number that, when added to 0,5, results in a total of 1.00?



- 4) Which 10×1 grid is shaded to represent the decimal number that, when added to 0,8, results in a total of 1.00?



- 5) Which 10×1 grid is shaded to represent the decimal number that, when added to 0,6, results in a total of 1.00?



- 6) Which 10×10 grid is shaded to represent the decimal number that, when added to 0,1, results in a total of 1.00?

