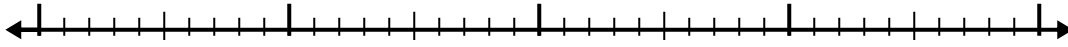




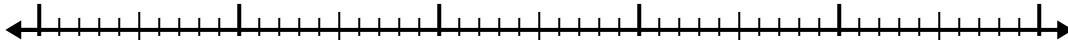
Verwenden Sie den Zahlenstrahl, um jedes Problem zu lösen.

Antworten

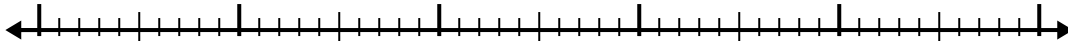
1) $7.4 + 2.2 =$



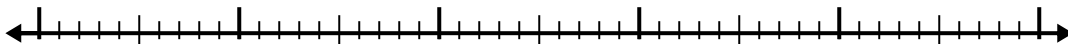
2) $5.4 + 2.3 =$



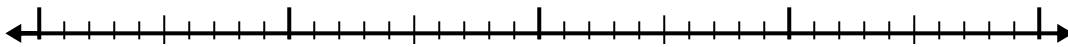
3) $4.7 + 2.9 =$



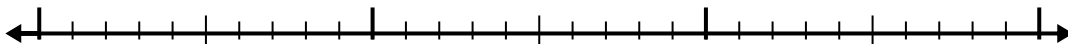
4) $4.4 + 3.7 =$




5) $2.2 + 2.3 =$



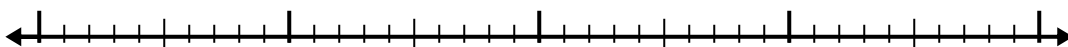
6) $3.9 + 1.3 =$



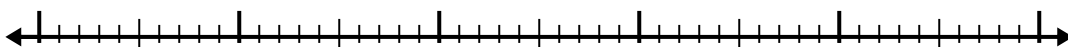
7) $1 + 3.9 =$



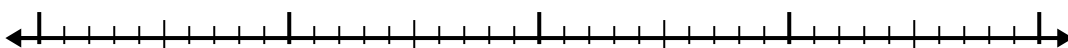
8) $5.8 + 2.1 =$



9) $6.3 + 2.3 =$



10) $7.3 + 2.9 =$

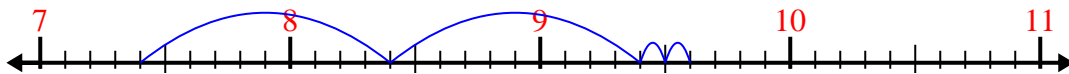


- 1. _____
- 2. _____
- 3. _____
- 4. _____
- 5. _____
- 6. _____
- 7. _____
- 8. _____
- 9. _____
- 10. _____

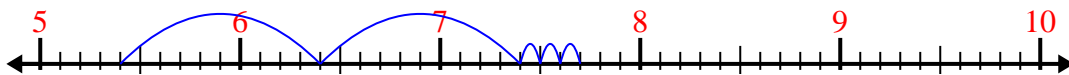


Verwenden Sie den Zahlenstrahl, um jedes Problem zu lösen.

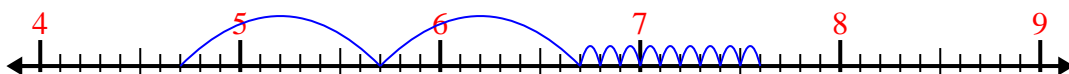
1) $7.4 + 2.2 =$



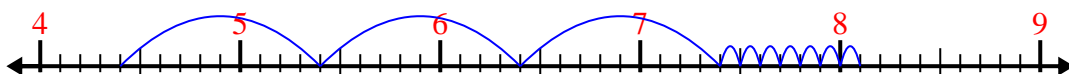
2) $5.4 + 2.3 =$



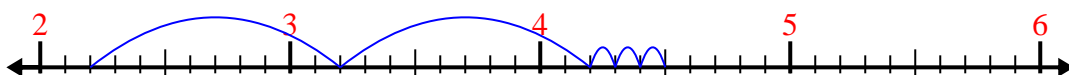
3) $4.7 + 2.9 =$




4) $4.4 + 3.7 =$



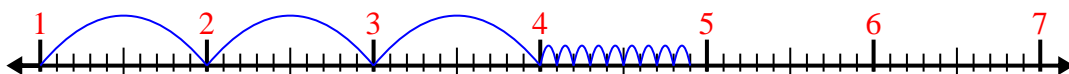
5) $2.2 + 2.3 =$



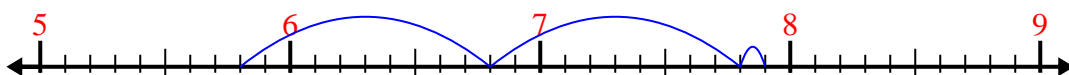
6) $3.9 + 1.3 =$



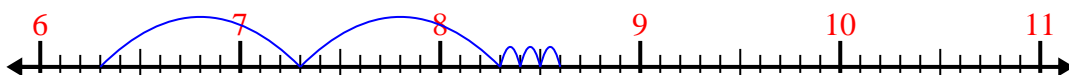
7) $1 + 3.9 =$



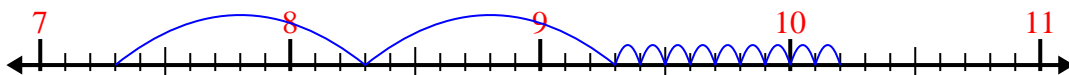
8) $5.8 + 2.1 =$



9) $6.3 + 2.3 =$



10) $7.3 + 2.9 =$



Antworten

1. 9,6

2. 7,7

3. 7,6

4. 8,1

5. 4,5

6. 5,2

7. 4,9

8. 7,9

9. 8,6

10. 10,2