



Zählen Sie die Anzahl der gezeigten Formen.

Antworten



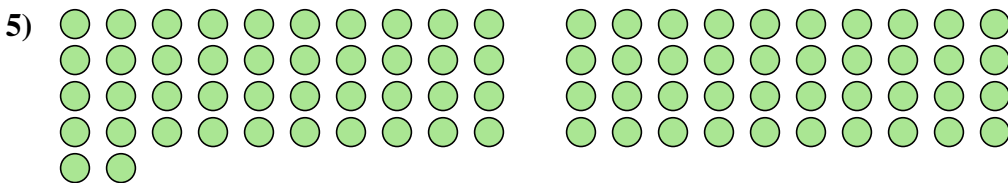
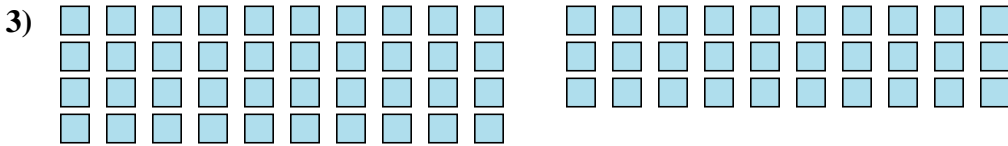
1. _____

2. _____

3. _____

4. _____

5. _____





Zählen Sie die Anzahl der gezeigten Formen.

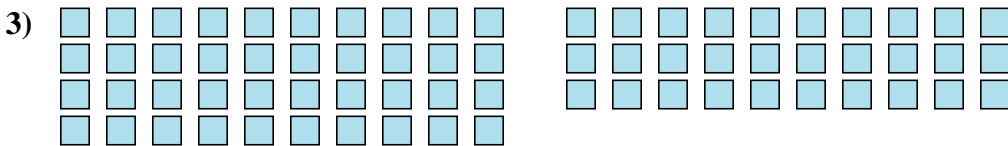
Antworten



1. 52



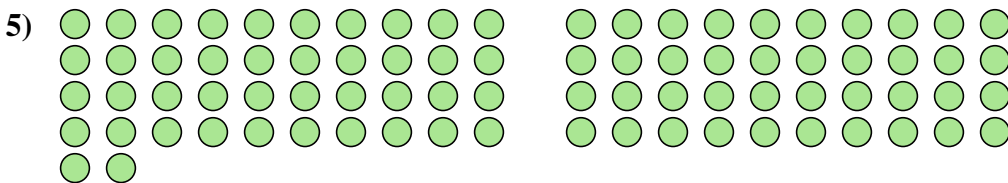
2. 7



3. 70



4. 22



5. 82