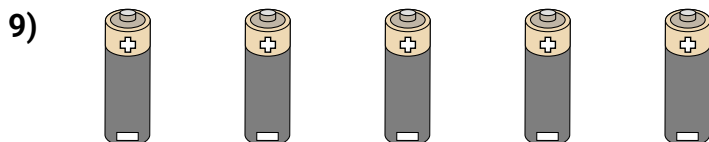
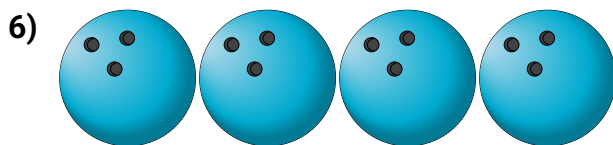
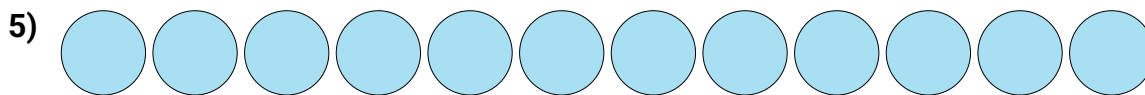
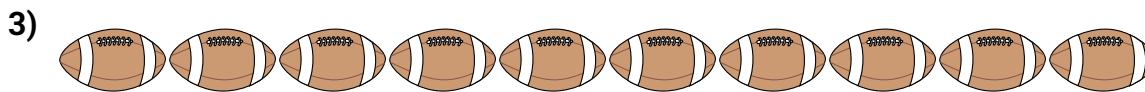






Bestimme die Anzahl der Zehnergruppe. Dann ermittle die ganze Anzahl der kleinen Blocks.

**Antworten**

1. \_\_\_\_\_

2. \_\_\_\_\_

3. \_\_\_\_\_

4. \_\_\_\_\_

5. \_\_\_\_\_

6. \_\_\_\_\_

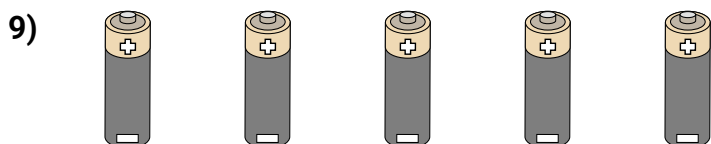
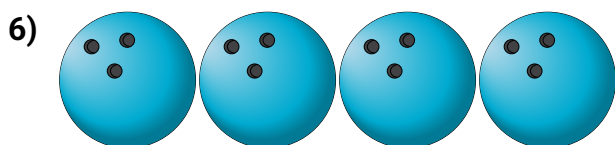
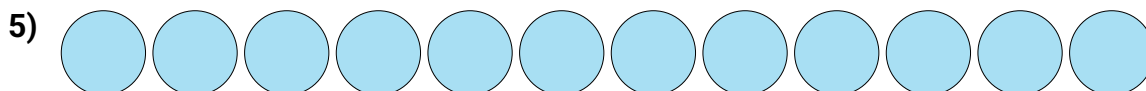
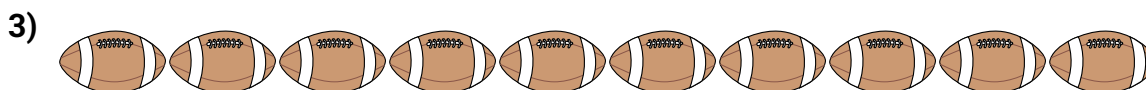

7. \_\_\_\_\_

8. \_\_\_\_\_

9. \_\_\_\_\_



Bestimme die Anzahl der Zehnergruppe. Dann ermittle die ganze Anzahl der kleinen Blocks.

**Antworten**1. **18**2. **5**3. **10**4. **13**5. **12**6. **4**7. **16**8. **16**9. **5**