
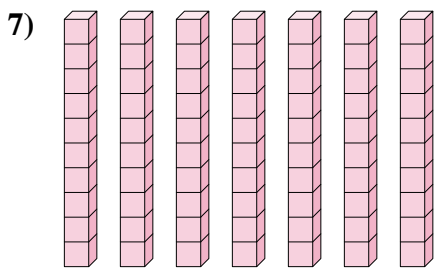
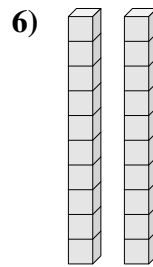
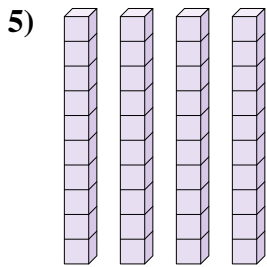
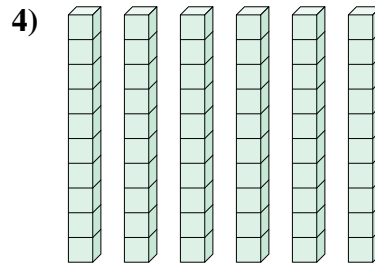
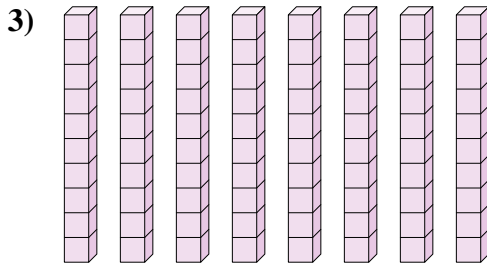
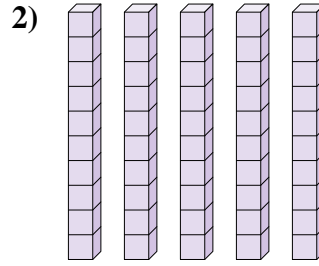
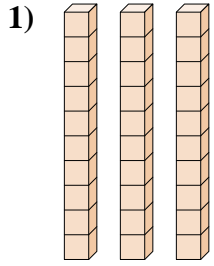




Bestimme die Anzahl der Zehnergruppe. Dann ermittle die ganze Anzahl der kleinen Blocks.


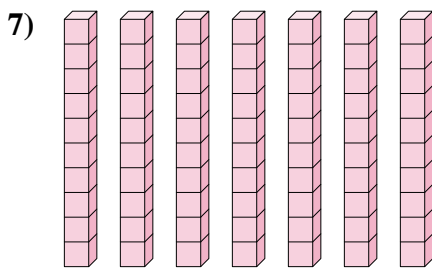
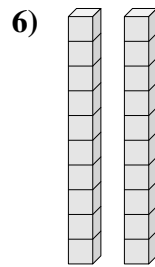
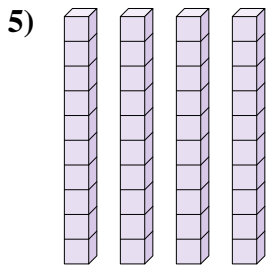
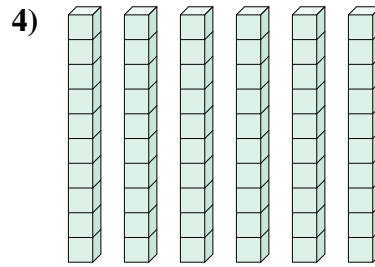
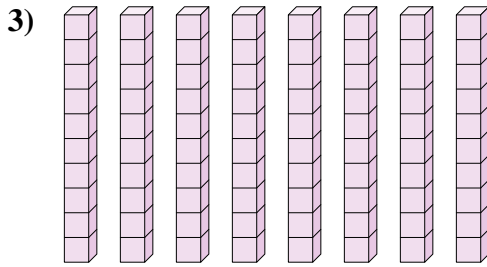
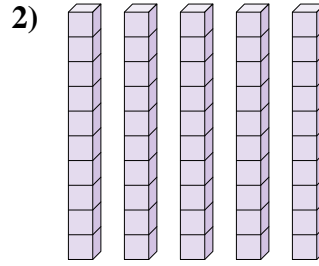
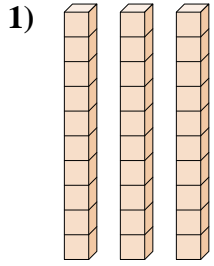
**Antworten**



- 1. \_\_\_\_\_
- 2. \_\_\_\_\_
- 3. \_\_\_\_\_
- 4. \_\_\_\_\_
- 5. \_\_\_\_\_
- 6. \_\_\_\_\_
- 7. \_\_\_\_\_
- 8. \_\_\_\_\_



Bestimme die Anzahl der Zehnergruppe. Dann ermittle die ganze Anzahl der kleinen Blocks.



**Antworten**

1. 3    30

2. 5    50

3. 8    80

4. 6    60

5. 4    40

6. 2    20

7. 7    70

8. 9    90