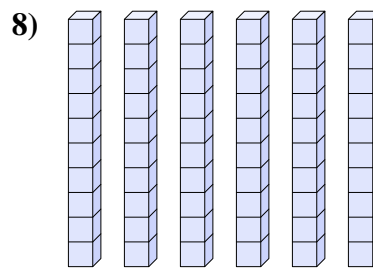
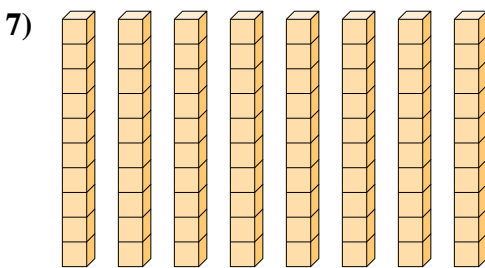
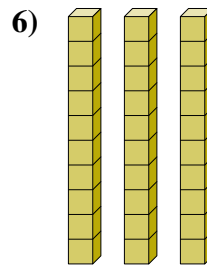
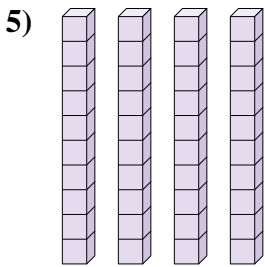
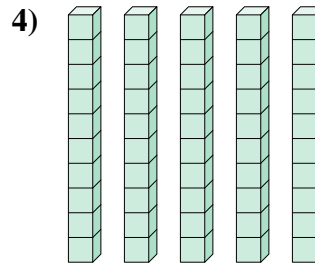
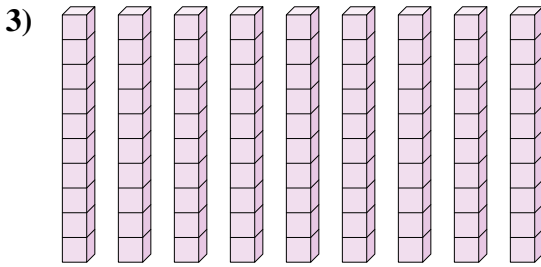
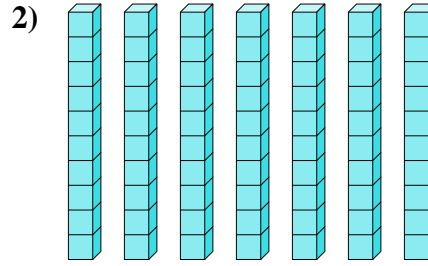
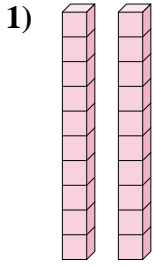




Bestimme die Anzahl der Zehnergruppe. Dann ermittle die ganze Anzahl der kleinen Blocks.

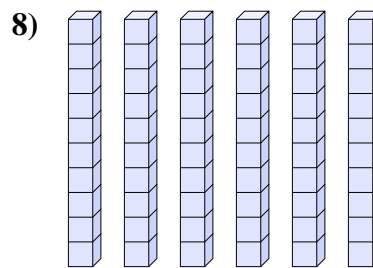
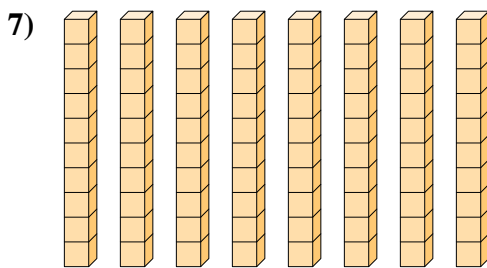
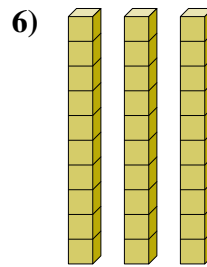
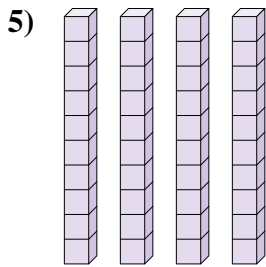
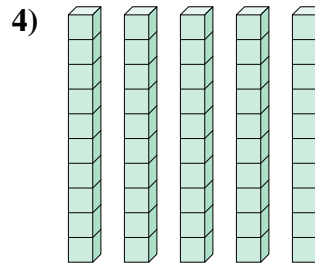
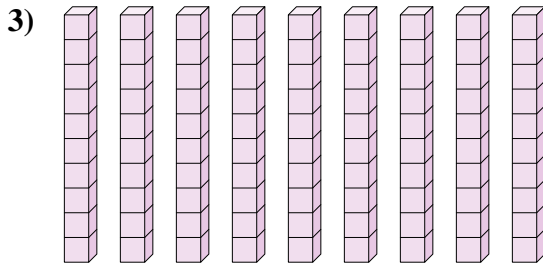
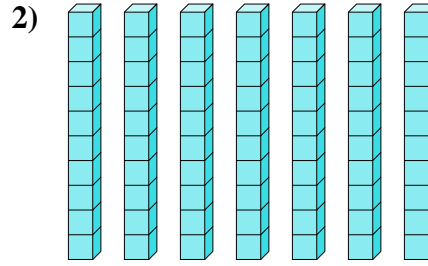
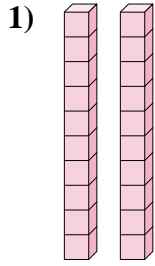
**Antworten**



- 1. \_\_\_\_\_
- 2. \_\_\_\_\_
- 3. \_\_\_\_\_
- 4. \_\_\_\_\_
- 5. \_\_\_\_\_
- 6. \_\_\_\_\_
- 7. \_\_\_\_\_
- 8. \_\_\_\_\_



Bestimme die Anzahl der Zehnergruppe. Dann ermittle die ganze Anzahl der kleinen Blocks.



Antworten

1. 2    20

2. 7    70

3. 9    90

4. 5    50

5. 4    40

6. 3    30

7. 8    80

8. 6    60