



Stelle fest, welcher Buchstabe das Volumen am besten darstellt.

Antworten

**Milliliter**

Un mililitro equivale a unas 20 gotas de agua.

Muchas botellas grandes de refrescos tienen 1 o 2 litros.

1 Liter = 1,000 Milliliters



1. \_\_\_\_\_
2. \_\_\_\_\_
3. \_\_\_\_\_
4. \_\_\_\_\_
5. \_\_\_\_\_
6. \_\_\_\_\_
7. \_\_\_\_\_
8. \_\_\_\_\_
9. \_\_\_\_\_

1)



Glue in a bottle

- A. 5 liter
- B. 2 liter
- C. 120 milliliters
- D. 3 milliliters

2)



Liquid a spoon holds

- A. 1 liter
- B. 5 liter
- C. 500 milliliters
- D. 5 milliliters

3)



Liquid in a tea cup

- A. 5 liter
- B. 2 milliliters
- C. 2 liter
- D. 250 milliliters


4)



Flour in a pan of brownies

- A. 3 liter
- B. 16 liter
- C. 10 milliliters
- D. 0.5 liter


5)



Eyedropper holds

- A. 1000 milliliters
- B. 2 milliliters
- C. 2 liter
- D. 500 milliliters

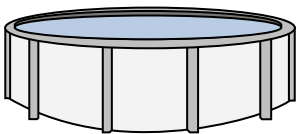
6)



Liquid in a thermos

- A. 20 milliliters
- B. 3 liter
- C. 440 milliliters
- D. 20 liter


7)



Water in a pool

- A. 800 liter
- B. 12000 milliliters
- C. 12000 liter
- D. 800 milliliters


8)



Sand a wheel barrow holds

- A. 3 liter
- B. 170 liter
- C. 500 milliliters
- D. 50 milliliters

9)



Liquid in a pitcher

- A. 5 liter
- B. 1 liter
- C. 500 milliliters
- D. 20 milliliters



Stelle fest, welcher Buchstabe das Volumen am besten darstellt.

Antworten

**Milliliter**

Un mililitro equivale a unas 20 gotas de agua.

Muchas botellas grandes de refrescos tienen 1 o 2 litros.

1 Liter = 1,000 Milliliters



1)



Glue in a bottle

- A. 5 liter
- B. 2 liter
- C. 120 milliliters
- D. 3 milliliters

2)



Liquid a spoon holds

- A. 1 liter
- B. 5 liter
- C. 500 milliliters
- D. 5 milliliters

3)



Liquid in a tea cup

- A. 5 liter
- B. 2 milliliters
- C. 2 liter
- D. 250 milliliters


4)



Flour in a pan of brownies

- A. 3 liter
- B. 16 liter
- C. 10 milliliters
- D. 0.5 liter


5)



Eyedropper holds

- A. 1000 milliliters
- B. 2 milliliters
- C. 2 liter
- D. 500 milliliters

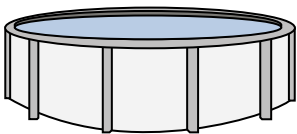
6)



Liquid in a thermos

- A. 20 milliliters
- B. 3 liter
- C. 440 milliliters
- D. 20 liter


7)



Water in a pool

- A. 800 liter
- B. 12000 milliliters
- C. 12000 liter
- D. 800 milliliters


8)



Sand a wheel barrow holds

- A. 3 liter
- B. 170 liter
- C. 500 milliliters
- D. 50 milliliters

9)



Liquid in a pitcher

- A. 5 liter
- B. 1 liter
- C. 500 milliliters
- D. 20 milliliters

- 1.   **C**
- 2.   **D**
- 3.   **D**
- 4.   **D**
- 5.   **B**
- 6.   **C**
- 7.   **C**
- 8.   **B**
- 9.   **A**