



Stelle fest, welcher Buchstabe das Volumen am besten darstellt.

Antworten

**Milliliter**

Un mililitro equivale a unas 20 gotas de agua.

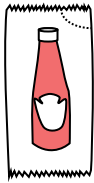
Muchas botellas grandes de refrescos tienen 1 o 2 litros.

1 Liter = 1,000 Milliliters



- 1. \_\_\_\_\_
- 2. \_\_\_\_\_
- 3. \_\_\_\_\_
- 4. \_\_\_\_\_
- 5. \_\_\_\_\_
- 6. \_\_\_\_\_
- 7. \_\_\_\_\_
- 8. \_\_\_\_\_
- 9. \_\_\_\_\_

1)



Ketchup in a packet

- A. 500 milliliters
- B. 1 liter
- C. 1 milliliter
- D. 50 milliliters


2)



Liquid a spoon holds

- A. 5 liter
- B. 500 milliliters
- C. 5 milliliters
- D. 1 liter

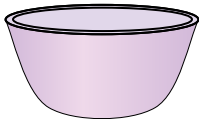
3)



Liquid in a pitcher

- A. 1 liter
- B. 5 liter
- C. 20 milliliters
- D. 500 milliliters

4)



Cereal Bowl

- A. 1 milliliter
- B. 50 milliliters
- C. 475 milliliters
- D. 2 liter

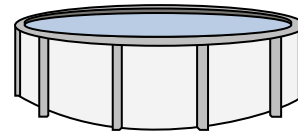
5)



Measuring Cup

- A. 237 liter
- B. 50 milliliters
- C. 237 milliliters
- D. 1 liter


6)



Water in a pool

- A. 12000 milliliters
- B. 12000 liter
- C. 800 liter
- D. 800 milliliters

7)



Paint in a can

- A. 400 milliliters
- B. 20 milliliters
- C. 3.75 liter
- D. 1 liter

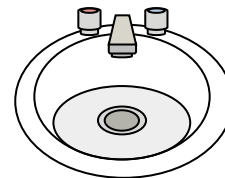
8)



Shampoo in a bottle

- A. 1 milliliter
- B. 1.5 liter
- C. 20 milliliters
- D. 20 liter

9)



Water in bathroom sink

- A. 10 milliliters
- B. 2 liter
- C. 500 milliliters
- D. 7.5 liter



Stelle fest, welcher Buchstabe das Volumen am besten darstellt.

Antworten

**Milliliter**

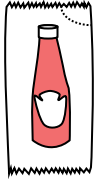
Un mililitro equivale a unas 20 gotas de agua.

Muchas botellas grandes de refrescos tienen 1 o 2 litros.

1 Liter = 1,000 Milliliters



1)



Ketchup in a packet

- A. 500 milliliters
- B. 1 liter
- C. 1 milliliter
- D. 50 milliliters


2)



Liquid a spoon holds

- A. 5 liter
- B. 500 milliliters
- C. 5 milliliters
- D. 1 liter

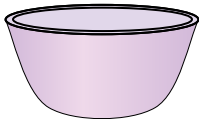
3)



Liquid in a pitcher

- A. 1 liter
- B. 5 liter
- C. 20 milliliters
- D. 500 milliliters


4)



Cereal Bowl

- A. 1 milliliter
- B. 50 milliliters
- C. 475 milliliters
- D. 2 liter

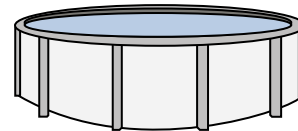
5)



Measuring Cup

- A. 237 liter
- B. 50 milliliters
- C. 237 milliliters
- D. 1 liter


6)



Water in a pool

- A. 12000 milliliters
- B. 12000 liter
- C. 800 liter
- D. 800 milliliters

7)



Paint in a can

- A. 400 milliliters
- B. 20 milliliters
- C. 3.75 liter
- D. 1 liter

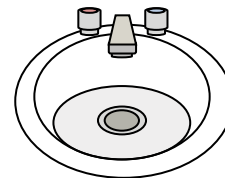
8)



Shampoo in a bottle

- A. 1 milliliter
- B. 1.5 liter
- C. 20 milliliters
- D. 20 liter

9)



Water in bathroom sink

- A. 10 milliliters
- B. 2 liter
- C. 500 milliliters
- D. 7.5 liter

- 1.   **C**
- 2.   **C**
- 3.   **B**
- 4.   **C**
- 5.   **C**
- 6.   **B**
- 7.   **C**
- 8.   **B**
- 9.   **D**



Stelle fest, welcher Buchstabe das Volumen am besten darstellt.

Antworten

**Milliliter**

Un mililitro equivale a unas 20 gotas de agua.



**Liter**


Muchas botellas grandes de refrescos tienen 1 o 2 litros.

1 Liter = 1,000 Milliliters




1. \_\_\_\_\_
2. \_\_\_\_\_
3. \_\_\_\_\_
4. \_\_\_\_\_
5. \_\_\_\_\_
6. \_\_\_\_\_
7. \_\_\_\_\_
8. \_\_\_\_\_
9. \_\_\_\_\_

1)



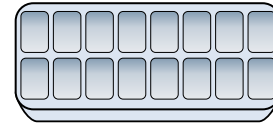
- Eyedropper holds
- A. 500 milliliters
  - B. 1000 milliliters
  - C. 2 liter
  - D. 2 milliliters

2)



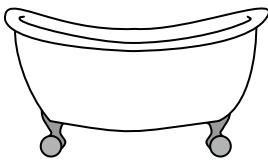
- Soda in a can
- A. 2 liter
  - B. 2 milliliters
  - C. 350 liter
  - D. 350 milliliters

3)



- Water in an ice tray
- A. 2 milliliters
  - B. 50 milliliters
  - C. 2 liter
  - D. 0.5 liter

4)




- Bathtub
- A. 3 liter
  - B. 500 milliliters
  - C. 170 liter
  - D. 5 milliliters

5)




- Ink in a pen
- A. 0.25 milliliters
  - B. 2 milliliters
  - C. 400 milliliters
  - D. 1 liter

6)



- Water a barrel holds
- A. 200 milliliters
  - B. 200 liter
  - C. 5 milliliters
  - D. 3 liter

7)



- Measuring Cup
- A. 50 milliliters
  - B. 237 milliliters
  - C. 1 liter
  - D. 237 liter

8)



- Shampoo in a bottle
- A. 1.5 liter
  - B. 1 milliliter
  - C. 20 liter
  - D. 20 milliliters

9)



- Toothpaste in a tube
- A. 1 liter
  - B. 2 liter
  - C. 5 milliliters
  - D. 120 milliliters



Stelle fest, welcher Buchstabe das Volumen am besten darstellt.

Antworten

**Milliliter**

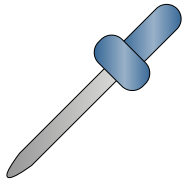
Un mililitro equivale a unas 20 gotas de agua.

Muchas botellas grandes de refrescos tienen 1 o 2 litros.

1 Liter = 1,000 Milliliters




1)



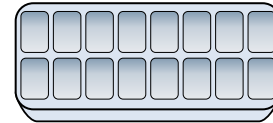
- Eyedropper holds
- A. 500 milliliters
  - B. 1000 milliliters
  - C. 2 liter
  - D. 2 milliliters

2)



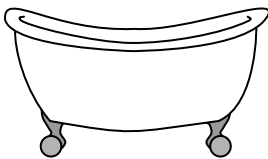
- Soda in a can
- A. 2 liter
  - B. 2 milliliters
  - C. 350 liter
  - D. 350 milliliters

3)



- Water in an ice tray
- A. 2 milliliters
  - B. 50 milliliters
  - C. 2 liter
  - D. 0.5 liter

4)




- Bathtub
- A. 3 liter
  - B. 500 milliliters
  - C. 170 liter
  - D. 5 milliliters

5)



- Ink in a pen
- A. 0.25 milliliters
  - B. 2 milliliters
  - C. 400 milliliters
  - D. 1 liter

6)



- Water a barrel holds
- A. 200 milliliters
  - B. 200 liter
  - C. 5 milliliters
  - D. 3 liter

7)



- Measuring Cup
- A. 50 milliliters
  - B. 237 milliliters
  - C. 1 liter
  - D. 237 liter

8)



- Shampoo in a bottle
- A. 1.5 liter
  - B. 1 milliliter
  - C. 20 liter
  - D. 20 milliliters

9)



- Toothpaste in a tube
- A. 1 liter
  - B. 2 liter
  - C. 5 milliliters
  - D. 120 milliliters

- 1.   **D**
- 2.   **D**
- 3.   **D**
- 4.   **C**
- 5.   **A**
- 6.   **B**
- 7.   **B**
- 8.   **A**
- 9.   **D**



Stelle fest, welcher Buchstabe das Volumen am besten darstellt.

Antworten

**Milliliter**

Un mililitro equivale a unas 20 gotas de agua.


Muchas botellas grandes de refrescos tienen 1 o 2 litros.

1 Liter = 1,000 Milliliters



- 1. \_\_\_\_\_
- 2. \_\_\_\_\_
- 3. \_\_\_\_\_
- 4. \_\_\_\_\_
- 5. \_\_\_\_\_
- 6. \_\_\_\_\_
- 7. \_\_\_\_\_
- 8. \_\_\_\_\_
- 9. \_\_\_\_\_

1)



Measuring Cup

- A. 237 liter
- B. 1 liter
- C. 237 milliliters
- D. 50 milliliters


2)



Water for a house plant

- A. 3 liter
- B. 80 liter
- C. 500 milliliters
- D. 2 milliliters

3)



Gas tank in a car

- A. 3 liter
- B. 60 liter
- C. 15 milliliters
- D. 70 milliliters

4)



Gallon of Milk

- A. 750 milliliters
- B. 3.75 liter
- C. 1 liter
- D. 50 milliliters

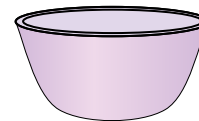
5)



Flour in a batch of cookies

- A. 350 milliliters
- B. 1 milliliter
- C. 2 liter
- D. 10 milliliters


6)



Cereal Bowl

- A. 475 milliliters
- B. 1 milliliter
- C. 50 milliliters
- D. 2 liter


7)



Ice Chest

- A. 100 liter
- B. 200 milliliters
- C. 100 milliliters
- D. 20 milliliters

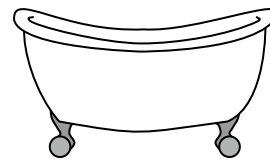
8)



Soda in a can

- A. 350 milliliters
- B. 350 liter
- C. 2 milliliters
- D. 2 liter

9)



Bathtub

- A. 170 liter
- B. 3 liter
- C. 500 milliliters
- D. 5 milliliters



Stelle fest, welcher Buchstabe das Volumen am besten darstellt.

Antworten

**Milliliter**


Un mililitro equivale a unas 20 gotas de agua.

Muchas botellas grandes de refrescos tienen 1 o 2 litros.

1 Liter = 1,000 Milliliters



1)



Measuring Cup

- A. 237 liter
- B. 1 liter
- C. 237 milliliters
- D. 50 milliliters


2)



Water for a house plant

- A. 3 liter
- B. 80 liter
- C. 500 milliliters
- D. 2 milliliters

3)



Gas tank in a car

- A. 3 liter
- B. 60 liter
- C. 15 milliliters
- D. 70 milliliters

4)



Gallon of Milk

- A. 750 milliliters
- B. 3.75 liter
- C. 1 liter
- D. 50 milliliters

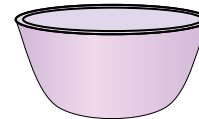
5)



Flour in a batch of cookies

- A. 350 milliliters
- B. 1 milliliter
- C. 2 liter
- D. 10 milliliters


6)



Cereal Bowl

- A. 475 milliliters
- B. 1 milliliter
- C. 50 milliliters
- D. 2 liter


7)



Ice Chest

- A. 100 liter
- B. 200 milliliters
- C. 100 milliliters
- D. 20 milliliters

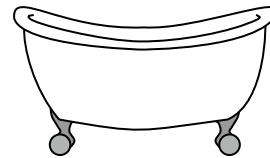
8)



Soda in a can

- A. 350 milliliters
- B. 350 liter
- C. 2 milliliters
- D. 2 liter

9)



Bathtub

- A. 170 liter
- B. 3 liter
- C. 500 milliliters
- D. 5 milliliters

- 1.   **C**
- 2.   **C**
- 3.   **B**
- 4.   **B**
- 5.   **A**
- 6.   **A**
- 7.   **A**
- 8.   **A**
- 9.   **A**



Stelle fest, welcher Buchstabe das Volumen am besten darstellt.

Antworten

**Milliliter**

Un mililitro equivale a unas 20 gotas de agua.

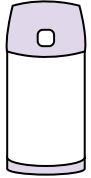
Muchas botellas grandes de refrescos tienen 1 o 2 litros.

1 Liter = 1,000 Milliliters



- 1. \_\_\_\_\_
- 2. \_\_\_\_\_
- 3. \_\_\_\_\_
- 4. \_\_\_\_\_
- 5. \_\_\_\_\_
- 6. \_\_\_\_\_
- 7. \_\_\_\_\_
- 8. \_\_\_\_\_
- 9. \_\_\_\_\_

1)



Liquid in a thermos

- A. 20 liter
- B. 3 liter
- C. 440 milliliters
- D. 20 milliliters

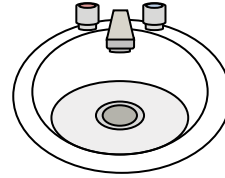
2)



Gallon of Milk

- A. 1 liter
- B. 3.75 liter
- C. 50 milliliters
- D. 750 milliliters


3)



Water in bathroom sink

- A. 500 milliliters
- B. 10 milliliters
- C. 7.5 liter
- D. 2 liter


4)



Measuring Cup

- A. 50 milliliters
- B. 237 milliliters
- C. 1 liter
- D. 237 liter

5)



Soda in a can

- A. 2 liter
- B. 350 milliliters
- C. 350 liter
- D. 2 milliliters

6)



Water for a house plant

- A. 2 milliliters
- B. 80 liter
- C. 500 milliliters
- D. 3 liter

7)



Cafeteria Milk

- A. 237 liter
- B. 1 liter
- C. 237 milliliters
- D. 2 liter

8)



Ink in a pen

- A. 2 milliliters
- B. 0.25 milliliters
- C. 1 liter
- D. 400 milliliters

9)



Liquid in a tea cup

- A. 2 milliliters
- B. 250 milliliters
- C. 2 liter
- D. 5 liter



Stelle fest, welcher Buchstabe das Volumen am besten darstellt.

Antworten

**Milliliter**

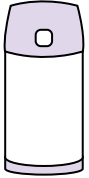
Un mililitro equivale a unas 20 gotas de agua.

Muchas botellas grandes de refrescos tienen 1 o 2 litros.

1 Liter = 1,000 Milliliters



1)



Liquid in a thermos

- A. 20 liter
- B. 3 liter
- C. 440 milliliters
- D. 20 milliliters

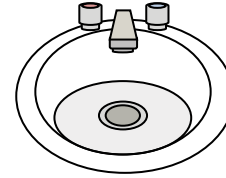
2)



Gallon of Milk

- A. 1 liter
- B. 3.75 liter
- C. 50 milliliters
- D. 750 milliliters


3)



Water in bathroom sink

- A. 500 milliliters
- B. 10 milliliters
- C. 7.5 liter
- D. 2 liter


4)



Measuring Cup

- A. 50 milliliters
- B. 237 milliliters
- C. 1 liter
- D. 237 liter

5)



Soda in a can

- A. 2 liter
- B. 350 milliliters
- C. 350 liter
- D. 2 milliliters

6)



Water for a house plant

- A. 2 milliliters
- B. 80 liter
- C. 500 milliliters
- D. 3 liter

7)



Cafeteria Milk

- A. 237 liter
- B. 1 liter
- C. 237 milliliters
- D. 2 liter

8)



Ink in a pen

- A. 2 milliliters
- B. 0.25 milliliters
- C. 1 liter
- D. 400 milliliters

9)



Liquid in a tea cup

- A. 2 milliliters
- B. 250 milliliters
- C. 2 liter
- D. 5 liter

- 1.   **C**
- 2.   **B**
- 3.   **C**
- 4.   **B**
- 5.   **B**
- 6.   **C**
- 7.   **C**
- 8.   **B**
- 9.   **B**






Stelle fest, welcher Buchstabe das Volumen am besten darstellt.

Antworten

**Milliliter**

Un mililitro equivale a unas 20 gotas de agua.



**Liter**


Muchas botellas grandes de refrescos tienen 1 o 2 litros.

1 Liter = 1,000 Milliliters



1. \_\_\_\_\_
2. \_\_\_\_\_
3. \_\_\_\_\_
4. \_\_\_\_\_
5. \_\_\_\_\_
6. \_\_\_\_\_
7. \_\_\_\_\_
8. \_\_\_\_\_
9. \_\_\_\_\_

1)



Soda in a can

- A. 350 liter
- B. 2 milliliters
- C. 350 milliliters
- D. 2 liter


2)



Flour in a pan of brownies

- A. 10 milliliters
- B. 0.5 liter
- C. 3 liter
- D. 16 liter


3)



Sand a wheel barrow holds

- A. 500 milliliters
- B. 3 liter
- C. 170 liter
- D. 50 milliliters

4)



Gas tank in a car

- A. 3 liter
- B. 70 milliliters
- C. 60 liter
- D. 15 milliliters

5)



Sand in a pail

- A. 20 liter
- B. 1 milliliter
- C. 4 liter
- D. 4 milliliters


6)



Glue in a bottle

- A. 120 milliliters
- B. 3 milliliters
- C. 5 liter
- D. 2 liter

7)



Water in an ice tray

- A. 2 milliliters
- B. 0.5 liter
- C. 50 milliliters
- D. 2 liter

8)



Measuring Cup

- A. 237 milliliters
- B. 237 liter
- C. 50 milliliters
- D. 1 liter

9)



Shampoo in a bottle

- A. 1 milliliter
- B. 1.5 liter
- C. 20 liter
- D. 20 milliliters



Stelle fest, welcher Buchstabe das Volumen am besten darstellt.

Antworten

**Milliliter**


Un mililitro equivale a unas 20 gotas de agua.

Muchas botellas grandes de refrescos tienen 1 o 2 litros.

1 Liter = 1,000 Milliliters



1)



Soda in a can

- A. 350 liter
- B. 2 milliliters
- C. 350 milliliters
- D. 2 liter


2)



Flour in a pan of brownies

- A. 10 milliliters
- B. 0.5 liter
- C. 3 liter
- D. 16 liter


3)



Sand a wheel barrow holds

- A. 500 milliliters
- B. 3 liter
- C. 170 liter
- D. 50 milliliters

4)



Gas tank in a car

- A. 3 liter
- B. 70 milliliters
- C. 60 liter
- D. 15 milliliters

5)



Sand in a pail

- A. 20 liter
- B. 1 milliliter
- C. 4 liter
- D. 4 milliliters

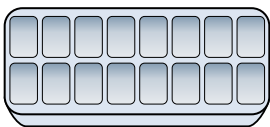
6)



Glue in a bottle

- A. 120 milliliters
- B. 3 milliliters
- C. 5 liter
- D. 2 liter


7)



Water in an ice tray

- A. 2 milliliters
- B. 0.5 liter
- C. 50 milliliters
- D. 2 liter

8)



Measuring Cup

- A. 237 milliliters
- B. 237 liter
- C. 50 milliliters
- D. 1 liter

9)



Shampoo in a bottle

- A. 1 milliliter
- B. 1.5 liter
- C. 20 liter
- D. 20 milliliters

- 1.   **C**
- 2.   **B**
- 3.   **C**
- 4.   **C**
- 5.   **C**
- 6.   **A**
- 7.   **B**
- 8.   **A**
- 9.   **B**



Stelle fest, welcher Buchstabe das Volumen am besten darstellt.

Antworten

**Milliliter**

Un mililitro equivale a unas 20 gotas de agua.


Muchas botellas grandes de refrescos tienen 1 o 2 litros.

1 Liter = 1,000 Milliliters



- 1. \_\_\_\_\_
- 2. \_\_\_\_\_
- 3. \_\_\_\_\_
- 4. \_\_\_\_\_
- 5. \_\_\_\_\_
- 6. \_\_\_\_\_
- 7. \_\_\_\_\_
- 8. \_\_\_\_\_
- 9. \_\_\_\_\_

1)



Gas tank in a car

- A. 15 milliliters
- B. 70 milliliters
- C. 3 liter
- D. 60 liter

2)



Liquid a spoon holds

- A. 500 milliliters
- B. 5 milliliters
- C. 1 liter
- D. 5 liter

3)



Shampoo in a bottle

- A. 1 milliliter
- B. 20 liter
- C. 1.5 liter
- D. 20 milliliters


4)



Gallon of Milk

- A. 750 milliliters
- B. 1 liter
- C. 50 milliliters
- D. 3.75 liter

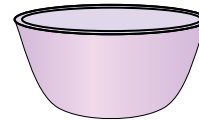
5)



Eyedropper holds

- A. 1000 milliliters
- B. 500 milliliters
- C. 2 milliliters
- D. 2 liter

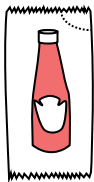
6)



Cereal Bowl

- A. 475 milliliters
- B. 50 milliliters
- C. 1 milliliter
- D. 2 liter

7)



Ketchup in a packet

- A. 50 milliliters
- B. 1 milliliter
- C. 1 liter
- D. 500 milliliters

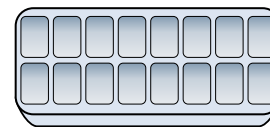
8)



Toothpaste in a tube

- A. 5 milliliters
- B. 1 liter
- C. 120 milliliters
- D. 2 liter

9)



Water in an ice tray

- A. 2 milliliters
- B. 0.5 liter
- C. 2 liter
- D. 50 milliliters



Stelle fest, welcher Buchstabe das Volumen am besten darstellt.

Antworten

**Milliliter**


Un mililitro equivale a unas 20 gotas de agua.

Muchas botellas grandes de refrescos tienen 1 o 2 litros.

1 Liter = 1,000 Milliliters



1)



Gas tank in a car

- A. 15 milliliters
- B. 70 milliliters
- C. 3 liter
- D. 60 liter

2)



Liquid a spoon holds

- A. 500 milliliters
- B. 5 milliliters
- C. 1 liter
- D. 5 liter

3)



Shampoo in a bottle

- A. 1 milliliter
- B. 20 liter
- C. 1.5 liter
- D. 20 milliliters


4)



Gallon of Milk

- A. 750 milliliters
- B. 1 liter
- C. 50 milliliters
- D. 3.75 liter

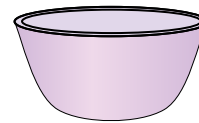
5)



Eyedropper holds

- A. 1000 milliliters
- B. 500 milliliters
- C. 2 milliliters
- D. 2 liter

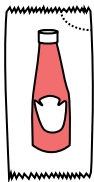
6)



Cereal Bowl

- A. 475 milliliters
- B. 50 milliliters
- C. 1 milliliter
- D. 2 liter

7)



Ketchup in a packet

- A. 50 milliliters
- B. 1 milliliter
- C. 1 liter
- D. 500 milliliters


8)



Toothpaste in a tube

- A. 5 milliliters
- B. 1 liter
- C. 120 milliliters
- D. 2 liter

9)



Water in an ice tray

- A. 2 milliliters
- B. 0.5 liter
- C. 2 liter
- D. 50 milliliters

- 1.   **D**
- 2.   **B**
- 3.   **C**
- 4.   **D**
- 5.   **C**
- 6.   **A**
- 7.   **B**
- 8.   **C**
- 9.   **B**



Stelle fest, welcher Buchstabe das Volumen am besten darstellt.

Antworten

**Milliliter**

Un mililitro equivale a unas 20 gotas de agua.



**Liter**

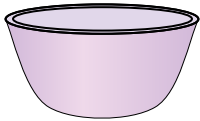
Muchas botellas grandes de refrescos tienen 1 o 2 litros.

1 Liter = 1,000 Milliliters



1. \_\_\_\_\_
2. \_\_\_\_\_
3. \_\_\_\_\_
4. \_\_\_\_\_
5. \_\_\_\_\_
6. \_\_\_\_\_
7. \_\_\_\_\_
8. \_\_\_\_\_
9. \_\_\_\_\_


1)



Cereal Bowl

- A. 50 milliliters
- B. 475 milliliters
- C. 1 milliliter
- D. 2 liter

2)



Eyedropper holds

- A. 500 milliliters
- B. 1000 milliliters
- C. 2 milliliters
- D. 2 liter

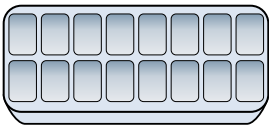
3)



Cafeteria Milk

- A. 1 liter
- B. 237 milliliters
- C. 237 liter
- D. 2 liter

4)



Water in an ice tray

- A. 2 milliliters
- B. 0.5 liter
- C. 50 milliliters
- D. 2 liter


5)



Soda in a can

- A. 350 milliliters
- B. 2 milliliters
- C. 2 liter
- D. 350 liter

6)



Gas tank in a car

- A. 15 milliliters
- B. 60 liter
- C. 70 milliliters
- D. 3 liter

7)



Flour in a pan of brownies

- A. 3 liter
- B. 0.5 liter
- C. 16 liter
- D. 10 milliliters

8)



Water for a house plant

- A. 2 milliliters
- B. 3 liter
- C. 500 milliliters
- D. 80 liter

9)



Shampoo in a bottle

- A. 20 liter
- B. 1.5 liter
- C. 20 milliliters
- D. 1 milliliter



Stelle fest, welcher Buchstabe das Volumen am besten darstellt.

Antworten

**Milliliter**

Un mililitro equivale a unas 20 gotas de agua.



**Liter**

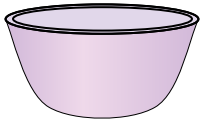
Muchas botellas grandes de refrescos tienen 1 o 2 litros.

1 Liter = 1,000 Milliliters



- 1.     **B**
- 2.     **C**
- 3.     **B**
- 4.     **B**
- 5.     **A**
- 6.     **B**
- 7.     **B**
- 8.     **C**
- 9.     **B**


1)



Cereal Bowl

- A. 50 milliliters
- B. 475 milliliters
- C. 1 milliliter
- D. 2 liter

2)



Eyedropper holds

- A. 500 milliliters
- B. 1000 milliliters
- C. 2 milliliters
- D. 2 liter

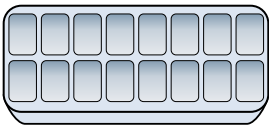
3)



Cafeteria Milk

- A. 1 liter
- B. 237 milliliters
- C. 237 liter
- D. 2 liter


4)



Water in an ice tray

- A. 2 milliliters
- B. 0.5 liter
- C. 50 milliliters
- D. 2 liter


5)



Soda in a can

- A. 350 milliliters
- B. 2 milliliters
- C. 2 liter
- D. 350 liter

6)



Gas tank in a car

- A. 15 milliliters
- B. 60 liter
- C. 70 milliliters
- D. 3 liter

7)



Flour in a pan of brownies

- A. 3 liter
- B. 0.5 liter
- C. 16 liter
- D. 10 milliliters

8)



Water for a house plant

- A. 2 milliliters
- B. 3 liter
- C. 500 milliliters
- D. 80 liter

9)



Shampoo in a bottle

- A. 20 liter
- B. 1.5 liter
- C. 20 milliliters
- D. 1 milliliter



Stelle fest, welcher Buchstabe das Volumen am besten darstellt.

Antworten

**Milliliter**

Un mililitro equivale a unas 20 gotas de agua.



**Liter**


Muchas botellas grandes de refrescos tienen 1 o 2 litros.

1 Liter = 1,000 Milliliters



1. \_\_\_\_\_
2. \_\_\_\_\_
3. \_\_\_\_\_
4. \_\_\_\_\_
5. \_\_\_\_\_
6. \_\_\_\_\_
7. \_\_\_\_\_
8. \_\_\_\_\_
9. \_\_\_\_\_

1)



Liquid in a pitcher

- A. 5 liter
- B. 20 milliliters
- C. 1 liter
- D. 500 milliliters

2)



Flour in a pan of brownies

- A. 3 liter
- B. 0.5 liter
- C. 10 milliliters
- D. 16 liter


3)



Liquid in a tea cup

- A. 2 milliliters
- B. 2 liter
- C. 250 milliliters
- D. 5 liter


4)



Eyedropper holds

- A. 1000 milliliters
- B. 2 liter
- C. 500 milliliters
- D. 2 milliliters

5)



Sand a wheel barrow holds

- A. 50 milliliters
- B. 500 milliliters
- C. 3 liter
- D. 170 liter


6)



Measuring Cup

- A. 1 liter
- B. 237 liter
- C. 50 milliliters
- D. 237 milliliters

7)



Shampoo in a bottle

- A. 1 milliliter
- B. 20 milliliters
- C. 1.5 liter
- D. 20 liter

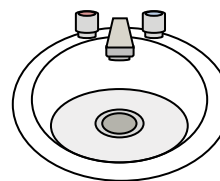
8)



Gas tank in a car

- A. 60 liter
- B. 15 milliliters
- C. 70 milliliters
- D. 3 liter

9)



Water in bathroom sink


- A. 10 milliliters
- B. 2 liter
- C. 500 milliliters
- D. 7.5 liter



Stelle fest, welcher Buchstabe das Volumen am besten darstellt.

**Antworten****Milliliter**

Un mililitro equivale a unas 20 gotas de agua.


**Liter**

Muchas botellas grandes de refrescos tienen 1 o 2 litros.

1 Liter = 1,000 Milliliters



1)



Liquid in a pitcher

- A. 5 liter
- B. 20 milliliters
- C. 1 liter
- D. 500 milliliters

2)



Flour in a pan of brownies

- A. 3 liter
- B. 0.5 liter
- C. 10 milliliters
- D. 16 liter


3)



Liquid in a tea cup

- A. 2 milliliters
- B. 2 liter
- C. 250 milliliters
- D. 5 liter


4)



Eyedropper holds

- A. 1000 milliliters
- B. 2 liter
- C. 500 milliliters
- D. 2 milliliters

5)



Sand a wheel barrow holds

- A. 50 milliliters
- B. 500 milliliters
- C. 3 liter
- D. 170 liter


6)



Measuring Cup

- A. 1 liter
- B. 237 liter
- C. 50 milliliters
- D. 237 milliliters

7)



Shampoo in a bottle

- A. 1 milliliter
- B. 20 milliliters
- C. 1.5 liter
- D. 20 liter

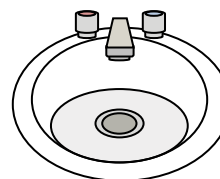
8)



Gas tank in a car

- A. 60 liter
- B. 15 milliliters
- C. 70 milliliters
- D. 3 liter

9)



Water in bathroom sink

- A. 10 milliliters
- B. 2 liter
- C. 500 milliliters
- D. 7.5 liter

1.   **A**
2.   **B**
3.   **C**
4.   **D**
5.   **D**
6.   **D**
7.   **C**
8.   **A**
9.   **D**





Stelle fest, welcher Buchstabe das Volumen am besten darstellt.

Antworten

**Milliliter**

Un mililitro equivale a unas 20 gotas de agua.



**Liter**

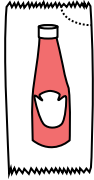
Muchas botellas grandes de refrescos tienen 1 o 2 litros.

1 Liter = 1,000 Milliliters



- 1. \_\_\_\_\_
- 2. \_\_\_\_\_
- 3. \_\_\_\_\_
- 4. \_\_\_\_\_
- 5. \_\_\_\_\_
- 6. \_\_\_\_\_
- 7. \_\_\_\_\_
- 8. \_\_\_\_\_
- 9. \_\_\_\_\_

1)



Ketchup in a packet

- A. 1 milliliter
- B. 50 milliliters
- C. 1 liter
- D. 500 milliliters

2)



Glue in a bottle

- A. 120 milliliters
- B. 3 milliliters
- C. 2 liter
- D. 5 liter

3)



Flour in a pan of brownies

- A. 3 liter
- B. 10 milliliters
- C. 16 liter
- D. 0.5 liter

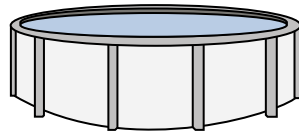
4)



Sand in a pail

- A. 1 milliliter
- B. 20 liter
- C. 4 liter
- D. 4 milliliters


5)



Water in a pool

- A. 12000 milliliters
- B. 800 liter
- C. 12000 liter
- D. 800 milliliters


6)



Liquid in a thermos

- A. 440 milliliters
- B. 20 liter
- C. 3 liter
- D. 20 milliliters


7)



Gas tank in a car

- A. 15 milliliters
- B. 60 liter
- C. 3 liter
- D. 70 milliliters

8)



Sand a wheel barrow holds

- A. 50 milliliters
- B. 170 liter
- C. 500 milliliters
- D. 3 liter

9)



Soda in a can

- A. 350 liter
- B. 2 liter
- C. 2 milliliters
- D. 350 milliliters



Stelle fest, welcher Buchstabe das Volumen am besten darstellt.

Antworten

**Milliliter**

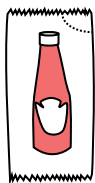
Un mililitro equivale a unas 20 gotas de agua.

Muchas botellas grandes de refrescos tienen 1 o 2 litros.

1 Liter = 1,000 Milliliters



1)



Ketchup in a packet

- A. 1 milliliter
- B. 50 milliliters
- C. 1 liter
- D. 500 milliliters

2)



Glue in a bottle

- A. 120 milliliters
- B. 3 milliliters
- C. 2 liter
- D. 5 liter

3)



Flour in a pan of brownies

- A. 3 liter
- B. 10 milliliters
- C. 16 liter
- D. 0.5 liter

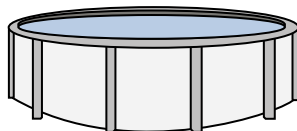
4)



Sand in a pail

- A. 1 milliliter
- B. 20 liter
- C. 4 liter
- D. 4 milliliters

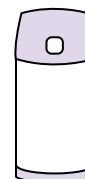
5)



Water in a pool

- A. 12000 milliliters
- B. 800 liter
- C. 12000 liter
- D. 800 milliliters


6)



Liquid in a thermos

- A. 440 milliliters
- B. 20 liter
- C. 3 liter
- D. 20 milliliters


7)



Gas tank in a car

- A. 15 milliliters
- B. 60 liter
- C. 3 liter
- D. 70 milliliters

8)



Sand a wheel barrow holds

- A. 50 milliliters
- B. 170 liter
- C. 500 milliliters
- D. 3 liter

9)



Soda in a can

- A. 350 liter
- B. 2 liter
- C. 2 milliliters
- D. 350 milliliters

- 1.   **A**
- 2.   **A**
- 3.   **D**
- 4.   **C**
- 5.   **C**
- 6.   **A**
- 7.   **B**
- 8.   **B**
- 9.   **D**



Stelle fest, welcher Buchstabe das Volumen am besten darstellt.

Antworten

**Milliliter**

Un mililitro equivale a unas 20 gotas de agua.



**Liter**

Muchas botellas grandes de refrescos tienen 1 o 2 litros.

1 Liter = 1,000 Milliliters



- 1. \_\_\_\_\_
- 2. \_\_\_\_\_
- 3. \_\_\_\_\_
- 4. \_\_\_\_\_
- 5. \_\_\_\_\_
- 6. \_\_\_\_\_
- 7. \_\_\_\_\_
- 8. \_\_\_\_\_
- 9. \_\_\_\_\_

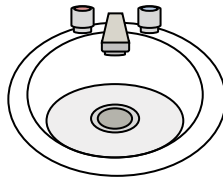
1)



Glue in a bottle

- A. 5 liter
- B. 120 milliliters
- C. 2 liter
- D. 3 milliliters

2)



Water in bathroom sink

- A. 10 milliliters
- B. 7.5 liter
- C. 500 milliliters
- D. 2 liter


3)



Shampoo in a bottle

- A. 20 liter
- B. 1 milliliter
- C. 1.5 liter
- D. 20 milliliters

4)



Ice Chest

- A. 20 milliliters
- B. 100 milliliters
- C. 200 milliliters
- D. 100 liter


5)



Liquid in a tea cup

- A. 250 milliliters
- B. 2 liter
- C. 2 milliliters
- D. 5 liter


6)



Eyedropper holds

- A. 1000 milliliters
- B. 2 milliliters
- C. 500 milliliters
- D. 2 liter

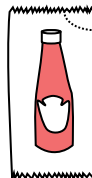
7)



Sand a wheel barrow holds

- A. 50 milliliters
- B. 3 liter
- C. 170 liter
- D. 500 milliliters


8)



Ketchup in a packet

- A. 500 milliliters
- B. 1 milliliter
- C. 1 liter
- D. 50 milliliters

9)



Gas tank in a car

- A. 60 liter
- B. 70 milliliters
- C. 15 milliliters
- D. 3 liter



Stelle fest, welcher Buchstabe das Volumen am besten darstellt.

Antworten

**Milliliter**

Un mililitro equivale a unas 20 gotas de agua.

Muchas botellas grandes de refrescos tienen 1 o 2 litros.

1 Liter = 1,000 Milliliters



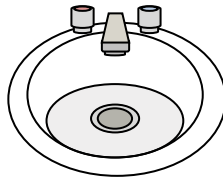
1)



Glue in a bottle

- A. 5 liter
- B. 120 milliliters
- C. 2 liter
- D. 3 milliliters

2)



Water in bathroom sink

- A. 10 milliliters
- B. 7.5 liter
- C. 500 milliliters
- D. 2 liter


3)



Shampoo in a bottle

- A. 20 liter
- B. 1 milliliter
- C. 1.5 liter
- D. 20 milliliters

4)



Ice Chest

- A. 20 milliliters
- B. 100 milliliters
- C. 200 milliliters
- D. 100 liter


5)



Liquid in a tea cup

- A. 250 milliliters
- B. 2 liter
- C. 2 milliliters
- D. 5 liter


6)



Eyedropper holds

- A. 1000 milliliters
- B. 2 milliliters
- C. 500 milliliters
- D. 2 liter

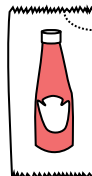
7)



Sand a wheel barrow holds

- A. 50 milliliters
- B. 3 liter
- C. 170 liter
- D. 500 milliliters


8)



Ketchup in a packet

- A. 500 milliliters
- B. 1 milliliter
- C. 1 liter
- D. 50 milliliters

9)



Gas tank in a car

- A. 60 liter
- B. 70 milliliters
- C. 15 milliliters
- D. 3 liter

- 1.   **B**
- 2.   **B**
- 3.   **C**
- 4.   **D**
- 5.   **A**
- 6.   **B**
- 7.   **C**
- 8.   **B**
- 9.   **A**