



Stelle fest, welcher Buchstabe das Volumen am besten darstellt.

Antworten

Milliliter

Un mililitro equivale a unas 20 gotas de agua.



Liter

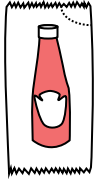
Muchas botellas grandes de refrescos tienen 1 o 2 litros.

1 Liter = 1,000 Milliliters



- 1. _____
- 2. _____
- 3. _____
- 4. _____
- 5. _____
- 6. _____
- 7. _____
- 8. _____
- 9. _____

1)



Ketchup in a packet

- A. 1 milliliter
- B. 50 milliliters
- C. 1 liter
- D. 500 milliliters

2)



Glue in a bottle

- A. 120 milliliters
- B. 3 milliliters
- C. 2 liter
- D. 5 liter

3)



Flour in a pan of brownies

- A. 3 liter
- B. 10 milliliters
- C. 16 liter
- D. 0.5 liter

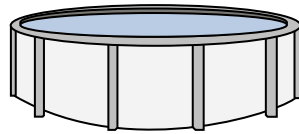
4)



Sand in a pail

- A. 1 milliliter
- B. 20 liter
- C. 4 liter
- D. 4 milliliters


5)



Water in a pool

- A. 12000 milliliters
- B. 800 liter
- C. 12000 liter
- D. 800 milliliters


6)



Liquid in a thermos

- A. 440 milliliters
- B. 20 liter
- C. 3 liter
- D. 20 milliliters


7)



Gas tank in a car

- A. 15 milliliters
- B. 60 liter
- C. 3 liter
- D. 70 milliliters

8)



Sand a wheel barrow holds

- A. 50 milliliters
- B. 170 liter
- C. 500 milliliters
- D. 3 liter

9)



Soda in a can

- A. 350 liter
- B. 2 liter
- C. 2 milliliters
- D. 350 milliliters



Stelle fest, welcher Buchstabe das Volumen am besten darstellt.


Antworten

Milliliter

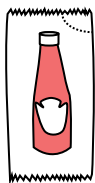
Un mililitro equivale a unas 20 gotas de agua.

Muchas botellas grandes de refrescos tienen 1 o 2 litros.

1 Liter = 1,000 Milliliters



1)



Ketchup in a packet

- A. 1 milliliter
- B. 50 milliliters
- C. 1 liter
- D. 500 milliliters

2)



Glue in a bottle

- A. 120 milliliters
- B. 3 milliliters
- C. 2 liter
- D. 5 liter

3)



Flour in a pan of brownies

- A. 3 liter
- B. 10 milliliters
- C. 16 liter
- D. 0.5 liter

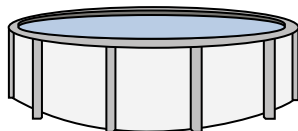
4)



Sand in a pail

- A. 1 milliliter
- B. 20 liter
- C. 4 liter
- D. 4 milliliters

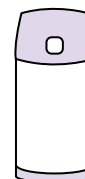
5)



Water in a pool

- A. 12000 milliliters
- B. 800 liter
- C. 12000 liter
- D. 800 milliliters


6)



Liquid in a thermos

- A. 440 milliliters
- B. 20 liter
- C. 3 liter
- D. 20 milliliters


7)



Gas tank in a car

- A. 15 milliliters
- B. 60 liter
- C. 3 liter
- D. 70 milliliters

8)



Sand a wheel barrow holds

- A. 50 milliliters
- B. 170 liter
- C. 500 milliliters
- D. 3 liter

9)



Soda in a can

- A. 350 liter
- B. 2 liter
- C. 2 milliliters
- D. 350 milliliters

- 1. **A**
- 2. **A**
- 3. **D**
- 4. **C**
- 5. **C**
- 6. **A**
- 7. **B**
- 8. **B**
- 9. **D**