



Stelle fest, welcher Buchstabe das Volumen am besten darstellt.

Antworten

Milliliter

Un mililitro equivale a unas 20 gotas de agua.



Liter

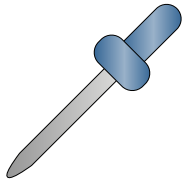
Muchas botellas grandes de refrescos tienen 1 o 2 litros.

1 Liter = 1,000 Milliliters




1. _____
2. _____
3. _____
4. _____
5. _____
6. _____
7. _____
8. _____
9. _____

1)



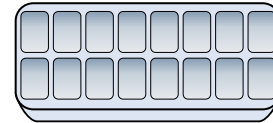
- Eyedropper holds
- A. 500 milliliters
 - B. 1000 milliliters
 - C. 2 liter
 - D. 2 milliliters

2)



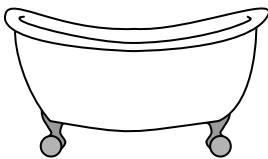
- Soda in a can
- A. 2 liter
 - B. 2 milliliters
 - C. 350 liter
 - D. 350 milliliters

3)



- Water in an ice tray
- A. 2 milliliters
 - B. 50 milliliters
 - C. 2 liter
 - D. 0.5 liter

4)




- Bathtub
- A. 3 liter
 - B. 500 milliliters
 - C. 170 liter
 - D. 5 milliliters

5)



- Ink in a pen
- A. 0.25 milliliters
 - B. 2 milliliters
 - C. 400 milliliters
 - D. 1 liter

6)



- Water a barrel holds
- A. 200 milliliters
 - B. 200 liter
 - C. 5 milliliters
 - D. 3 liter

7)



- Measuring Cup
- A. 50 milliliters
 - B. 237 milliliters
 - C. 1 liter
 - D. 237 liter

8)



- Shampoo in a bottle
- A. 1.5 liter
 - B. 1 milliliter
 - C. 20 liter
 - D. 20 milliliters

9)



- Toothpaste in a tube
- A. 1 liter
 - B. 2 liter
 - C. 5 milliliters
 - D. 120 milliliters



Stelle fest, welcher Buchstabe das Volumen am besten darstellt.

Antworten

Milliliter


Un mililitro equivale a unas 20 gotas de agua.

Muchas botellas grandes de refrescos tienen 1 o 2 litros.

1 Liter = 1,000 Milliliters



1)



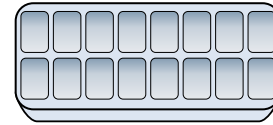
- Eyedropper holds
- A. 500 milliliters
 - B. 1000 milliliters
 - C. 2 liter
 - D. 2 milliliters

2)




- Soda in a can
- A. 2 liter
 - B. 2 milliliters
 - C. 350 liter
 - D. 350 milliliters

3)



- Water in an ice tray
- A. 2 milliliters
 - B. 50 milliliters
 - C. 2 liter
 - D. 0.5 liter

4)




- Bathtub
- A. 3 liter
 - B. 500 milliliters
 - C. 170 liter
 - D. 5 milliliters

5)




- Ink in a pen
- A. 0.25 milliliters
 - B. 2 milliliters
 - C. 400 milliliters
 - D. 1 liter

6)



- Water a barrel holds
- A. 200 milliliters
 - B. 200 liter
 - C. 5 milliliters
 - D. 3 liter

7)



- Measuring Cup
- A. 50 milliliters
 - B. 237 milliliters
 - C. 1 liter
 - D. 237 liter

8)



- Shampoo in a bottle
- A. 1.5 liter
 - B. 1 milliliter
 - C. 20 liter
 - D. 20 milliliters

9)



- Toothpaste in a tube
- A. 1 liter
 - B. 2 liter
 - C. 5 milliliters
 - D. 120 milliliters

- 1. **D**
- 2. **D**
- 3. **D**
- 4. **C**
- 5. **A**
- 6. **B**
- 7. **B**
- 8. **A**
- 9. **D**