



Stelle fest, welcher Buchstabe das Volumen am besten darstellt.

Antworten

Xícara

Una taza se refiere a la cantidad de leche que se obtiene de la cafetería.



Pinta

Uma pinta é aproximadamente a quantidade que você recebe em um copo grande.
1 pinta = 2 xícaras



Quarto

Um quarto é mais ou menos a quantidade que você consegue em um recipiente grande de leite.
1 cuarto = 2 pintas



Galón

Un galón es la cantidad que viene en un recipiente de plástico grande.
1 galón = 4 cuartos



1. _____
2. _____
3. _____
4. _____
5. _____
6. _____
7. _____
8. _____
9. _____


1)



Glue in a bottle

- A. 1 pint
- B. 3 gallonen
- C. 2 quarts
- D. 0.5 Tassen


2)



Sand a wheel barrow holds

- A. 8 quarts
- B. 45 gallonen
- C. 4 Tassen
- D. 1000 g

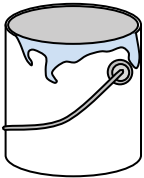
3)



Ice Chest

- A. 16 Tassen
- B. 2 quarts
- C. 100 quarts
- D. 5 gallonen


4)



Paint in a can

- A. 3 fluid ounces
- B. 1 Tasse
- C. 0.5 pints
- D. 1 gallon

5)



Eyedropper holds

- A. 3 gallonen
- B. 1 pint
- C. weniger als 1 Tasse
- D. 1 Tasse

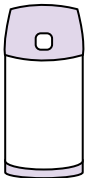
6)



Toothpaste in a tube

- A. 0.5 Tassen
- B. 5 g
- C. 5 quarts
- D. 0.5 gallonen

7)



Liquid in a thermos

- A. 1 gallon
- B. 1 Tasse
- C. 4 quarts
- D. 2 amerikanische Pfund

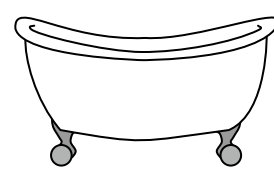
8)



Sand in a pail

- A. 32 gallonen
- B. 1 Tasse
- C. 1 gallon
- D. 7 fluid ounces

9)



Bathtub

- A. 20 pints
- B. 45 gallonen
- C. 40 Tassen
- D. 8 quarts



Stelle fest, welcher Buchstabe das Volumen am besten darstellt.

Antworten

Xícara

Una taza se refiere a la cantidad de leche que se obtiene de la cafetería.



Pinta

Uma pinta é aproximadamente a quantidade que você recebe em um copo grande.
1 pinta = 2 xícaras



Quarto

Um quarto é mais ou menos a quantidade que você consegue em um recipiente grande de leite.
1 cuarto = 2 pintas



Galón

Un galón es la cantidad que viene en un recipiente de plástico grande.
1 galón = 4 cuartos



1. **D**
2. **B**
3. **C**
4. **D**
5. **C**
6. **A**
7. **B**
8. **C**
9. **B**


1)



Glue in a bottle

- A. 1 pint
- B. 3 gallonen
- C. 2 quarts
- D. 0.5 Tassen


2)



Sand a wheel barrow holds

- A. 8 quarts
- B. 45 gallonen
- C. 4 Tassen
- D. 1000 g


3)



Ice Chest

- A. 16 Tassen
- B. 2 quarts
- C. 100 quarts
- D. 5 gallonen


4)



Paint in a can

- A. 3 fluid ounces
- B. 1 Tasse
- C. 0.5 pints
- D. 1 gallon

5)



Eyedropper holds

- A. 3 gallonen
- B. 1 pint
- C. weniger als 1 Tasse
- D. 1 Tasse

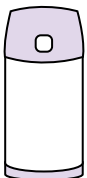
6)



Toothpaste in a tube

- A. 0.5 Tassen
- B. 5 g
- C. 5 quarts
- D. 0.5 gallonen

7)



Liquid in a thermos

- A. 1 gallon
- B. 1 Tasse
- C. 4 quarts
- D. 2 amerikanische Pfund


8)



Sand in a pail

- A. 32 gallonen
- B. 1 Tasse
- C. 1 gallon
- D. 7 fluid ounces

9)



Bathtub

- A. 20 pints
- B. 45 gallonen
- C. 40 Tassen
- D. 8 quarts