



Entscheide, welches Diagramm zu welcher Tabelle gehört.

Antworten

1)

Personen	
6.000	
9.000	
1.000	
2.000	
5.000	

2)

Personen	
6.000	
9.000	
5.000	
2.000	
1.000	

3)

Personen	
1.000	
5.000	
9.000	
2.000	
6.000	

4)

Personen	
6.000	
1.000	
5.000	
2.000	
9.000	

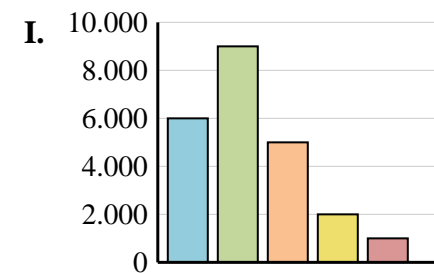
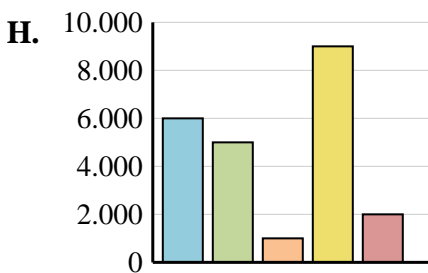
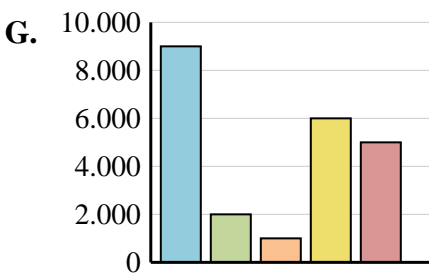
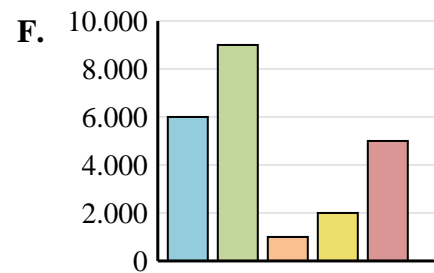
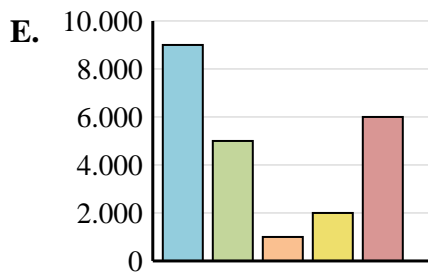
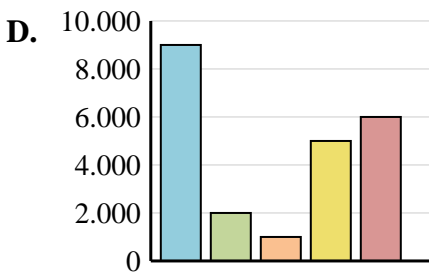
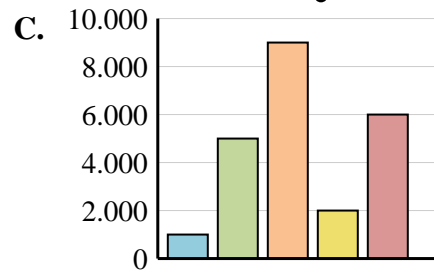
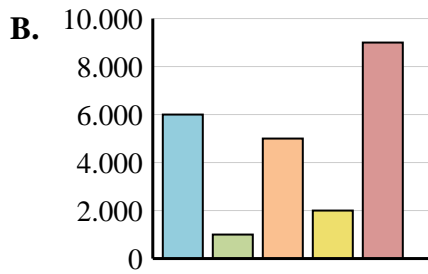
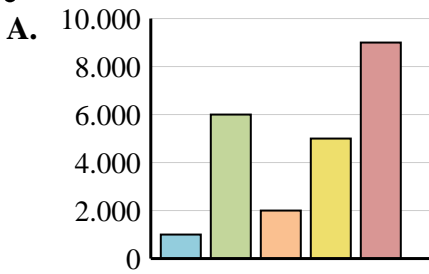
5)

Personen	
9.000	
2.000	
1.000	
6.000	
5.000	

6)

Personen	
1.000	
6.000	
2.000	
5.000	
9.000	

- 1. _____
- 2. _____
- 3. _____
- 4. _____
- 5. _____
- 6. _____





Entscheide, welches Diagramm zu welcher Tabelle gehört.

Antworten

1)

Personen	
	6.000
	9.000
	1.000
	2.000
	5.000

2)

Personen	
	6.000
	9.000
	5.000
	2.000
	1.000

3)

Personen	
	1.000
	5.000
	9.000
	2.000
	6.000

4)

Personen	
	6.000
	1.000
	5.000
	2.000
	9.000

5)

Personen	
	9.000
	2.000
	1.000
	6.000
	5.000

6)

Personen	
	1.000
	6.000
	2.000
	5.000
	9.000

- 1. **F**
- 2. **I**
- 3. **C**
- 4. **B**
- 5. **G**
- 6. **A**

