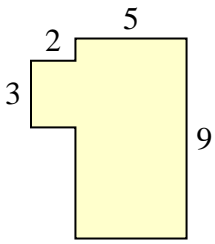




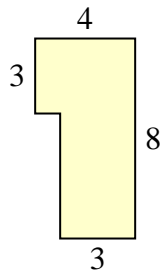
Bestimme die Gesamtfläche von jeder Form. Maßeinheit ist in mm. Abbildung ist nicht maßstäblich.

Antworten

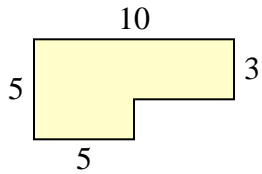
1)



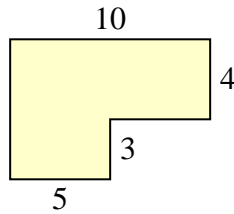
2)



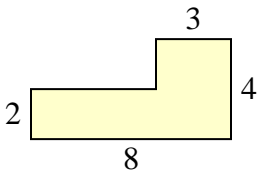
3)



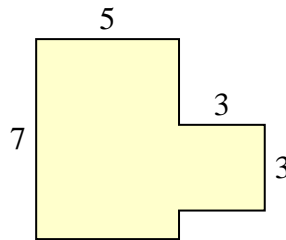
4)



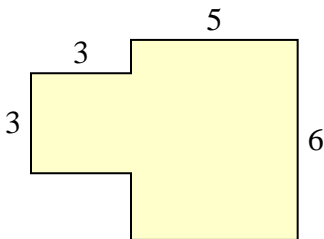
5)



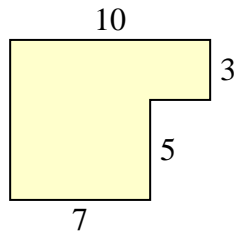
6)



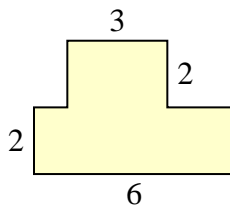
7)



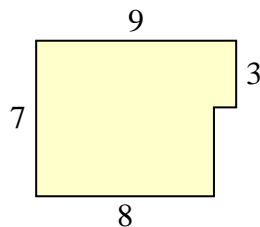
8)



9)



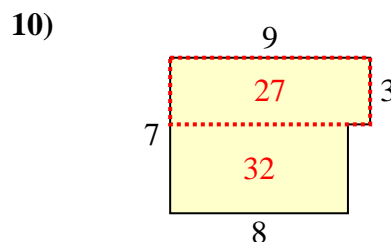
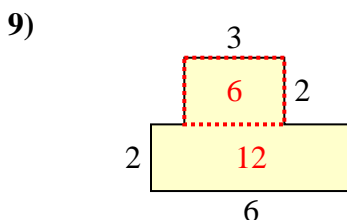
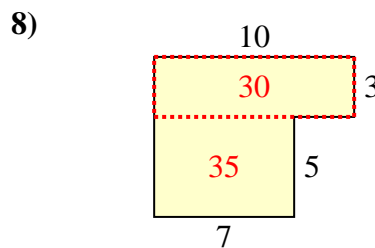
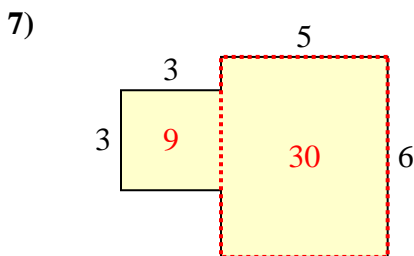
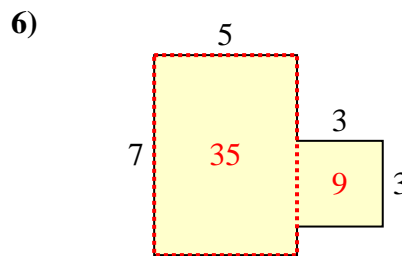
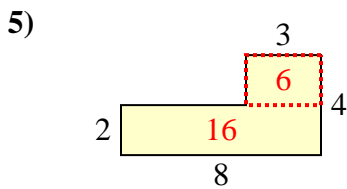
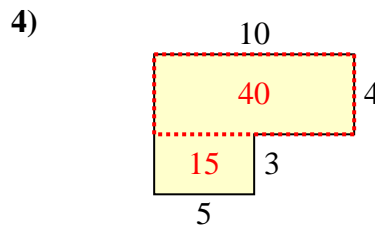
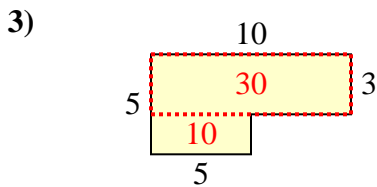
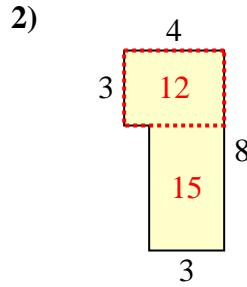
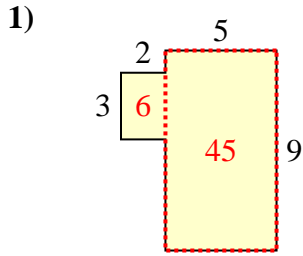
10)



- 1. _____
- 2. _____
- 3. _____
- 4. _____
- 5. _____
- 6. _____
- 7. _____
- 8. _____
- 9. _____
- 10. _____



Bestimme die Gesamtfläche von jeder Form. Maßeinheit ist in mm. Abbildung ist nicht maßstäblich.

**Antworten**

1. 51 mm²
2. 27 mm²
3. 40 mm²
4. 55 mm²
5. 22 mm²
6. 44 mm²
7. 39 mm²
8. 65 mm²
9. 18 mm²
10. 59 mm²