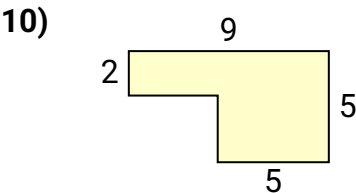
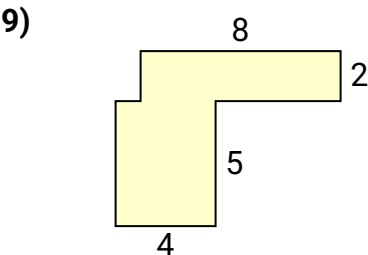
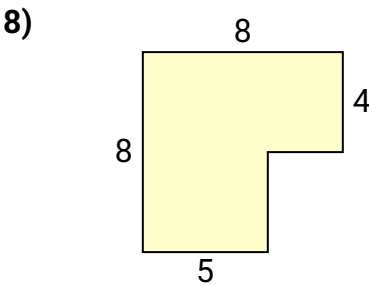
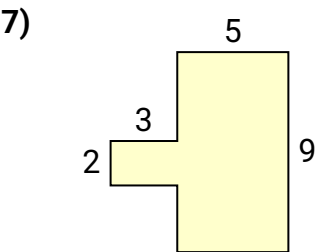
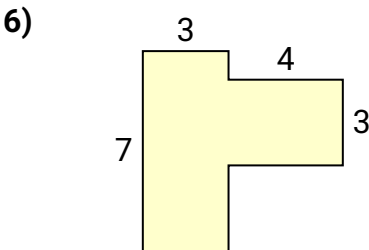
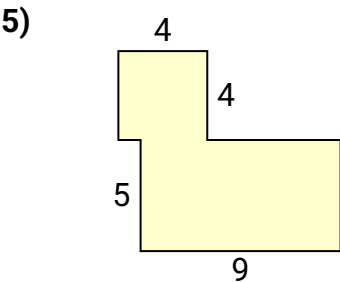
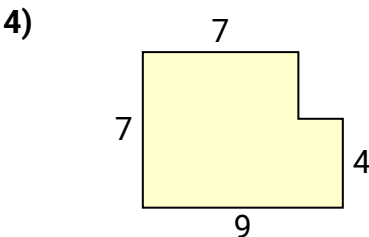
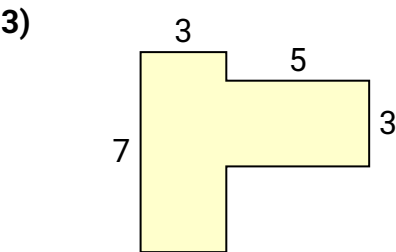
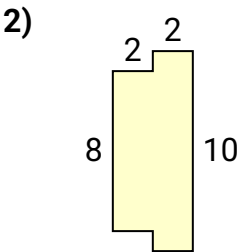
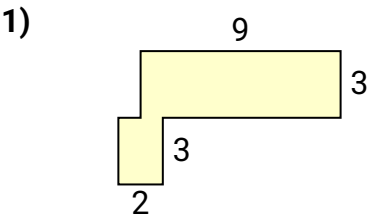




Bestimme die Gesamtfläche von jeder Form. Maßeinheit ist in mm. Abbildung ist nicht maßstäblich.

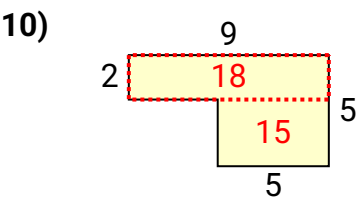
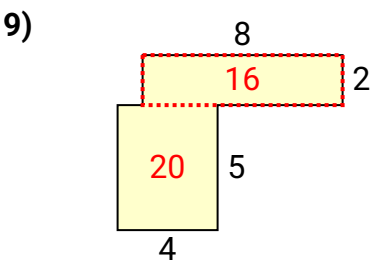
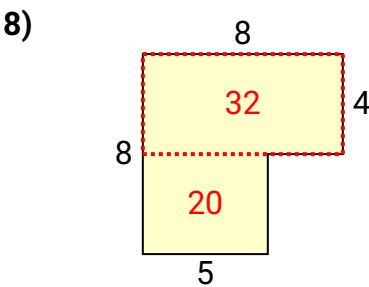
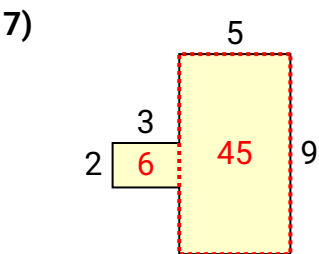
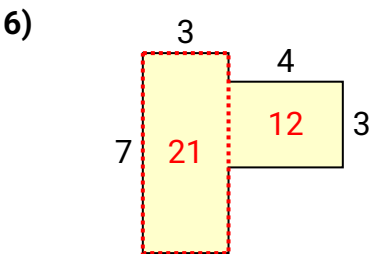
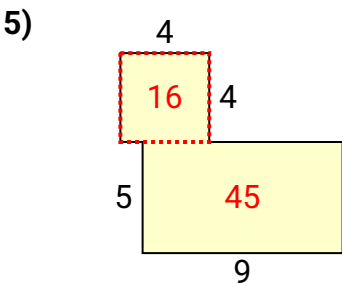
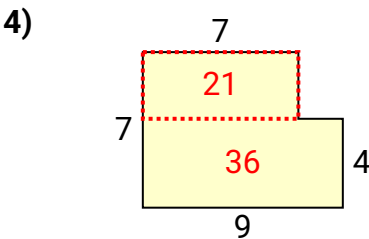
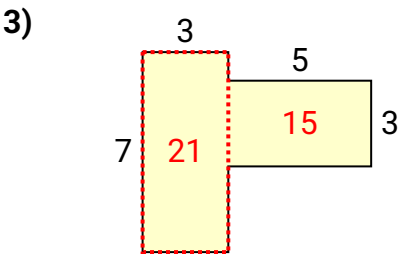
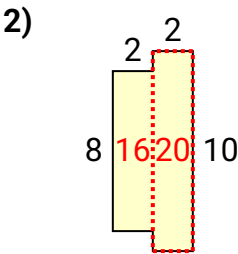
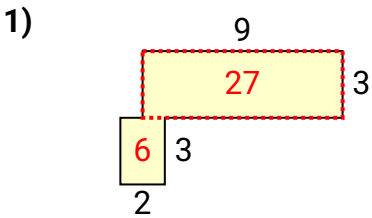
Antworten



- 1. _____
- 2. _____
- 3. _____
- 4. _____
- 5. _____
- 6. _____
- 7. _____
- 8. _____
- 9. _____
- 10. _____



Bestimme die Gesamtfläche von jeder Form. Maßeinheit ist in mm. Abbildung ist nicht maßstäblich.



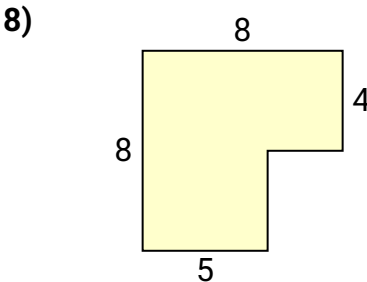
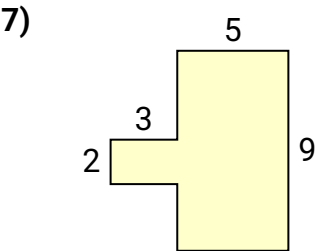
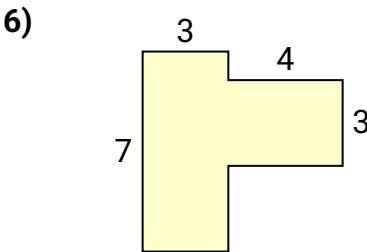
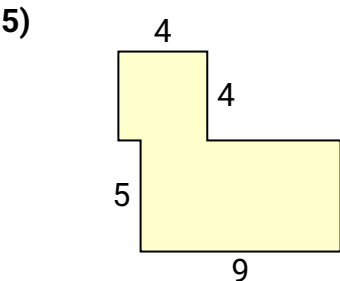
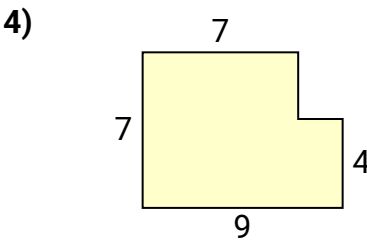
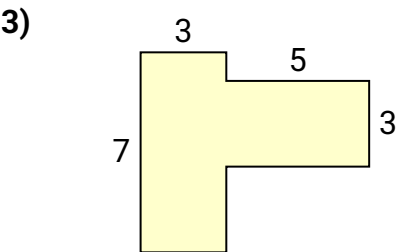
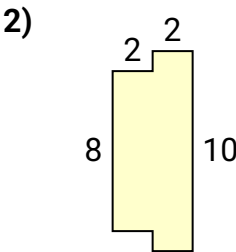
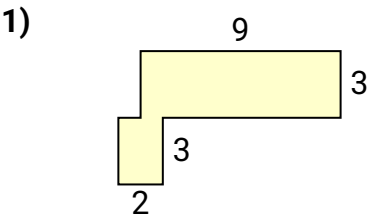
Antworten

1. **33 mm²**
2. **36 mm²**
3. **36 mm²**
4. **57 mm²**
5. **61 mm²**
6. **33 mm²**
7. **51 mm²**
8. **52 mm²**
9. **36 mm²**
10. **33 mm²**



Bestimme die Gesamtfläche von jeder Form. Maßeinheit ist in mm. Abbildung ist nicht maßstäblich.

Antworten



- 1. _____
- 2. _____
- 3. _____
- 4. _____
- 5. _____
- 6. _____
- 7. _____
- 8. _____
- 9. _____
- 10. _____