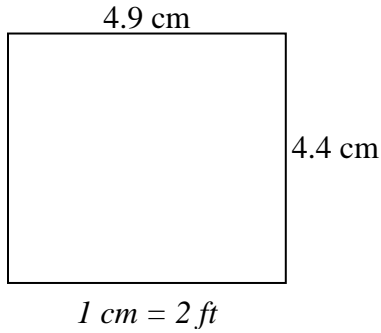


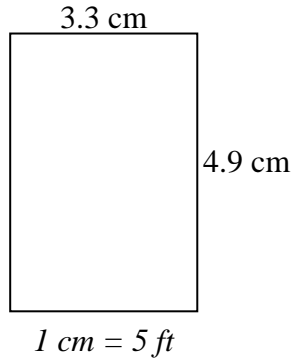


Bestimmen Sie die tatsächliche Breite, Höhe und Fläche jedes Maßstabsrechtecks.
Runden Sie den Bereich auf die nächste ganze Zahl.

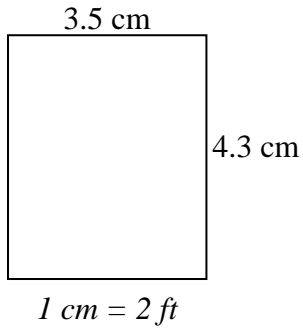
1)



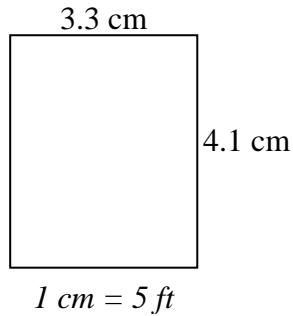
2)



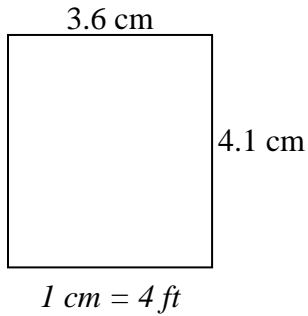
3)



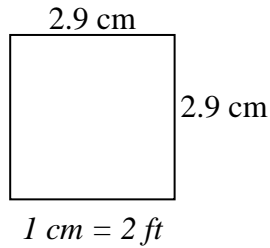
4)



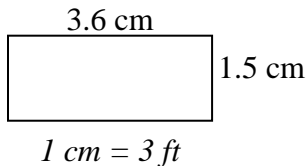
5)



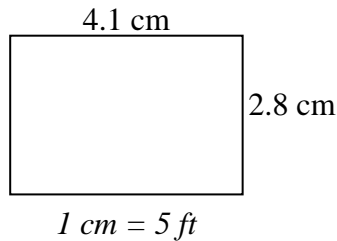
6)



7)



8)



Antworten

1. _____

2. _____

3. _____

4. _____

5. _____

6. _____

7. _____

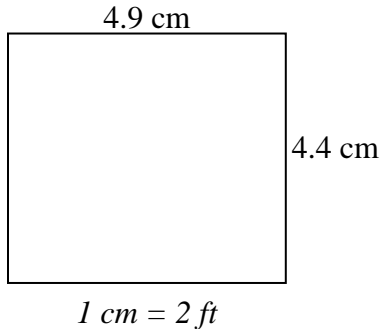
8. _____



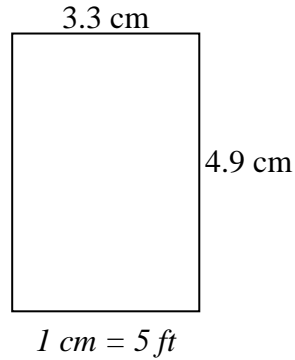
Bestimmen Sie die tatsächliche Breite, Höhe und Fläche jedes Maßstabsrechtecks.

Runden Sie den Bereich auf die nächste ganze Zahl.

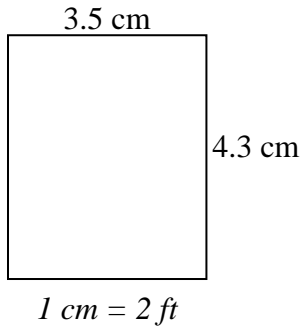
1)



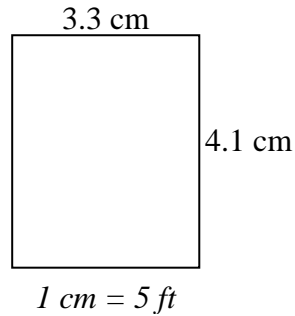
2)



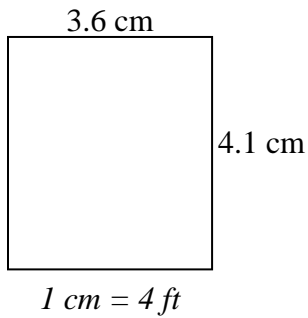
3)



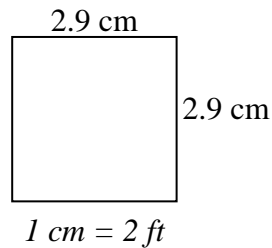
4)



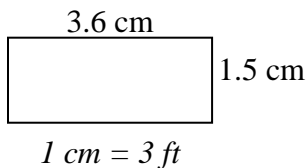
5)



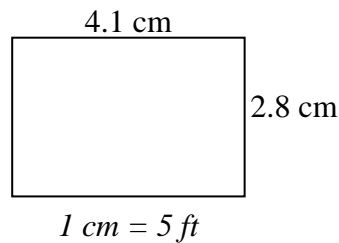
6)



7)



8)

**Antworten**

1.	<u>9.8</u>	<u>8.8</u>	<u>86</u>
2.	<u>16.5</u>	<u>24.5</u>	<u>404</u>
3.	<u>7</u>	<u>8.6</u>	<u>60</u>
4.	<u>16.5</u>	<u>20.5</u>	<u>338</u>
5.	<u>14.4</u>	<u>16.4</u>	<u>236</u>
6.	<u>5.8</u>	<u>5.8</u>	<u>34</u>
7.	<u>10.8</u>	<u>4.5</u>	<u>49</u>
8.	<u>20.5</u>	<u>14</u>	<u>287</u>