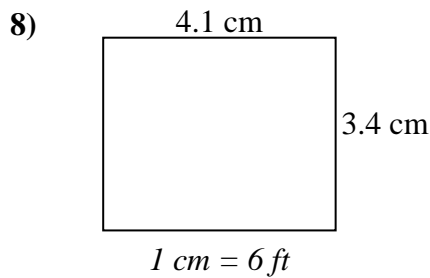
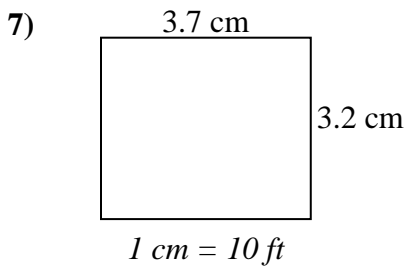
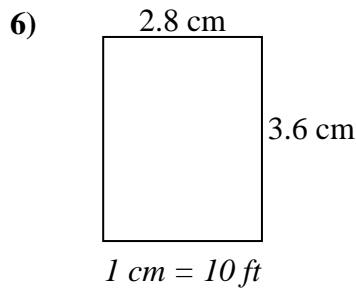
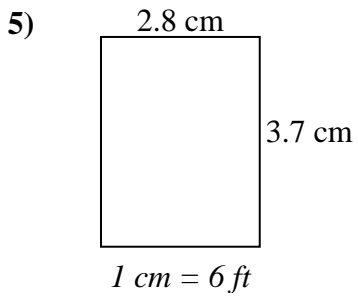
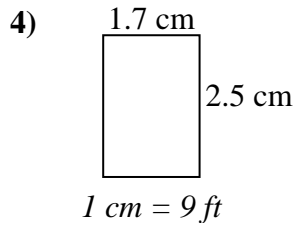
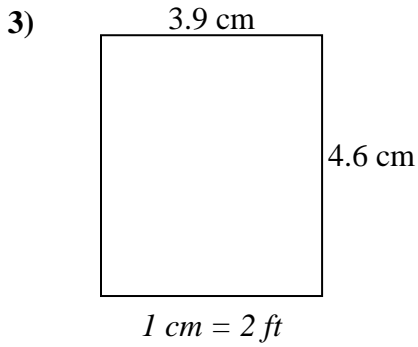
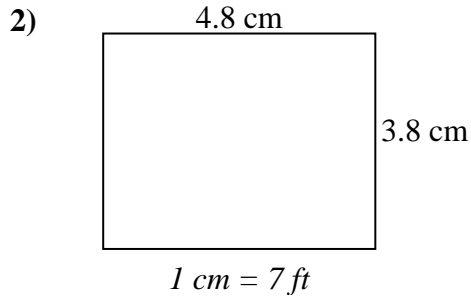
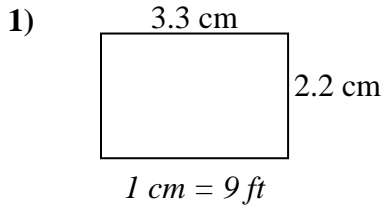




Bestimmen Sie die tatsächliche Breite, Höhe und Fläche jedes Maßstabsrechtecks.
Runden Sie den Bereich auf die nächste ganze Zahl.



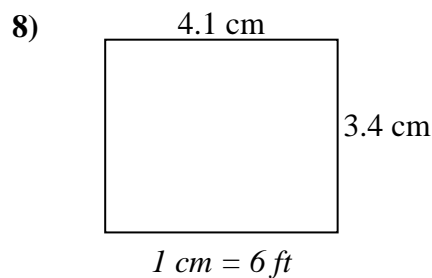
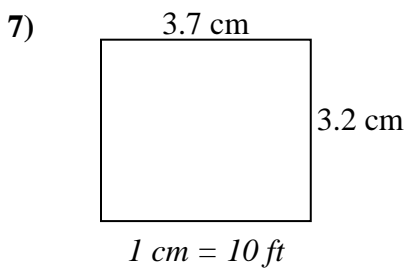
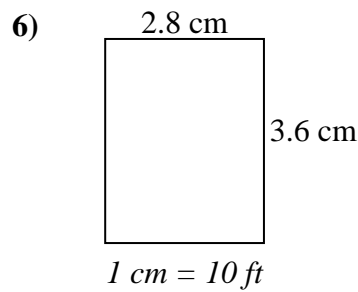
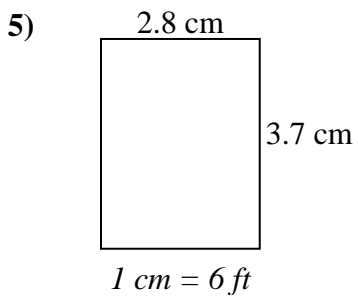
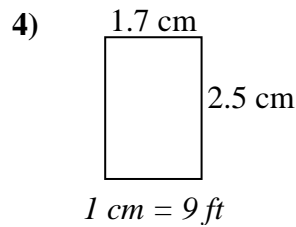
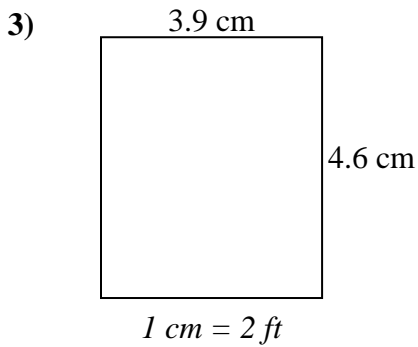
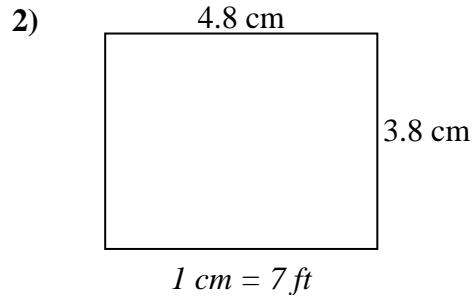
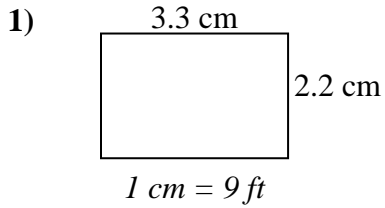
Antworten

1. _____
2. _____
3. _____
4. _____
5. _____
6. _____
7. _____
8. _____



Bestimmen Sie die tatsächliche Breite, Höhe und Fläche jedes Maßstabsrechtecks.

Runden Sie den Bereich auf die nächste ganze Zahl.

**Antworten**

1. 29.7 19.8 588

2. 33.6 26.6 894

3. 7.8 9.2 72

4. 15.3 22.5 344

5. 16.8 22.2 373

6. 28 36 1.008

7. 37 32 1.184

8. 24.6 20.4 502