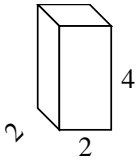


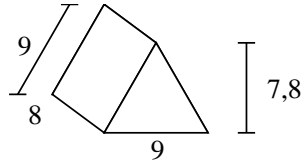


Berechne die Oberfläche jeder Figur.

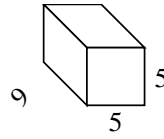
Bsp)



1)



2)



Antworten

Bsp. **40 cm²**

1. _____

2. _____

3. _____

4. _____

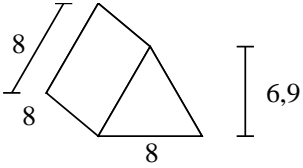
5. _____

6. _____

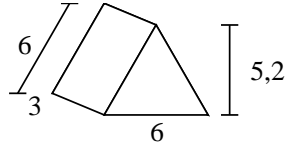
7. _____

8. _____

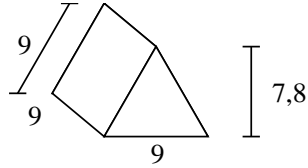
3)



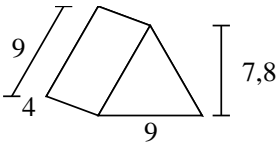
4)



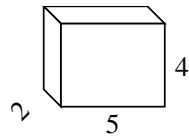
5)



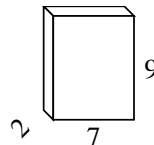
6)



7)



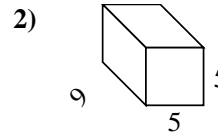
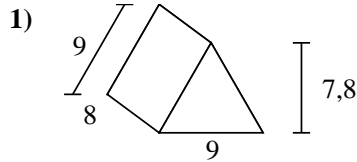
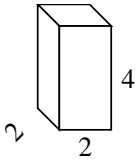
8)





Berechne die Oberfläche jeder Figur.

Bsp)



Antworten

Bsp. 40 cm²

1. 286,2 cm²

2. 230 cm²

3. 247,2 cm²

4. 85,2 cm²

5. 313,2 cm²

6. 178,2 cm²

7. 76 cm²

8. 190 cm²

