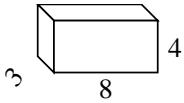


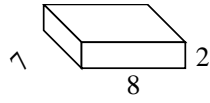


Berechne die Oberfläche jeder Figur.

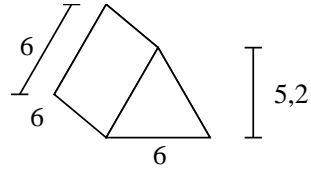
Bsp)



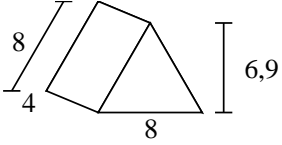
1)



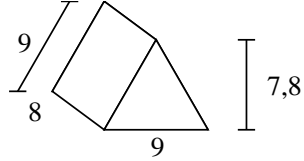
2)



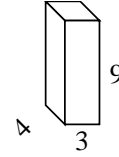
3)



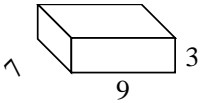
4)



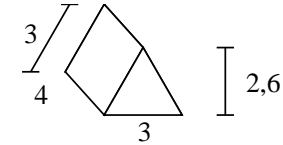
5)



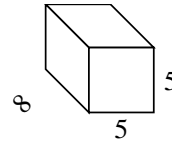
6)



7)



8)

**Antworten**Bsp. **136 cm²**

1. _____

2. _____

3. _____

4. _____

5. _____

6. _____

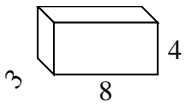
7. _____

8. _____

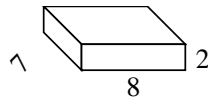


Berechne die Oberfläche jeder Figur.

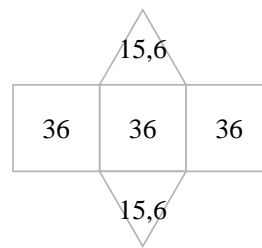
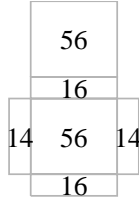
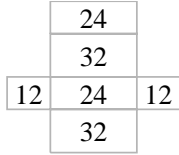
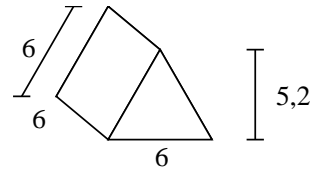
Bsp)



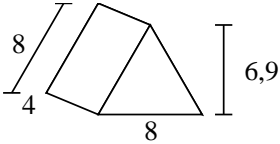
1)



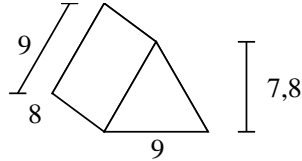
2)



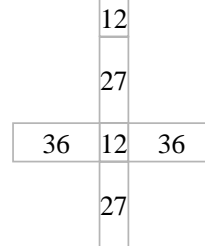
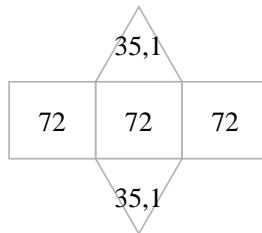
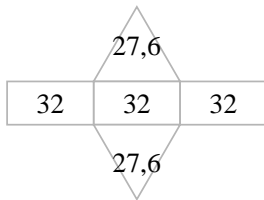
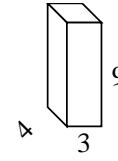
3)



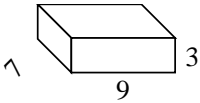
4)



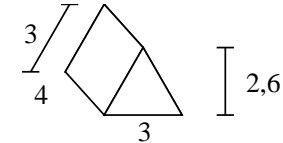
5)



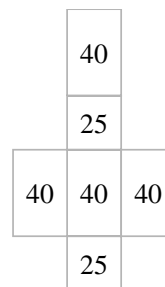
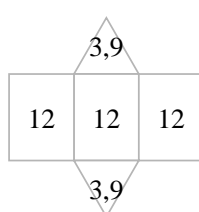
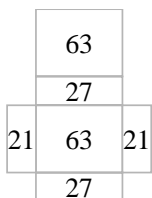
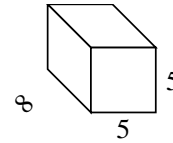
6)



7)



8)

**Antworten**Bsp. **136 cm²**1. **172 cm²**2. **139,2 cm²**3. **151,2 cm²**4. **286,2 cm²**5. **150 cm²**6. **222 cm²**7. **43,8 cm²**8. **210 cm²**