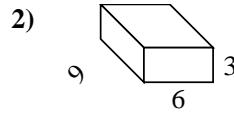
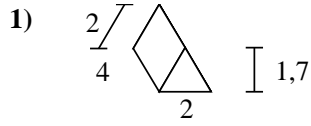
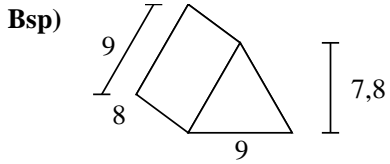




Berechne die Oberfläche jeder Figur.

Antworten



Bsp. **286,2 cm²**

1. _____

2. _____

3. _____

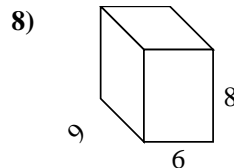
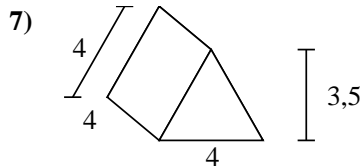
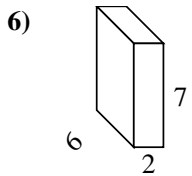
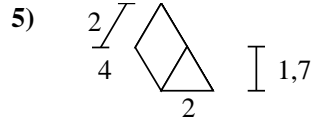
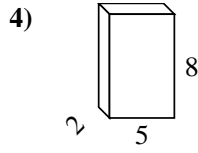
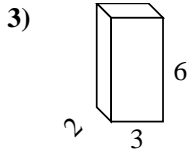
4. _____

5. _____

6. _____

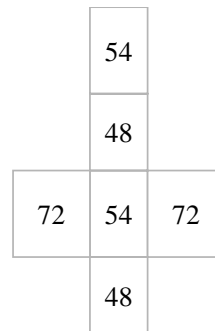
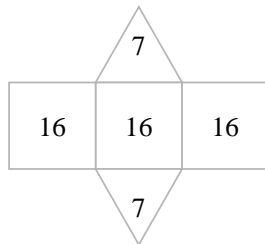
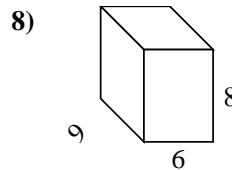
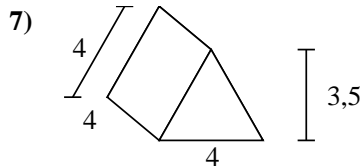
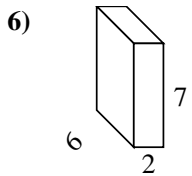
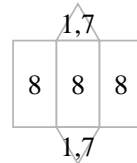
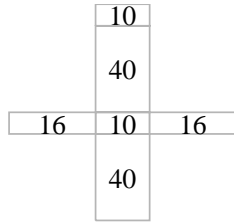
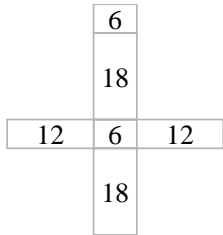
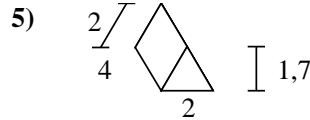
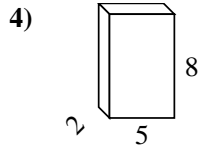
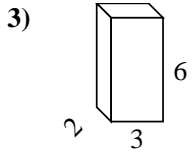
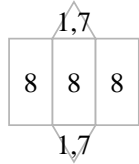
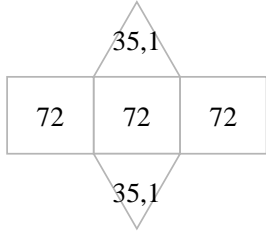
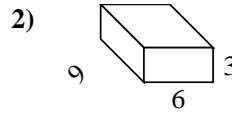
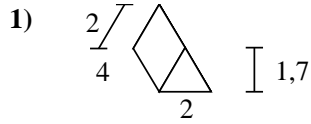
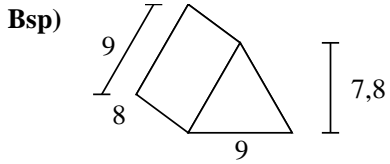
7. _____

8. _____





Berechne die Oberfläche jeder Figur.



Antworten

Bsp. **286,2 cm²**

1. **27,4 cm²**

2. **198 cm²**

3. **72 cm²**

4. **132 cm²**

5. **27,4 cm²**

6. **136 cm²**

7. **62 cm²**

8. **348 cm²**