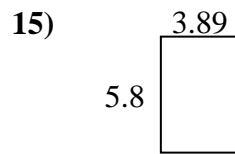
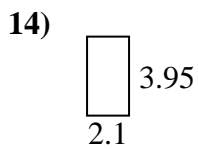
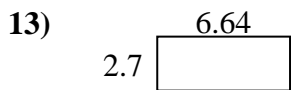
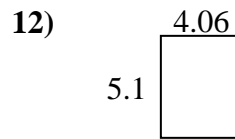
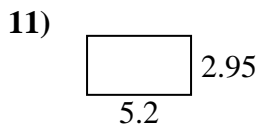
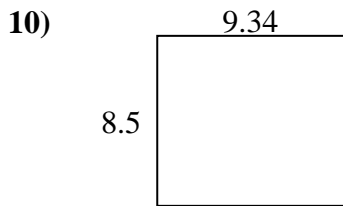
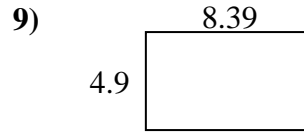
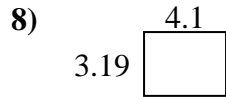
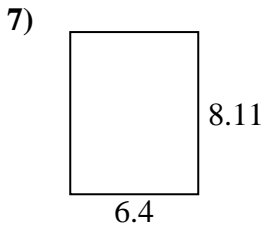
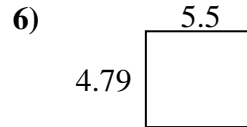
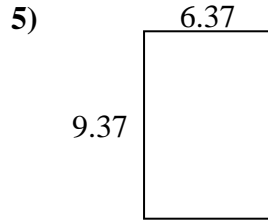
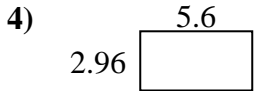
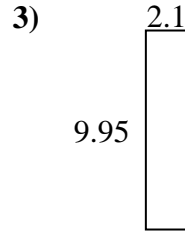
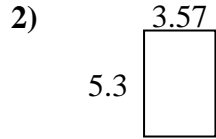
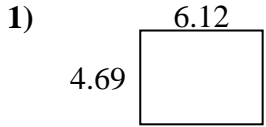




Finden Sie den Umfang und die Fläche jeder Figur. Antworten Sie auf das nächste Zehntel.

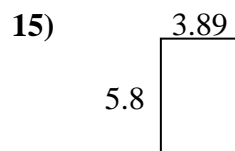
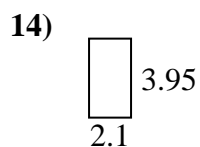
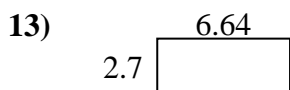
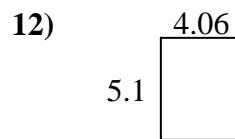
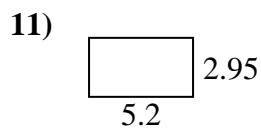
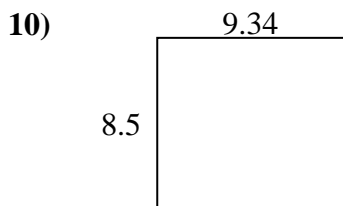
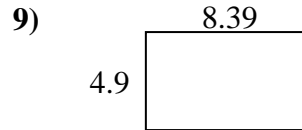
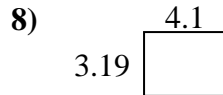
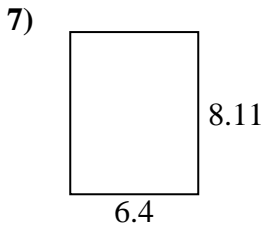
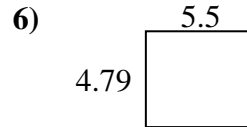
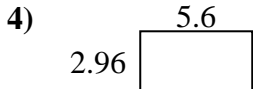
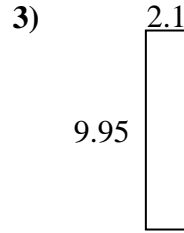
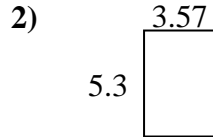
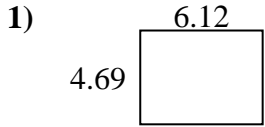


Antworten

1. _____
2. _____
3. _____
4. _____
5. _____
6. _____
7. _____
8. _____
9. _____
10. _____
11. _____
12. _____
13. _____
14. _____
15. _____



Finden Sie den Umfang und die Fläche jeder Figur. Antworten Sie auf das nächste Zehntel.

**Antworten**1. 28,7 21,62. 18,9 17,73. 20,9 24,14. 16,6 17,15. 59,7 31,56. 26,3 20,67. 51,9 29,08. 13,1 14,69. 41,1 26,610. 79,4 35,711. 15,3 16,312. 20,7 18,313. 17,9 18,714. 8,3 12,115. 22,6 19,4