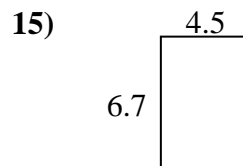
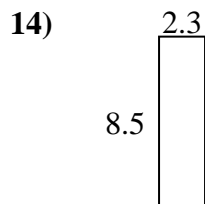
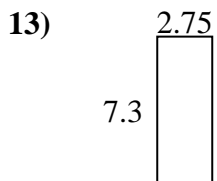
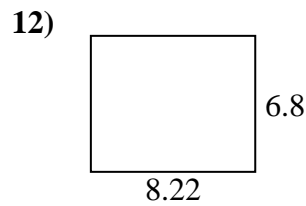
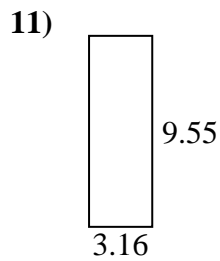
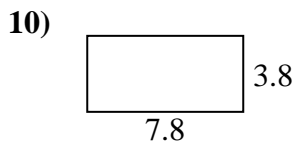
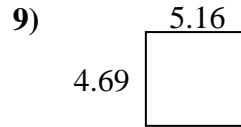
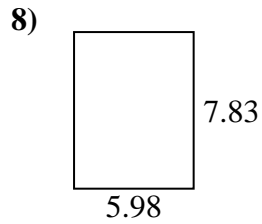
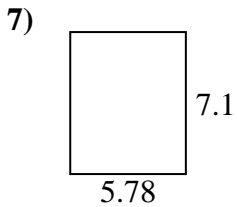
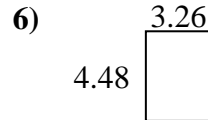
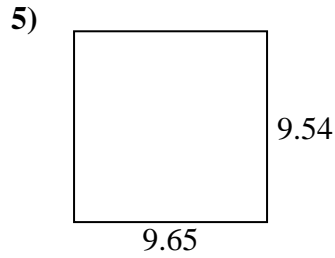
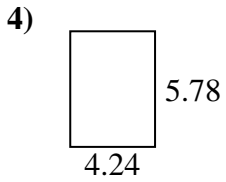
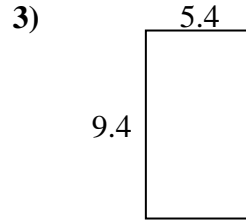
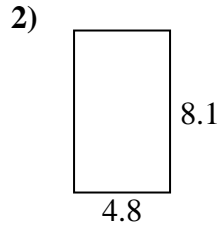
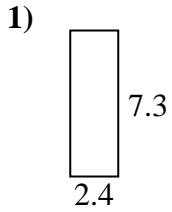




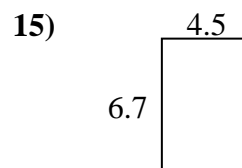
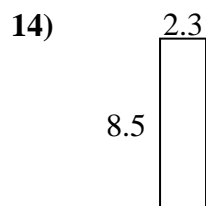
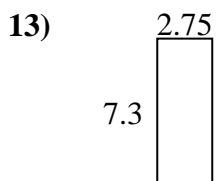
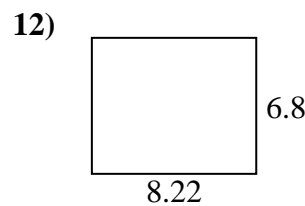
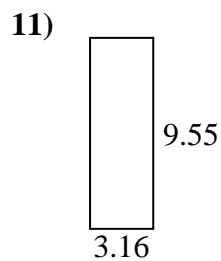
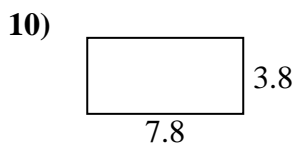
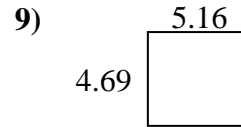
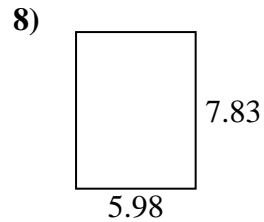
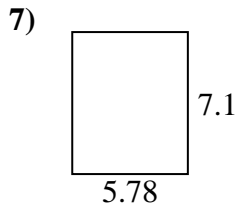
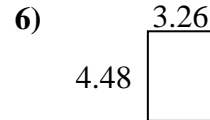
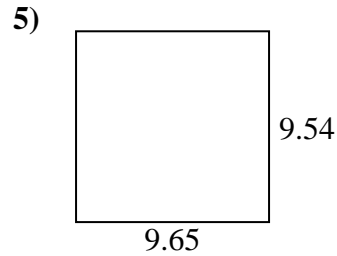
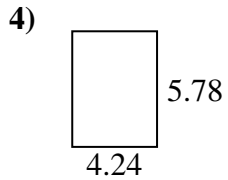
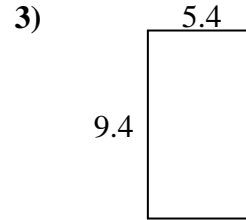
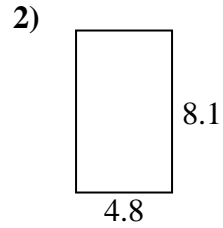
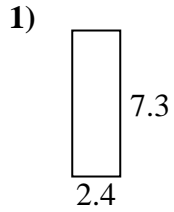
Finden Sie den Umfang und die Fläche jeder Figur. Antworten Sie auf das nächste Zehntel.

**Antworten**

1. _____
2. _____
3. _____
4. _____
5. _____
6. _____
7. _____
8. _____
9. _____
10. _____
11. _____
12. _____
13. _____
14. _____
15. _____



Finden Sie den Umfang und die Fläche jeder Figur. Antworten Sie auf das nächste Zehntel.

Antworten

| | | |
|-----|-------------|-------------|
| 1. | <u>17,5</u> | <u>19,4</u> |
| 2. | <u>38,9</u> | <u>25,8</u> |
| 3. | <u>50,8</u> | <u>29,6</u> |
| 4. | <u>24,5</u> | <u>20,0</u> |
| 5. | <u>92,1</u> | <u>38,4</u> |
| 6. | <u>14,6</u> | <u>15,5</u> |
| 7. | <u>41,0</u> | <u>25,8</u> |
| 8. | <u>46,8</u> | <u>27,6</u> |
| 9. | <u>24,2</u> | <u>19,7</u> |
| 10. | <u>29,6</u> | <u>23,2</u> |
| 11. | <u>30,2</u> | <u>25,4</u> |
| 12. | <u>55,9</u> | <u>30,0</u> |
| 13. | <u>20,1</u> | <u>20,1</u> |
| 14. | <u>19,6</u> | <u>21,6</u> |
| 15. | <u>30,2</u> | <u>22,4</u> |