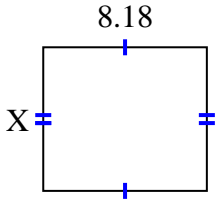




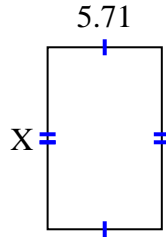
Finden Sie den Wert von X für jede Figur. Jede Zahl ist in Zentimetern (cm) angegeben. Nicht maßstabsgetreu.

Antworten

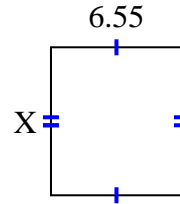
1) area = $58,7324 \text{ cm}^2$



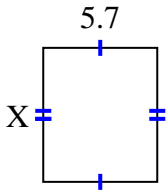
2) area = $51,961 \text{ cm}^2$



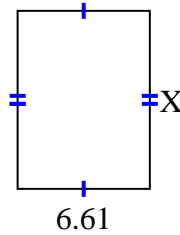
3) area = $48,47 \text{ cm}^2$



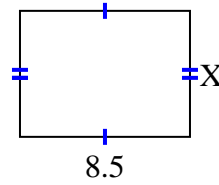
4) area = $38,19 \text{ cm}^2$



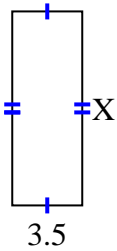
5) area = $58,829 \text{ cm}^2$



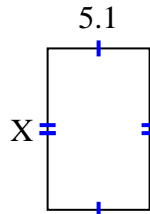
6) area = $53,55 \text{ cm}^2$



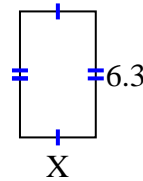
7) area = $33,95 \text{ cm}^2$



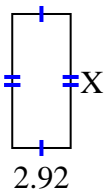
8) area = $41,157 \text{ cm}^2$



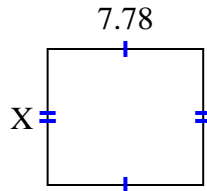
9) area = $23,877 \text{ cm}^2$



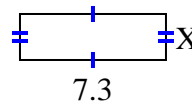
10) area = $19,564 \text{ cm}^2$



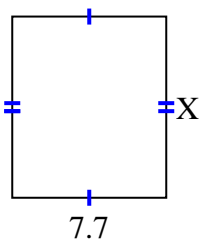
11) area = $52,904 \text{ cm}^2$



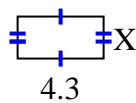
12) area = $16,79 \text{ cm}^2$



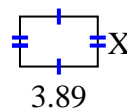
13) area = $69,762 \text{ cm}^2$



14) area = $9,03 \text{ cm}^2$



15) area = $9,725 \text{ cm}^2$



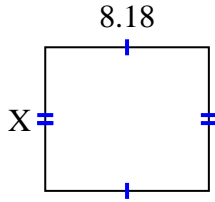
1. _____
2. _____
3. _____
4. _____
5. _____
6. _____
7. _____
8. _____
9. _____
10. _____
11. _____
12. _____
13. _____
14. _____
15. _____



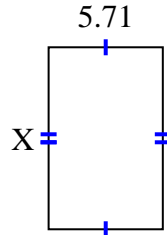
Finden Sie den Wert von X für jede Figur. Jede Zahl ist in Zentimetern (cm) angegeben.

Nicht maßstabsgetreu.

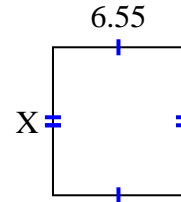
1) area = $58,7324 \text{ cm}^2$



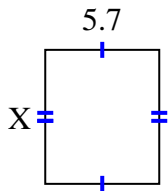
2) area = $51,961 \text{ cm}^2$



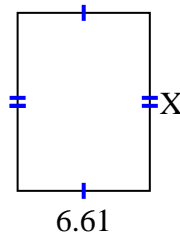
3) area = $48,47 \text{ cm}^2$



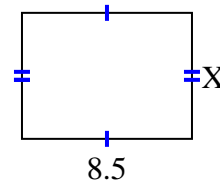
4) area = $38,19 \text{ cm}^2$



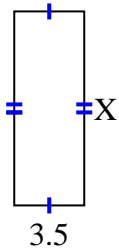
5) area = $58,829 \text{ cm}^2$



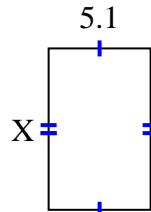
6) area = $53,55 \text{ cm}^2$



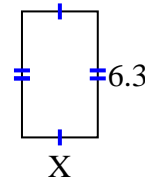
7) area = $33,95 \text{ cm}^2$



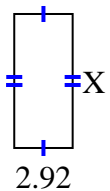
8) area = $41,157 \text{ cm}^2$



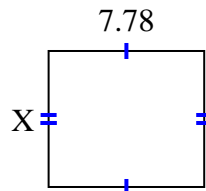
9) area = $23,877 \text{ cm}^2$



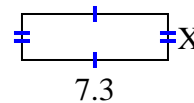
10) area = $19,564 \text{ cm}^2$



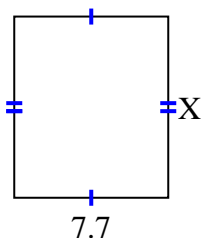
11) area = $52,904 \text{ cm}^2$



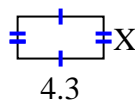
12) area = $16,79 \text{ cm}^2$



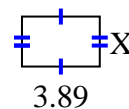
13) area = $69,762 \text{ cm}^2$



14) area = $9,03 \text{ cm}^2$



15) area = $9,725 \text{ cm}^2$

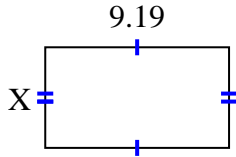
**Antworten**1. 7.182. 9.13. 7.44. 6.75. 8.96. 6.37. 9.78. 8.079. 3.7910. 6.711. 6.812. 2.313. 9.0614. 2.115. 2.5



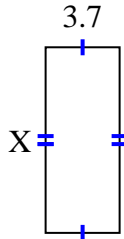
Finden Sie den Wert von X für jede Figur. Jede Zahl ist in Zentimetern (cm) angegeben. Nicht maßstabsgetreu.

Antworten

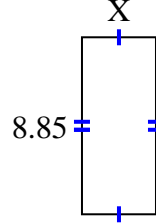
1) area = $46,2257 \text{ cm}^2$



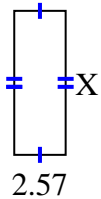
2) area = $34,336 \text{ cm}^2$



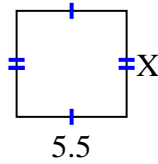
3) area = $32,745 \text{ cm}^2$



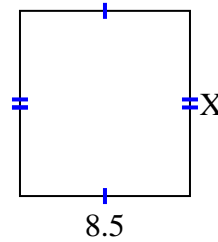
4) area = $18,504 \text{ cm}^2$



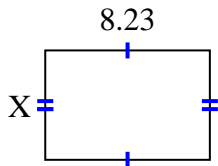
5) area = $29,15 \text{ cm}^2$



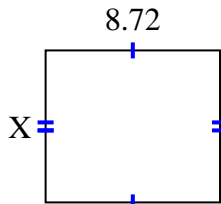
6) area = $78,71 \text{ cm}^2$



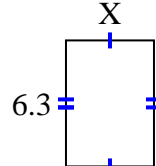
7) area = $45,0181 \text{ cm}^2$



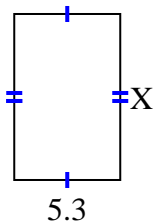
8) area = $66,272 \text{ cm}^2$



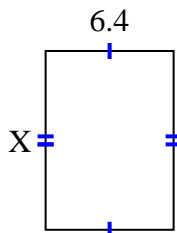
9) area = $27,72 \text{ cm}^2$



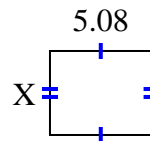
10) area = $43,99 \text{ cm}^2$



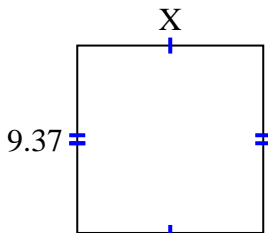
11) area = $57,216 \text{ cm}^2$



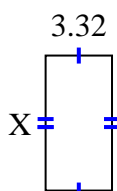
12) area = $21,336 \text{ cm}^2$



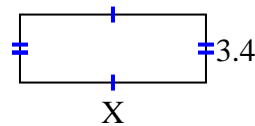
13) area = $87,141 \text{ cm}^2$



14) area = $22,41 \text{ cm}^2$



15) area = $31,62 \text{ cm}^2$



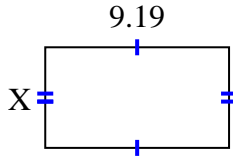
1. _____
2. _____
3. _____
4. _____
5. _____
6. _____
7. _____
8. _____
9. _____
10. _____
11. _____
12. _____
13. _____
14. _____
15. _____



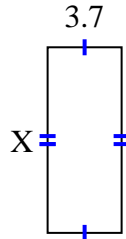
Finden Sie den Wert von X für jede Figur. Jede Zahl ist in Zentimetern (cm) angegeben.

Nicht maßstabsgetreu.

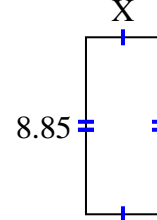
1) area = $46,2257 \text{ cm}^2$



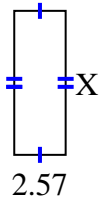
2) area = $34,336 \text{ cm}^2$



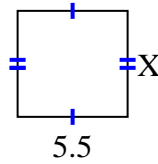
3) area = $32,745 \text{ cm}^2$



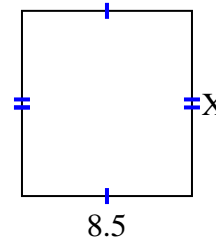
4) area = $18,504 \text{ cm}^2$



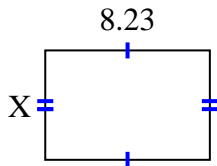
5) area = $29,15 \text{ cm}^2$



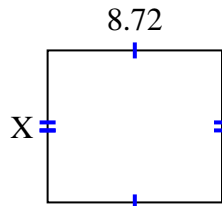
6) area = $78,71 \text{ cm}^2$



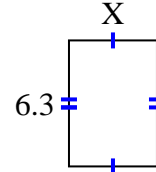
7) area = $45,0181 \text{ cm}^2$



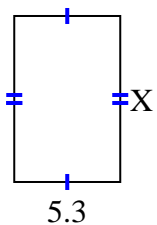
8) area = $66,272 \text{ cm}^2$



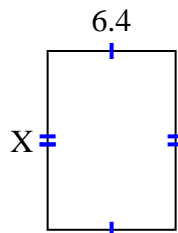
9) area = $27,72 \text{ cm}^2$



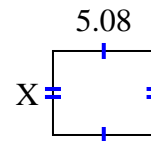
10) area = $43,99 \text{ cm}^2$



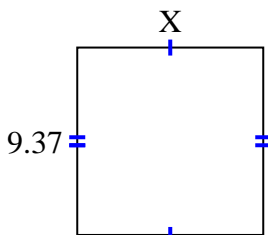
11) area = $57,216 \text{ cm}^2$



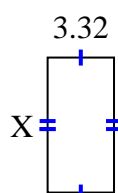
12) area = $21,336 \text{ cm}^2$



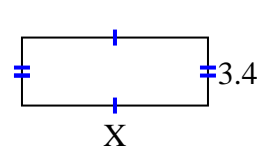
13) area = $87,141 \text{ cm}^2$



14) area = $22,41 \text{ cm}^2$



15) area = $31,62 \text{ cm}^2$

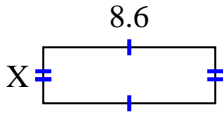
**Antworten**1. **5.03**2. **9.28**3. **3.7**4. **7.2**5. **5.3**6. **9.26**7. **5.47**8. **7.6**9. **4.4**10. **8.3**11. **8.94**12. **4.2**13. **9.3**14. **6.75**15. **9.3**



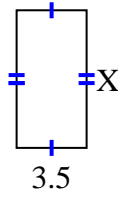
Finden Sie den Wert von X für jede Figur. Jede Zahl ist in Zentimetern (cm) angegeben. Nicht maßstabsgetreu.

Antworten

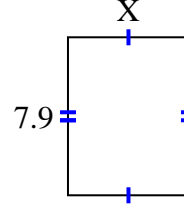
1) area = $24,08 \text{ cm}^2$



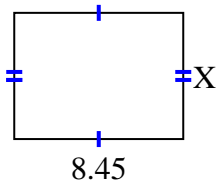
2) area = $24,08 \text{ cm}^2$



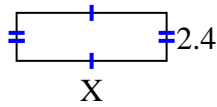
3) area = $47,795 \text{ cm}^2$



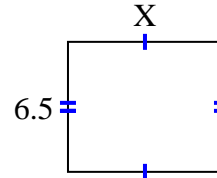
4) area = $53,3195 \text{ cm}^2$



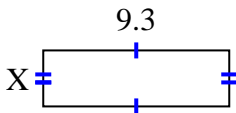
5) area = 18 cm^2



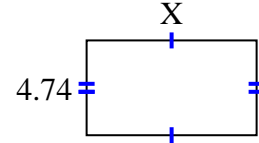
6) area = $50,05 \text{ cm}^2$



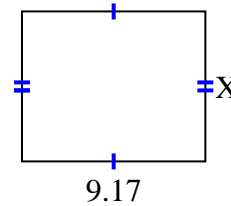
7) area = $26,04 \text{ cm}^2$



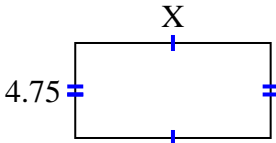
8) area = $40,29 \text{ cm}^2$



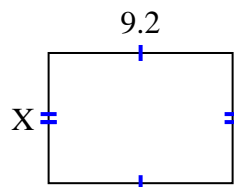
9) area = $68,775 \text{ cm}^2$



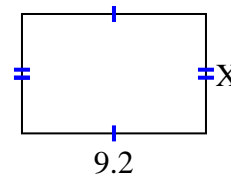
10) area = $46,4075 \text{ cm}^2$



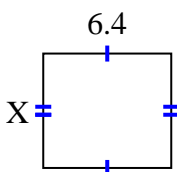
11) area = $59,892 \text{ cm}^2$



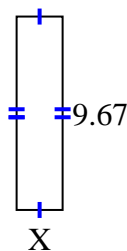
12) area = $54,924 \text{ cm}^2$



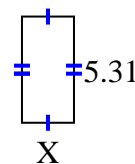
13) area = $36,608 \text{ cm}^2$



14) area = $22,241 \text{ cm}^2$



15) area = $13,806 \text{ cm}^2$



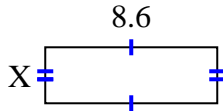
1. _____
2. _____
3. _____
4. _____
5. _____
6. _____
7. _____
8. _____
9. _____
10. _____
11. _____
12. _____
13. _____
14. _____
15. _____



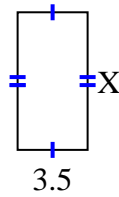
Finden Sie den Wert von X für jede Figur. Jede Zahl ist in Zentimetern (cm) angegeben.

Nicht maßstabsgetreu.

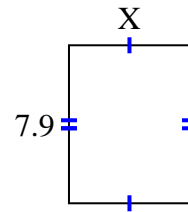
1) area = $24,08 \text{ cm}^2$



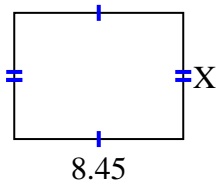
2) area = $24,08 \text{ cm}^2$



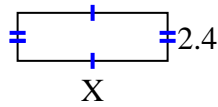
3) area = $47,795 \text{ cm}^2$



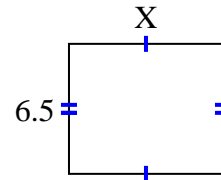
4) area = $53,3195 \text{ cm}^2$



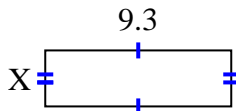
5) area = 18 cm^2



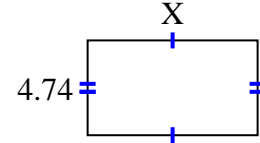
6) area = $50,05 \text{ cm}^2$



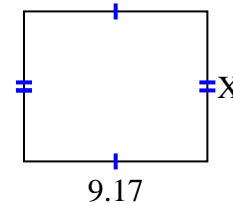
7) area = $26,04 \text{ cm}^2$



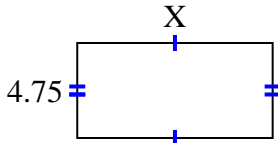
8) area = $40,29 \text{ cm}^2$



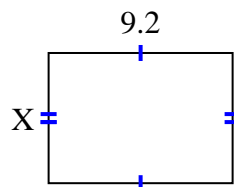
9) area = $68,775 \text{ cm}^2$



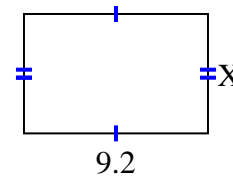
10) area = $46,4075 \text{ cm}^2$



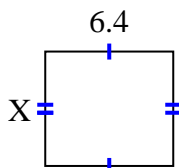
11) area = $59,892 \text{ cm}^2$



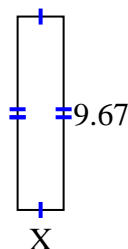
12) area = $54,924 \text{ cm}^2$



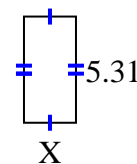
13) area = $36,608 \text{ cm}^2$



14) area = $22,241 \text{ cm}^2$



15) area = $13,806 \text{ cm}^2$

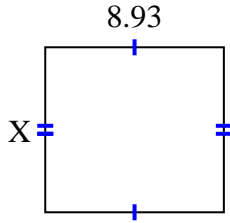
**Antworten**1. 2.82. 6.883. 6.054. 6.315. 7.56. 7.77. 2.88. 8.59. 7.510. 9.7711. 6.5112. 5.9713. 5.7214. 2.315. 2.6



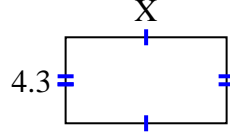
Finden Sie den Wert von X für jede Figur. Jede Zahl ist in Zentimetern (cm) angegeben. Nicht maßstabsgetreu.

Antworten

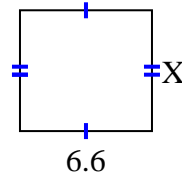
1) area = $73,6725 \text{ cm}^2$



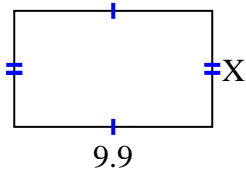
2) area = $34,615 \text{ cm}^2$



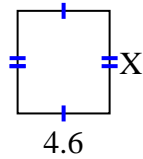
3) area = $39,864 \text{ cm}^2$



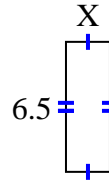
4) area = $57,42 \text{ cm}^2$



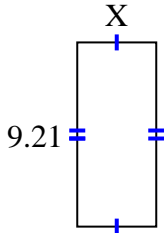
5) area = $23,598 \text{ cm}^2$



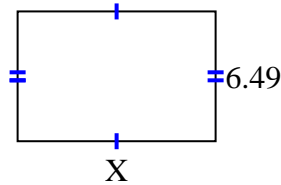
6) area = $14,3 \text{ cm}^2$



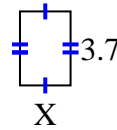
7) area = $36,3795 \text{ cm}^2$



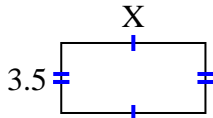
8) area = $64,251 \text{ cm}^2$



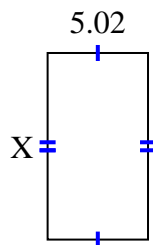
9) area = $9,361 \text{ cm}^2$



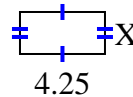
10) area = $25,235 \text{ cm}^2$



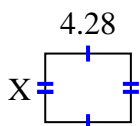
11) area = $46,8366 \text{ cm}^2$



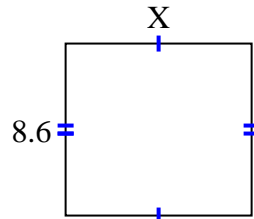
12) area = $8,925 \text{ cm}^2$



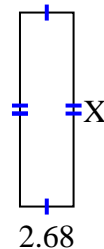
13) area = $14,6804 \text{ cm}^2$



14) area = $79,98 \text{ cm}^2$



15) area = $25,996 \text{ cm}^2$



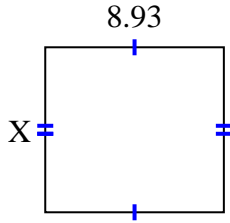
1. _____
2. _____
3. _____
4. _____
5. _____
6. _____
7. _____
8. _____
9. _____
10. _____
11. _____
12. _____
13. _____
14. _____
15. _____



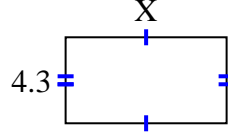
Finden Sie den Wert von X für jede Figur. Jede Zahl ist in Zentimetern (cm) angegeben.

Nicht maßstabsgetreu.

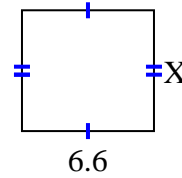
1) area = $73,6725 \text{ cm}^2$



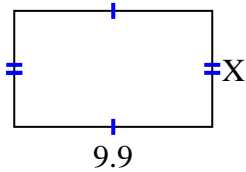
2) area = $34,615 \text{ cm}^2$



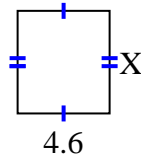
3) area = $39,864 \text{ cm}^2$



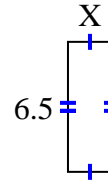
4) area = $57,42 \text{ cm}^2$



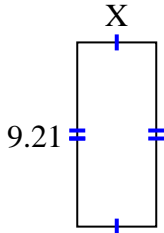
5) area = $23,598 \text{ cm}^2$



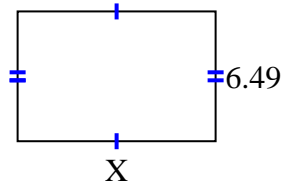
6) area = $14,3 \text{ cm}^2$



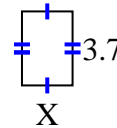
7) area = $36,3795 \text{ cm}^2$



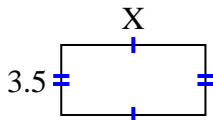
8) area = $64,251 \text{ cm}^2$



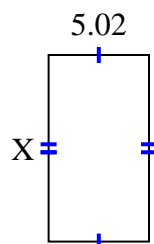
9) area = $9,361 \text{ cm}^2$



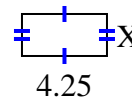
10) area = $25,235 \text{ cm}^2$



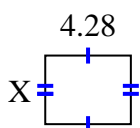
11) area = $46,8366 \text{ cm}^2$



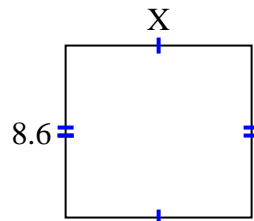
12) area = $8,925 \text{ cm}^2$



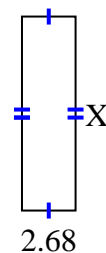
13) area = $14,6804 \text{ cm}^2$



14) area = $79,98 \text{ cm}^2$



15) area = $25,996 \text{ cm}^2$

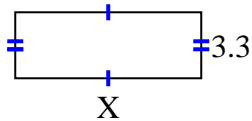
**Antworten**1. **8.25**2. **8.05**3. **6.04**4. **5.8**5. **5.13**6. **2.2**7. **3.95**8. **9.9**9. **2.53**10. **7.21**11. **9.33**12. **2.1**13. **3.43**14. **9.3**15. **9.7**



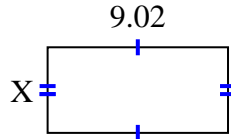
Finden Sie den Wert von X für jede Figur. Jede Zahl ist in Zentimetern (cm) angegeben.

Nicht maßstabsgetreu.

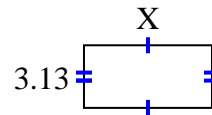
1) area = $30,69 \text{ cm}^2$



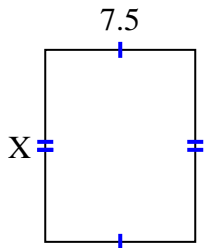
2) area = $38,6056 \text{ cm}^2$



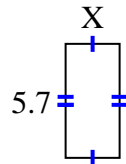
3) area = $20,032 \text{ cm}^2$



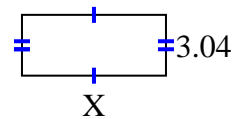
4) area = 72 cm^2



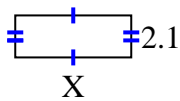
5) area = $15,39 \text{ cm}^2$



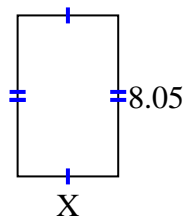
6) area = $21,888 \text{ cm}^2$



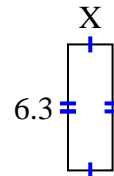
7) area = $12,18 \text{ cm}^2$



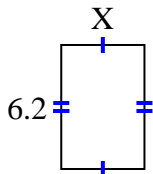
8) area = $40,4915 \text{ cm}^2$



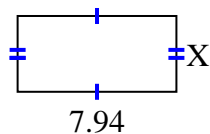
9) area = $14,049 \text{ cm}^2$



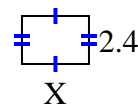
10) area = $25,792 \text{ cm}^2$



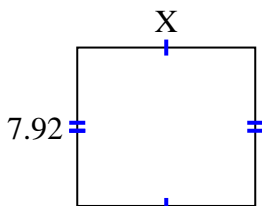
11) area = $30,0926 \text{ cm}^2$



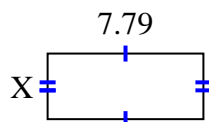
12) area = $8,04 \text{ cm}^2$



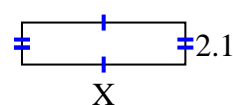
13) area = $70,488 \text{ cm}^2$



14) area = $25,5512 \text{ cm}^2$



15) area = $17,157 \text{ cm}^2$



Antworten

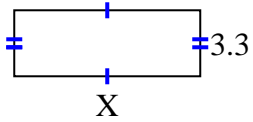
1. _____
2. _____
3. _____
4. _____
5. _____
6. _____
7. _____
8. _____
9. _____
10. _____
11. _____
12. _____
13. _____
14. _____
15. _____



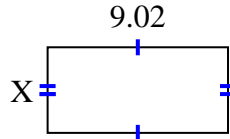
Finden Sie den Wert von X für jede Figur. Jede Zahl ist in Zentimetern (cm) angegeben.

Nicht maßstabsgetreu.

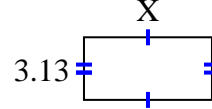
1) area = $30,69 \text{ cm}^2$



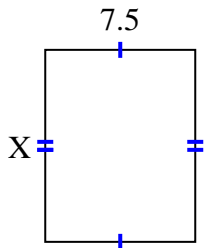
2) area = $38,6056 \text{ cm}^2$



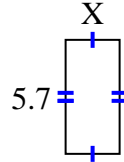
3) area = $20,032 \text{ cm}^2$



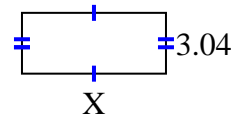
4) area = 72 cm^2



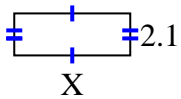
5) area = $15,39 \text{ cm}^2$



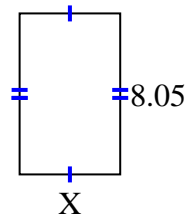
6) area = $21,888 \text{ cm}^2$



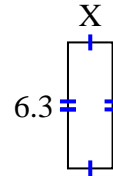
7) area = $12,18 \text{ cm}^2$



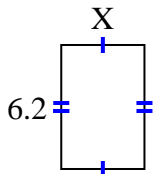
8) area = $40,4915 \text{ cm}^2$



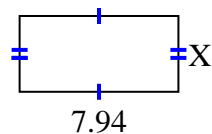
9) area = $14,049 \text{ cm}^2$



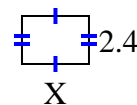
10) area = $25,792 \text{ cm}^2$



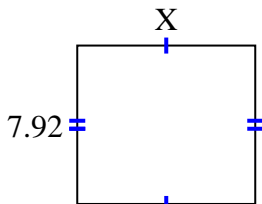
11) area = $30,0926 \text{ cm}^2$



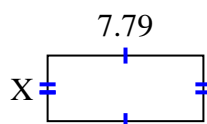
12) area = $8,04 \text{ cm}^2$



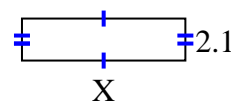
13) area = $70,488 \text{ cm}^2$



14) area = $25,5512 \text{ cm}^2$



15) area = $17,157 \text{ cm}^2$

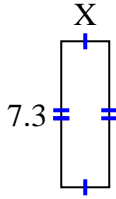
**Antworten**1. 9.32. 4.283. 6.44. 9.65. 2.76. 7.27. 5.88. 5.039. 2.2310. 4.1611. 3.7912. 3.3513. 8.914. 3.2815. 8.17



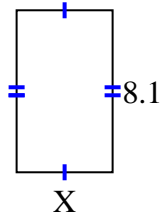
Finden Sie den Wert von X für jede Figur. Jede Zahl ist in Zentimetern (cm) angegeben. Nicht maßstabsgetreu.

Antworten

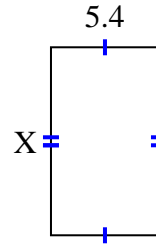
1) area = $17,52 \text{ cm}^2$



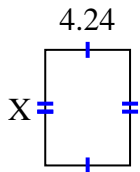
2) area = $38,88 \text{ cm}^2$



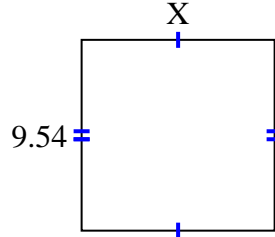
3) area = $50,76 \text{ cm}^2$



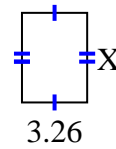
4) area = $24,5072 \text{ cm}^2$



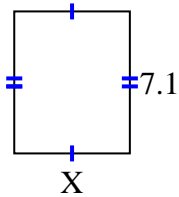
5) area = $92,061 \text{ cm}^2$



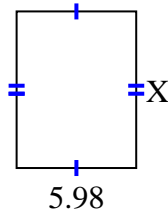
6) area = $14,6048 \text{ cm}^2$



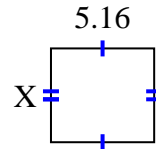
7) area = $41,038 \text{ cm}^2$



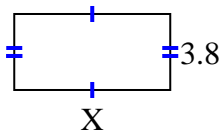
8) area = $46,8234 \text{ cm}^2$



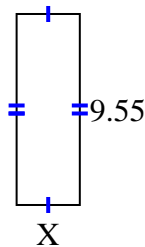
9) area = $24,2004 \text{ cm}^2$



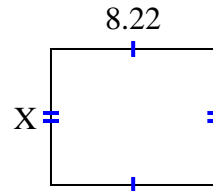
10) area = $29,64 \text{ cm}^2$



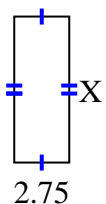
11) area = $30,178 \text{ cm}^2$



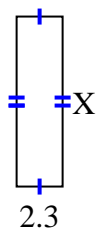
12) area = $55,896 \text{ cm}^2$



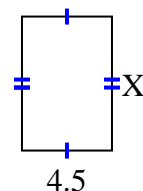
13) area = $20,075 \text{ cm}^2$



14) area = $19,55 \text{ cm}^2$



15) area = $30,15 \text{ cm}^2$



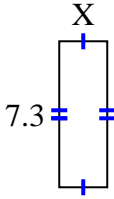
1. _____
2. _____
3. _____
4. _____
5. _____
6. _____
7. _____
8. _____
9. _____
10. _____
11. _____
12. _____
13. _____
14. _____
15. _____



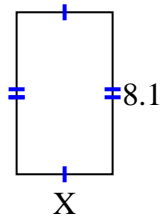
Finden Sie den Wert von X für jede Figur. Jede Zahl ist in Zentimetern (cm) angegeben.

Nicht maßstabsgetreu.

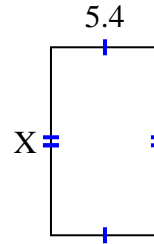
1) area = $17,52 \text{ cm}^2$



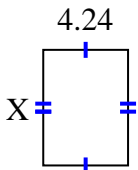
2) area = $38,88 \text{ cm}^2$



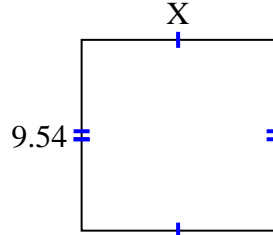
3) area = $50,76 \text{ cm}^2$



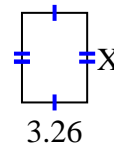
4) area = $24,5072 \text{ cm}^2$



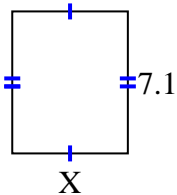
5) area = $92,061 \text{ cm}^2$



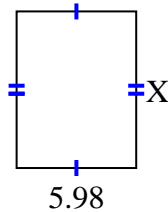
6) area = $14,6048 \text{ cm}^2$



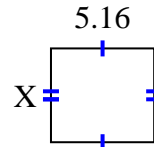
7) area = $41,038 \text{ cm}^2$



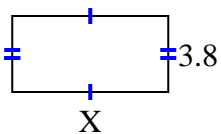
8) area = $46,8234 \text{ cm}^2$



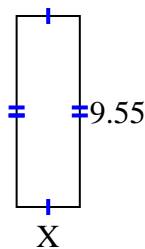
9) area = $24,2004 \text{ cm}^2$



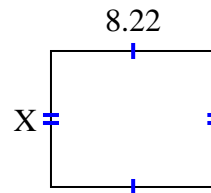
10) area = $29,64 \text{ cm}^2$



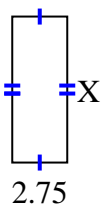
11) area = $30,178 \text{ cm}^2$



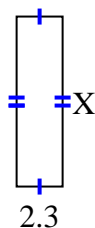
12) area = $55,896 \text{ cm}^2$



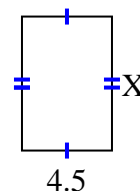
13) area = $20,075 \text{ cm}^2$



14) area = $19,55 \text{ cm}^2$



15) area = $30,15 \text{ cm}^2$

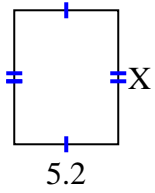
**Antworten**1. 2.42. 4.83. 9.44. 5.785. 9.656. 4.487. 5.788. 7.839. 4.6910. 7.811. 3.1612. 6.813. 7.314. 8.515. 6.7



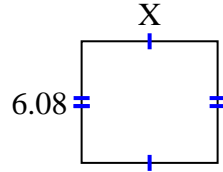
Finden Sie den Wert von X für jede Figur. Jede Zahl ist in Zentimetern (cm) angegeben. Nicht maßstabsgetreu.

Antworten

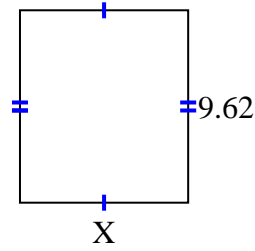
1) area = $34,84 \text{ cm}^2$



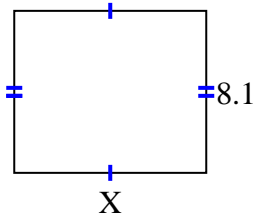
2) area = $41,344 \text{ cm}^2$



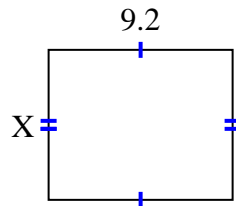
3) area = $80,9042 \text{ cm}^2$



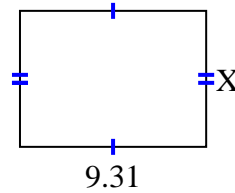
4) area = $77,76 \text{ cm}^2$



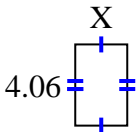
5) area = 69 cm^2



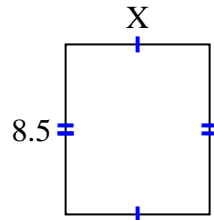
6) area = $63,308 \text{ cm}^2$



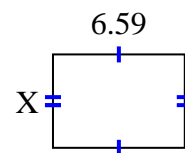
7) area = $10,556 \text{ cm}^2$



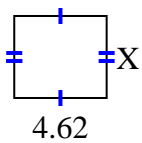
8) area = $61,2 \text{ cm}^2$



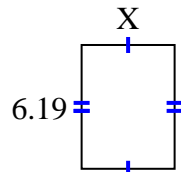
9) area = $30,7753 \text{ cm}^2$



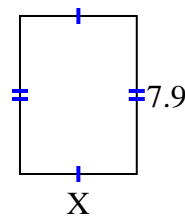
10) area = $18,942 \text{ cm}^2$



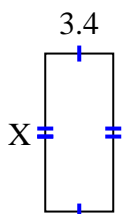
11) area = $28,7835 \text{ cm}^2$



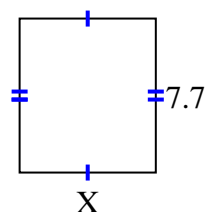
12) area = $46,136 \text{ cm}^2$



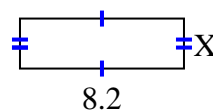
13) area = $26,86 \text{ cm}^2$



14) area = $52,437 \text{ cm}^2$



15) area = $20,5 \text{ cm}^2$



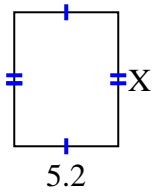
1. _____
2. _____
3. _____
4. _____
5. _____
6. _____
7. _____
8. _____
9. _____
10. _____
11. _____
12. _____
13. _____
14. _____
15. _____



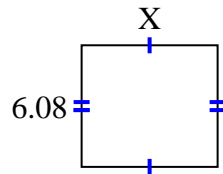
Finden Sie den Wert von X für jede Figur. Jede Zahl ist in Zentimetern (cm) angegeben.

Nicht maßstabsgetreu.

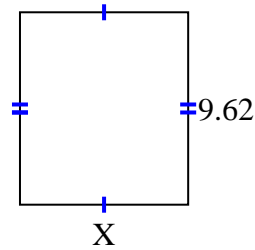
1) area = $34,84 \text{ cm}^2$



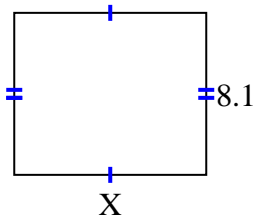
2) area = $41,344 \text{ cm}^2$



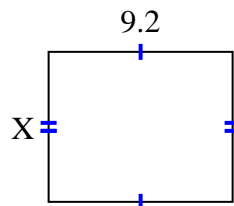
3) area = $80,9042 \text{ cm}^2$



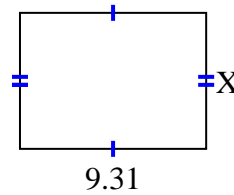
4) area = $77,76 \text{ cm}^2$



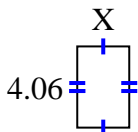
5) area = 69 cm^2



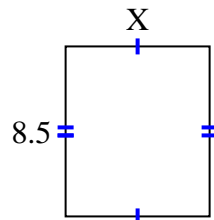
6) area = $63,308 \text{ cm}^2$



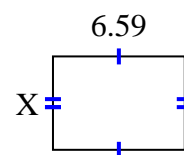
7) area = $10,556 \text{ cm}^2$



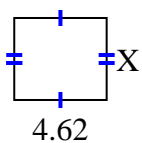
8) area = $61,2 \text{ cm}^2$



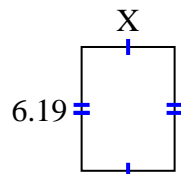
9) area = $30,7753 \text{ cm}^2$



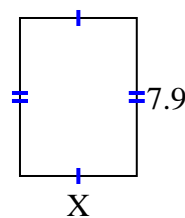
10) area = $18,942 \text{ cm}^2$



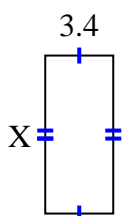
11) area = $28,7835 \text{ cm}^2$



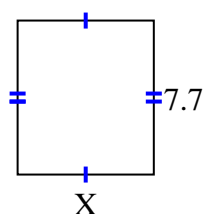
12) area = $46,136 \text{ cm}^2$



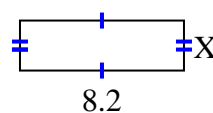
13) area = $26,86 \text{ cm}^2$



14) area = $52,437 \text{ cm}^2$

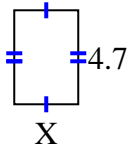


15) area = $20,5 \text{ cm}^2$

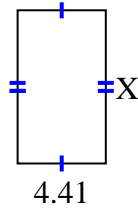
**Antworten**1. 6.72. 6.83. 8.414. 9.65. 7.56. 6.87. 2.68. 7.29. 4.6710. 4.111. 4.6512. 5.8413. 7.914. 6.8115. 2.5

**Finden Sie den Wert von X für jede Figur. Jede Zahl ist in Zentimetern (cm) angegeben.****Nicht maßstabsgetreu.****Antworten**

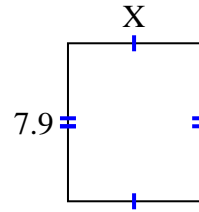
1) area = $15,04 \text{ cm}^2$



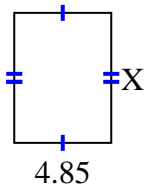
2) area = $33,7806 \text{ cm}^2$



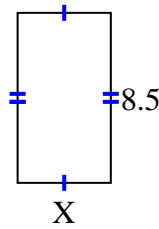
3) area = $52,219 \text{ cm}^2$



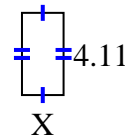
4) area = $31,525 \text{ cm}^2$



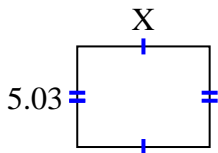
5) area = $39,61 \text{ cm}^2$



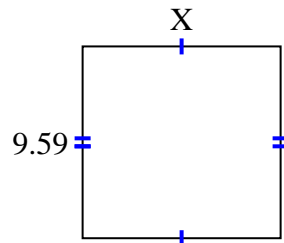
6) area = $8,5488 \text{ cm}^2$



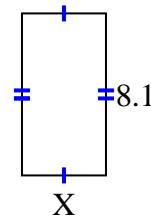
7) area = $33,2986 \text{ cm}^2$



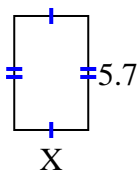
8) area = $94,941 \text{ cm}^2$



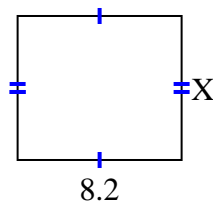
9) area = $34,02 \text{ cm}^2$



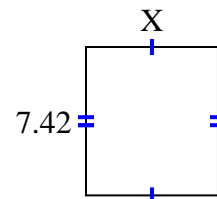
10) area = $21,09 \text{ cm}^2$



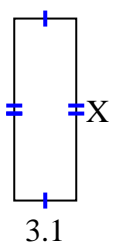
11) area = $59,04 \text{ cm}^2$



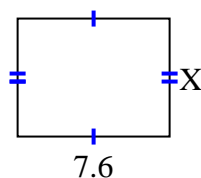
12) area = $48,972 \text{ cm}^2$



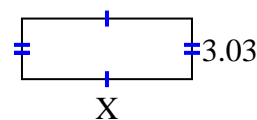
13) area = $28,21 \text{ cm}^2$



14) area = $44,84 \text{ cm}^2$



15) area = $25,755 \text{ cm}^2$



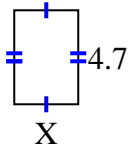
1. _____
2. _____
3. _____
4. _____
5. _____
6. _____
7. _____
8. _____
9. _____
10. _____
11. _____
12. _____
13. _____
14. _____
15. _____



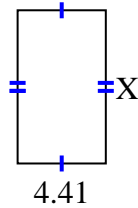
Finden Sie den Wert von X für jede Figur. Jede Zahl ist in Zentimetern (cm) angegeben.

Nicht maßstabsgetreu.

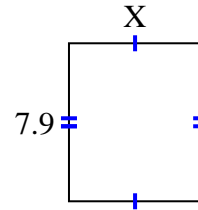
1) area = $15,04 \text{ cm}^2$



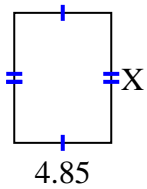
2) area = $33,7806 \text{ cm}^2$



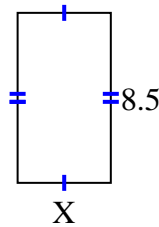
3) area = $52,219 \text{ cm}^2$



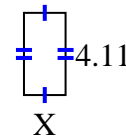
4) area = $31,525 \text{ cm}^2$



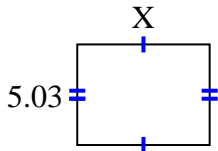
5) area = $39,61 \text{ cm}^2$



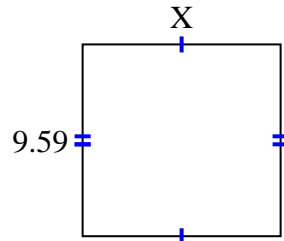
6) area = $8,5488 \text{ cm}^2$



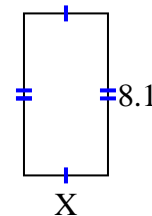
7) area = $33,2986 \text{ cm}^2$



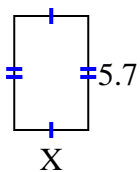
8) area = $94,941 \text{ cm}^2$



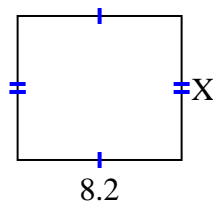
9) area = $34,02 \text{ cm}^2$



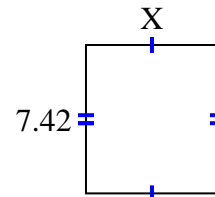
10) area = $21,09 \text{ cm}^2$



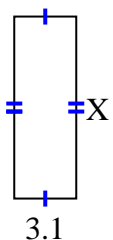
11) area = $59,04 \text{ cm}^2$



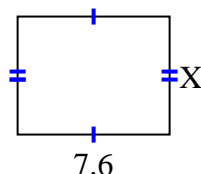
12) area = $48,972 \text{ cm}^2$



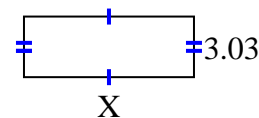
13) area = $28,21 \text{ cm}^2$



14) area = $44,84 \text{ cm}^2$



15) area = $25,755 \text{ cm}^2$

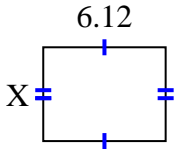
**Antworten**1. 3.22. 7.663. 6.614. 6.55. 4.666. 2.087. 6.628. 9.99. 4.210. 3.711. 7.212. 6.613. 9.114. 5.915. 8.5



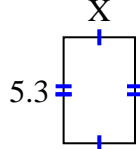
Finden Sie den Wert von X für jede Figur. Jede Zahl ist in Zentimetern (cm) angegeben. Nicht maßstabsgetreu.

Antworten

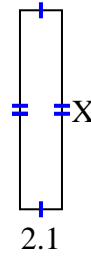
1) area = $28,7028 \text{ cm}^2$



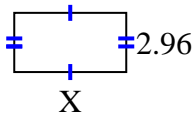
2) area = $18,921 \text{ cm}^2$



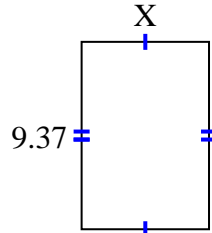
3) area = $20,895 \text{ cm}^2$



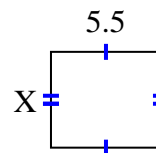
4) area = $16,576 \text{ cm}^2$



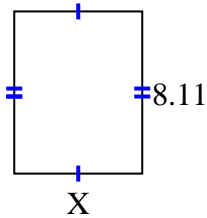
5) area = $59,6869 \text{ cm}^2$



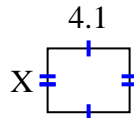
6) area = $26,345 \text{ cm}^2$



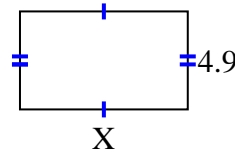
7) area = $51,904 \text{ cm}^2$



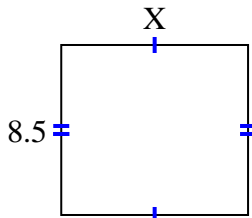
8) area = $13,079 \text{ cm}^2$



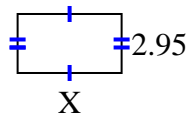
9) area = $41,111 \text{ cm}^2$



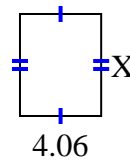
10) area = $79,39 \text{ cm}^2$



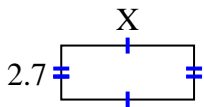
11) area = $15,34 \text{ cm}^2$



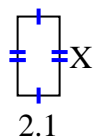
12) area = $20,706 \text{ cm}^2$



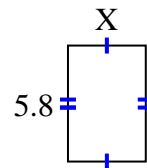
13) area = $17,928 \text{ cm}^2$



14) area = $8,295 \text{ cm}^2$



15) area = $22,562 \text{ cm}^2$



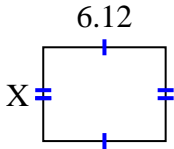
1. _____
2. _____
3. _____
4. _____
5. _____
6. _____
7. _____
8. _____
9. _____
10. _____
11. _____
12. _____
13. _____
14. _____
15. _____



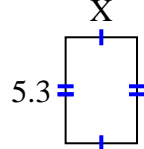
Finden Sie den Wert von X für jede Figur. Jede Zahl ist in Zentimetern (cm) angegeben.

Nicht maßstabsgetreu.

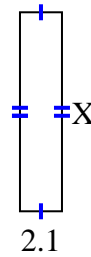
1) area = $28,7028 \text{ cm}^2$



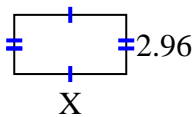
2) area = $18,921 \text{ cm}^2$



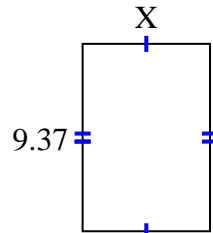
3) area = $20,895 \text{ cm}^2$



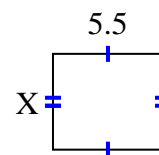
4) area = $16,576 \text{ cm}^2$



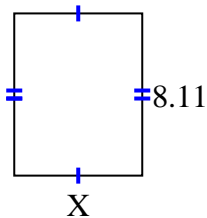
5) area = $59,6869 \text{ cm}^2$



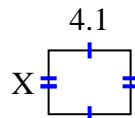
6) area = $26,345 \text{ cm}^2$



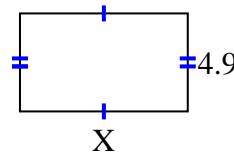
7) area = $51,904 \text{ cm}^2$



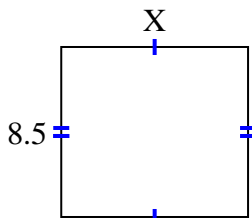
8) area = $13,079 \text{ cm}^2$



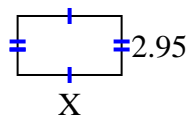
9) area = $41,111 \text{ cm}^2$



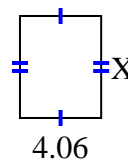
10) area = $79,39 \text{ cm}^2$



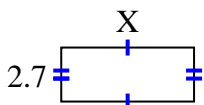
11) area = $15,34 \text{ cm}^2$



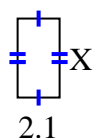
12) area = $20,706 \text{ cm}^2$



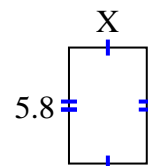
13) area = $17,928 \text{ cm}^2$



14) area = $8,295 \text{ cm}^2$



15) area = $22,562 \text{ cm}^2$

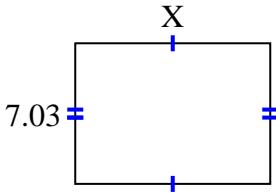
**Antworten**1. 4.692. 3.573. 9.954. 5.65. 6.376. 4.797. 6.48. 3.199. 8.3910. 9.3411. 5.212. 5.113. 6.6414. 3.9515. 3.89



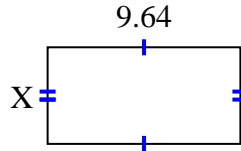
Finden Sie den Wert von X für jede Figur. Jede Zahl ist in Zentimetern (cm) angegeben. Nicht maßstabsgetreu.

Antworten

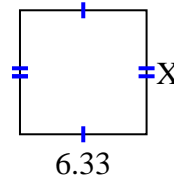
1) area = $68,5425 \text{ cm}^2$



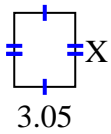
2) area = $46,5612 \text{ cm}^2$




3) area = $39,246 \text{ cm}^2$



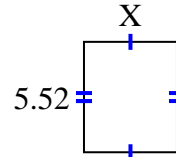
4) area = $11,285 \text{ cm}^2$



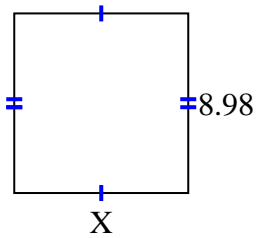
5) area = $23,8425 \text{ cm}^2$



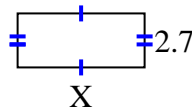
6) area = $25,668 \text{ cm}^2$



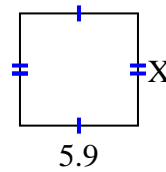
7) area = $78,126 \text{ cm}^2$



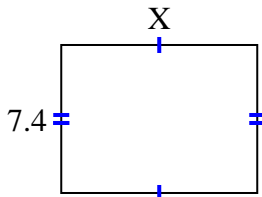
8) area = $17,145 \text{ cm}^2$



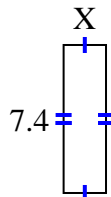
9) area = $33,099 \text{ cm}^2$



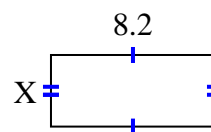
10) area = $72,52 \text{ cm}^2$



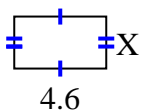
11) area = $15,688 \text{ cm}^2$



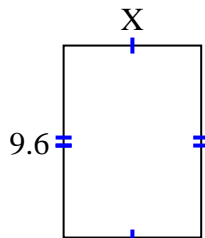
12) area = $29,356 \text{ cm}^2$



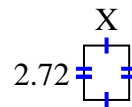
13) area = $11,96 \text{ cm}^2$



14) area = $66,048 \text{ cm}^2$



15) area = $6,1472 \text{ cm}^2$



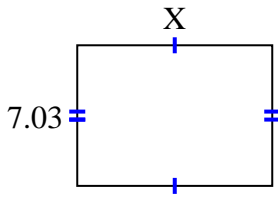
1. _____
2. _____
3. _____
4. _____
5. _____
6. _____
7. _____
8. _____
9. _____
10. _____
11. _____
12. _____
13. _____
14. _____
15. _____



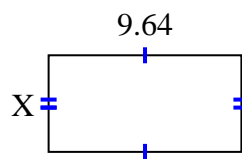
Finden Sie den Wert von X für jede Figur. Jede Zahl ist in Zentimetern (cm) angegeben.

Nicht maßstabsgetreu.

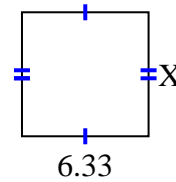
1) area = $68,5425 \text{ cm}^2$



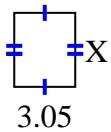
2) area = $46,5612 \text{ cm}^2$




3) area = $39,246 \text{ cm}^2$



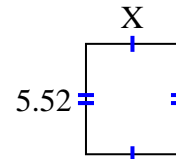
4) area = $11,285 \text{ cm}^2$



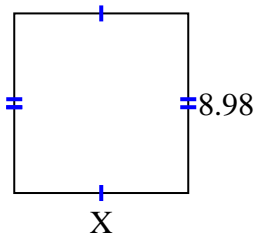
5) area = $23,8425 \text{ cm}^2$



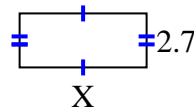
6) area = $25,668 \text{ cm}^2$



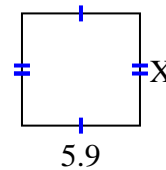
7) area = $78,126 \text{ cm}^2$



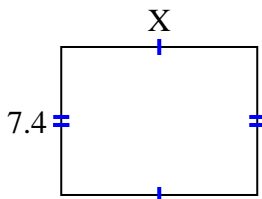
8) area = $17,145 \text{ cm}^2$



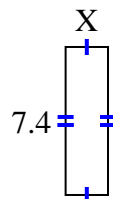
9) area = $33,099 \text{ cm}^2$



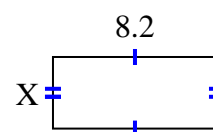
10) area = $72,52 \text{ cm}^2$



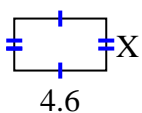
11) area = $15,688 \text{ cm}^2$



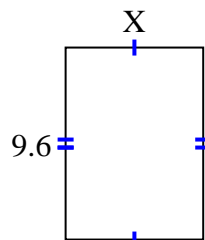
12) area = $29,356 \text{ cm}^2$



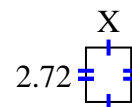
13) area = $11,96 \text{ cm}^2$



14) area = $66,048 \text{ cm}^2$



15) area = $6,1472 \text{ cm}^2$

**Antworten**1. 9.752. 4.833. 6.24. 3.75. 2.756. 4.657. 8.78. 6.359. 5.6110. 9.811. 2.1212. 3.5813. 2.614. 6.8815. 2.26