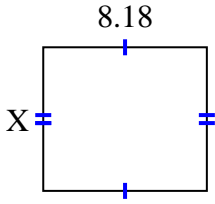




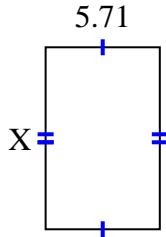
**Finden Sie den Wert von X für jede Figur. Jede Zahl ist in Zentimetern (cm) angegeben. Nicht maßstabsgetreu.**

**Antworten**

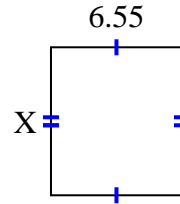
1) area =  $58,7324 \text{ cm}^2$



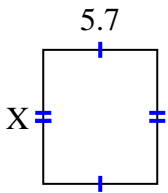
2) area =  $51,961 \text{ cm}^2$



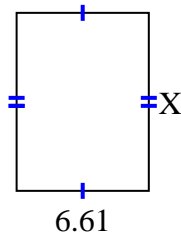
3) area =  $48,47 \text{ cm}^2$



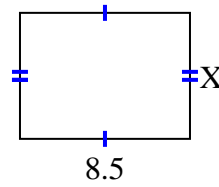
4) area =  $38,19 \text{ cm}^2$



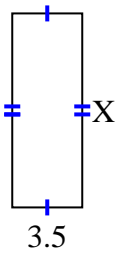
5) area =  $58,829 \text{ cm}^2$



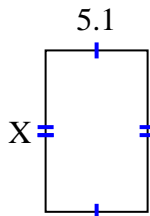
6) area =  $53,55 \text{ cm}^2$



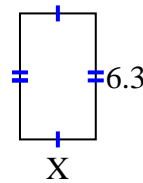
7) area =  $33,95 \text{ cm}^2$



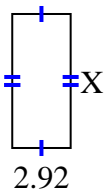
8) area =  $41,157 \text{ cm}^2$



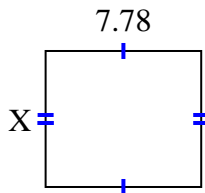
9) area =  $23,877 \text{ cm}^2$



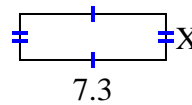
10) area =  $19,564 \text{ cm}^2$



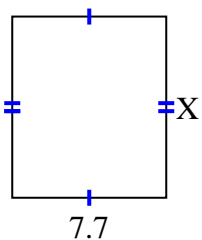
11) area =  $52,904 \text{ cm}^2$



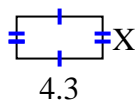
12) area =  $16,79 \text{ cm}^2$



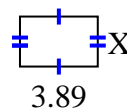
13) area =  $69,762 \text{ cm}^2$



14) area =  $9,03 \text{ cm}^2$



15) area =  $9,725 \text{ cm}^2$



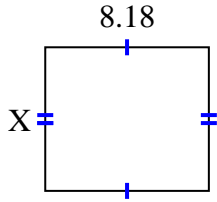
1. \_\_\_\_\_
2. \_\_\_\_\_
3. \_\_\_\_\_
4. \_\_\_\_\_
5. \_\_\_\_\_
6. \_\_\_\_\_
7. \_\_\_\_\_
8. \_\_\_\_\_
9. \_\_\_\_\_
10. \_\_\_\_\_
11. \_\_\_\_\_
12. \_\_\_\_\_
13. \_\_\_\_\_
14. \_\_\_\_\_
15. \_\_\_\_\_



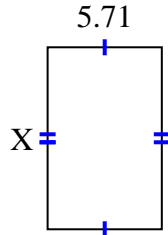
Finden Sie den Wert von X für jede Figur. Jede Zahl ist in Zentimetern (cm) angegeben.

Nicht maßstabsgetreu.

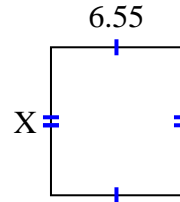
1) area =  $58,7324 \text{ cm}^2$



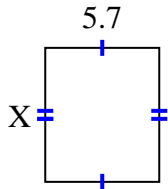
2) area =  $51,961 \text{ cm}^2$



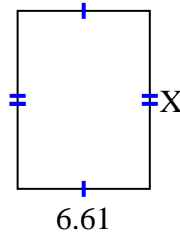
3) area =  $48,47 \text{ cm}^2$



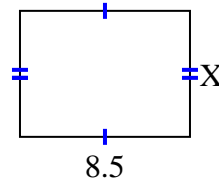
4) area =  $38,19 \text{ cm}^2$



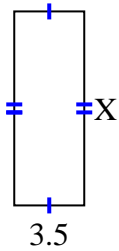
5) area =  $58,829 \text{ cm}^2$



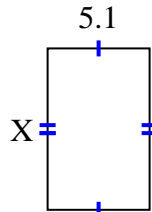
6) area =  $53,55 \text{ cm}^2$



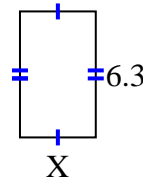
7) area =  $33,95 \text{ cm}^2$



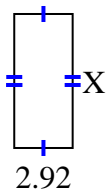
8) area =  $41,157 \text{ cm}^2$



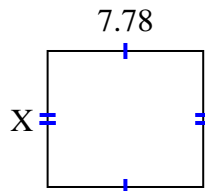
9) area =  $23,877 \text{ cm}^2$



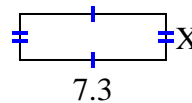
10) area =  $19,564 \text{ cm}^2$



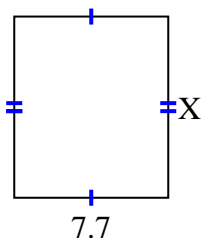
11) area =  $52,904 \text{ cm}^2$



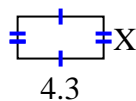
12) area =  $16,79 \text{ cm}^2$



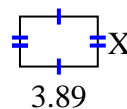
13) area =  $69,762 \text{ cm}^2$



14) area =  $9,03 \text{ cm}^2$



15) area =  $9,725 \text{ cm}^2$

**Antworten**1. 7.182. 9.13. 7.44. 6.75. 8.96. 6.37. 9.78. 8.079. 3.7910. 6.711. 6.812. 2.313. 9.0614. 2.115. 2.5