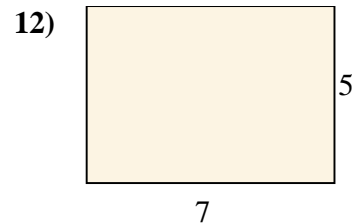
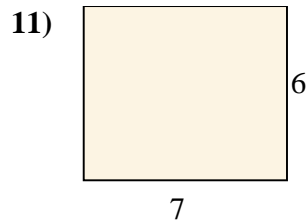
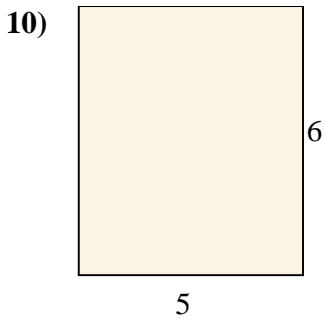
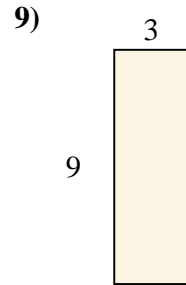
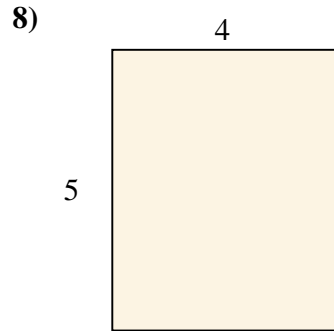
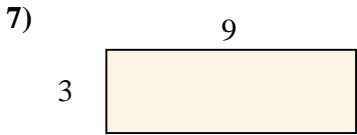
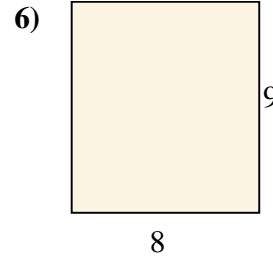
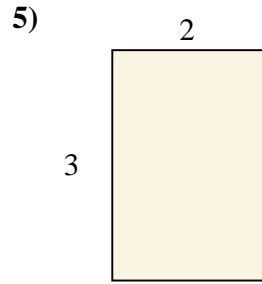
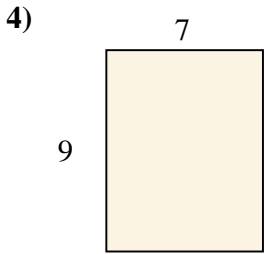

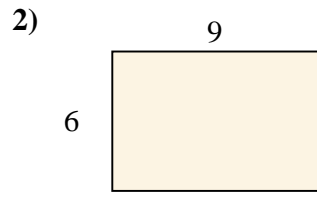
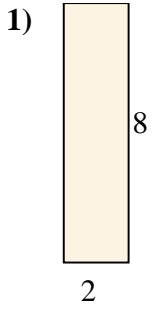




Berechne die Fläche der gezeigten Rechtecke.

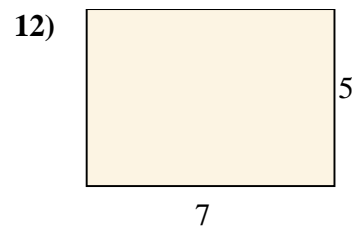
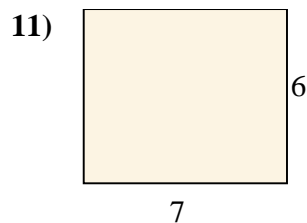
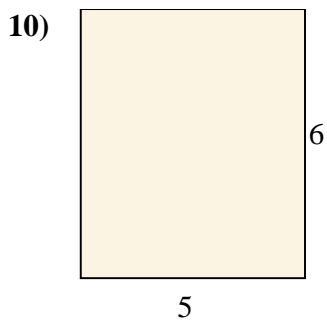
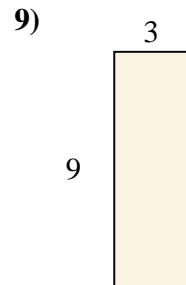
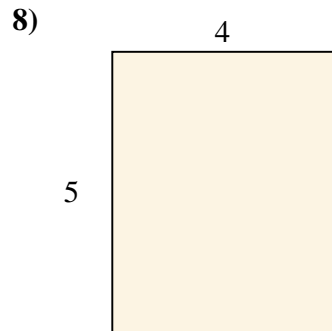
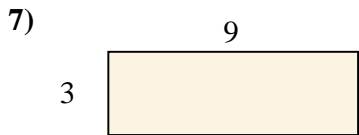
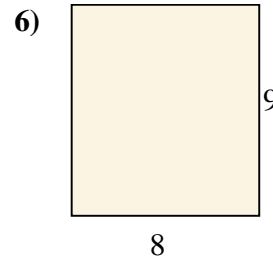
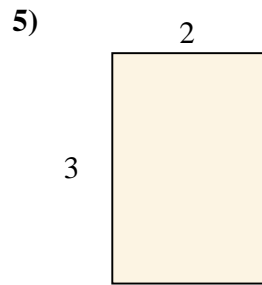
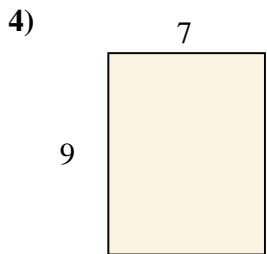
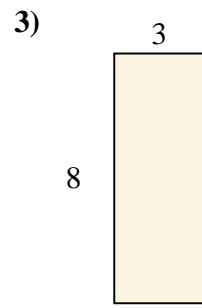
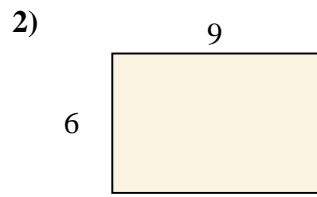
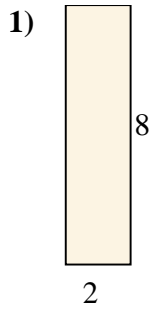
**Antworten**



- 1. \_\_\_\_\_
- 2. \_\_\_\_\_
- 3. \_\_\_\_\_
- 4. \_\_\_\_\_
- 5. \_\_\_\_\_
- 6. \_\_\_\_\_
- 7. \_\_\_\_\_
- 8. \_\_\_\_\_
- 9. \_\_\_\_\_
- 10. \_\_\_\_\_
- 11. \_\_\_\_\_
- 12. \_\_\_\_\_



Berechne die Fläche der gezeigten Rechtecke.



**Antworten**

1. 16

2. 54

3. 24

4. 63

5. 6

6. 72

7. 27

8. 20

9. 27

10. 30

11. 42

12. 35