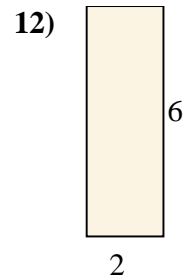
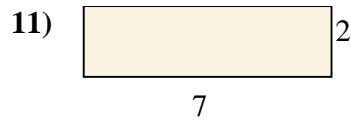
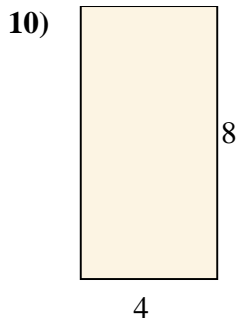


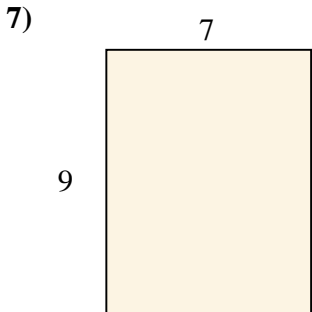
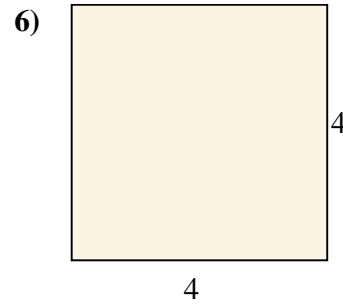
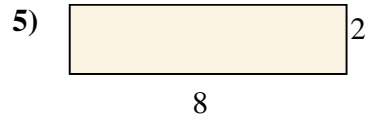
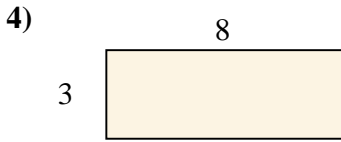
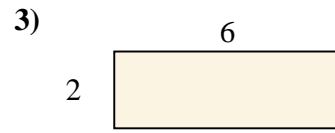
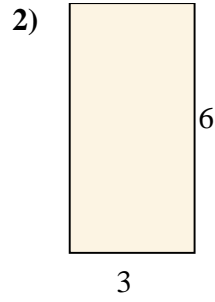
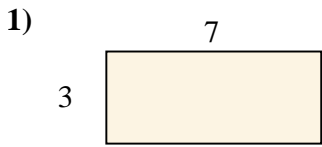


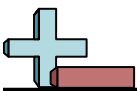


Berechne die Fläche der gezeigten Rechtecke.

Antworten

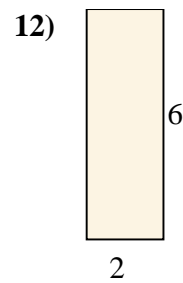
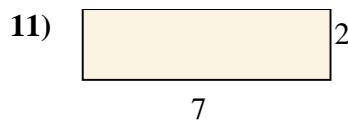
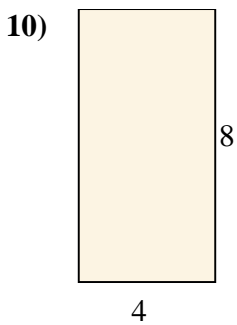


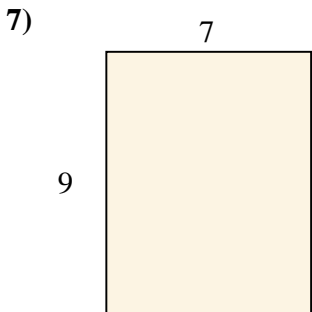
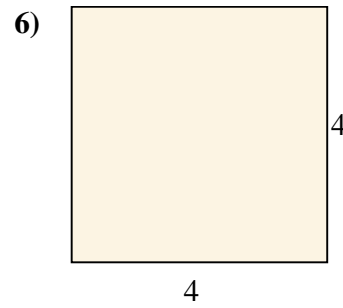
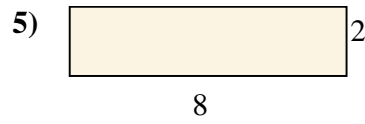
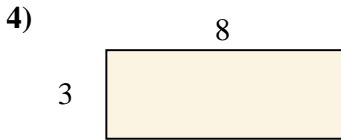
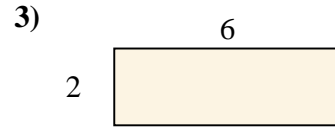
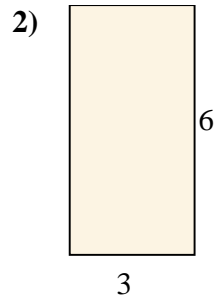
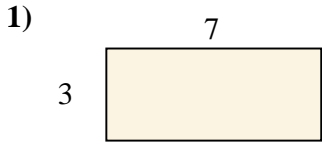


- 1. _____
- 2. _____
- 3. _____
- 4. _____
- 5. _____
- 6. _____
- 7. _____
- 8. _____
- 9. _____
- 10. _____
- 11. _____
- 12. _____



Berechne die Fläche der gezeigten Rechtecke.

Antworten



- 1. 21
- 2. 18
- 3. 12
- 4. 24
- 5. 16
- 6. 16
- 7. 63
- 8. 27
- 9. 16
- 10. 32
- 11. 14
- 12. 12