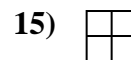
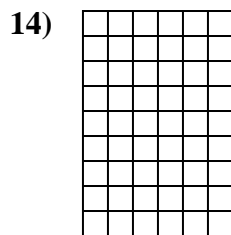
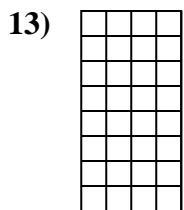
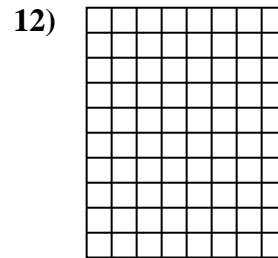
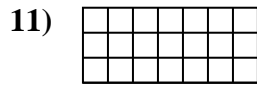
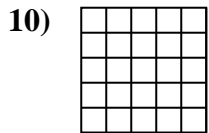
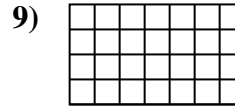
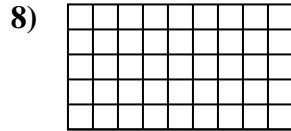
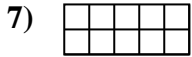
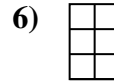
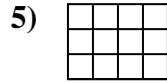
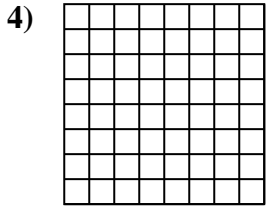
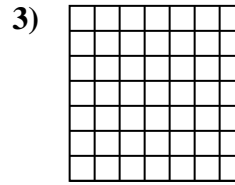

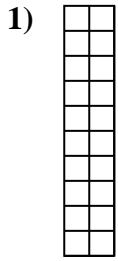




Berechne die Fläche. Jeder Block entspricht 1 Einheit (u^2).

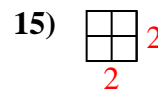
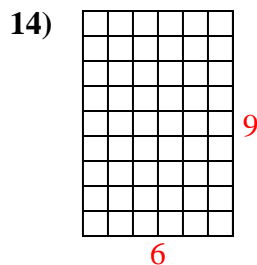
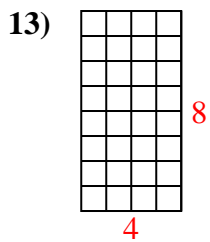
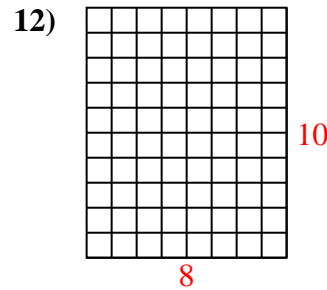
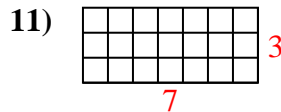
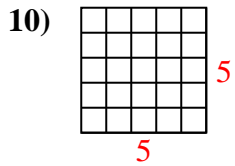
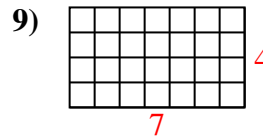
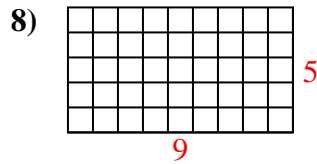
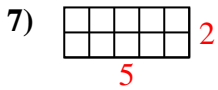
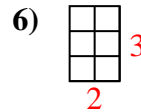
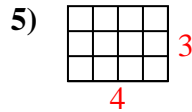
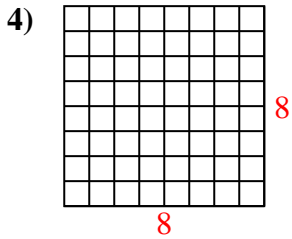
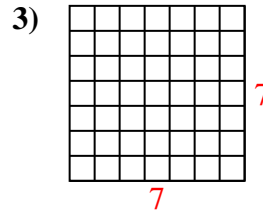
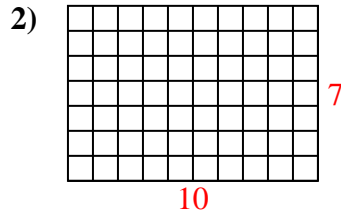
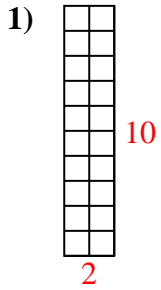


Antworten

- 1. _____
- 2. _____
- 3. _____
- 4. _____
- 5. _____
- 6. _____
- 7. _____
- 8. _____
- 9. _____
- 10. _____
- 11. _____
- 12. _____
- 13. _____
- 14. _____
- 15. _____



Berechne die Fläche. Jeder Block entspricht 1 Einheit (u^2).



Antworten

1. 20 u^2

2. 70 u^2

3. 49 u^2

4. 64 u^2

5. 12 u^2

6. 6 u^2

7. 10 u^2

8. 45 u^2

9. 28 u^2

10. 25 u^2

11. 21 u^2

12. 80 u^2

13. 32 u^2

14. 54 u^2

15. 4 u^2