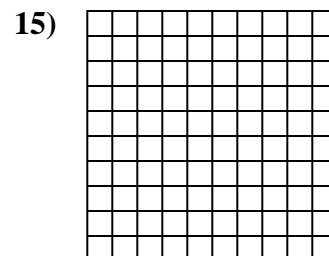
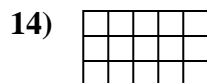
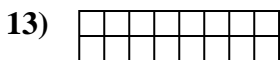
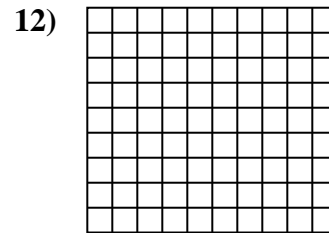
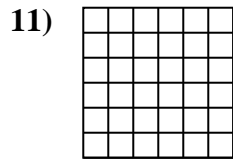
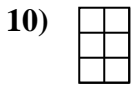
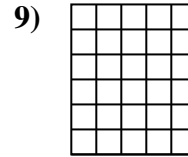

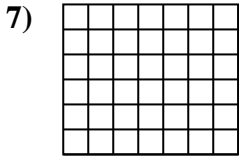

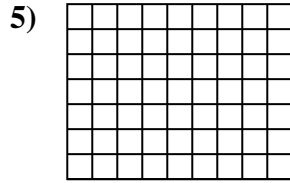
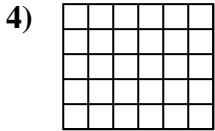
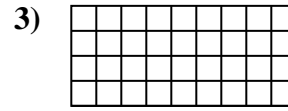
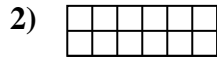
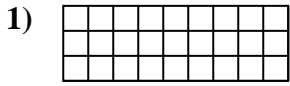




Berechne die Fläche. Jeder Block entspricht 1 Einheit ( $u^2$ ).

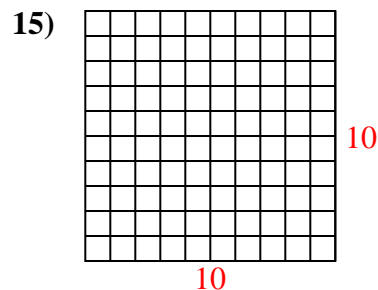
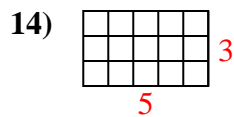
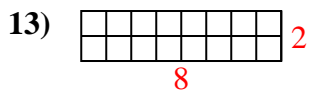
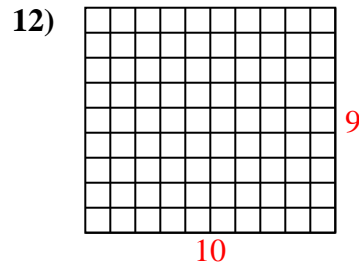
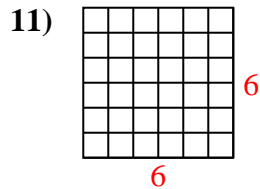
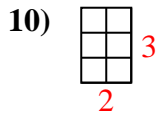
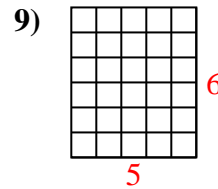
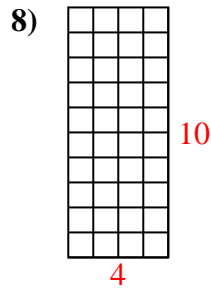
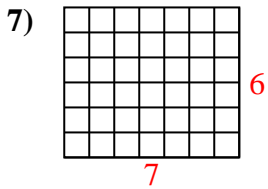
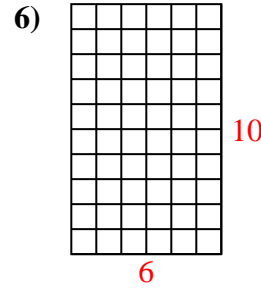
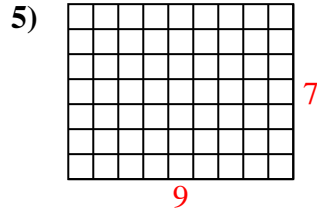
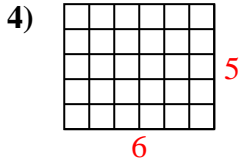
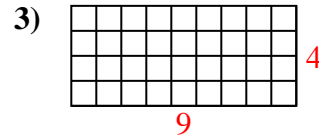
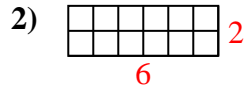


**Antworten**

- 1. \_\_\_\_\_
- 2. \_\_\_\_\_
- 3. \_\_\_\_\_
- 4. \_\_\_\_\_
- 5. \_\_\_\_\_
- 6. \_\_\_\_\_
- 7. \_\_\_\_\_
- 8. \_\_\_\_\_
- 9. \_\_\_\_\_
- 10. \_\_\_\_\_
- 11. \_\_\_\_\_
- 12. \_\_\_\_\_
- 13. \_\_\_\_\_
- 14. \_\_\_\_\_
- 15. \_\_\_\_\_



Berechne die Fläche. Jeder Block entspricht 1 Einheit ( $u^2$ ).



**Antworten**

1. 27  $u^2$

2. 12  $u^2$

3. 36  $u^2$

4. 30  $u^2$

5. 63  $u^2$

6. 60  $u^2$

7. 42  $u^2$

8. 40  $u^2$

9. 30  $u^2$

10. 6  $u^2$

11. 36  $u^2$

12. 90  $u^2$

13. 16  $u^2$

14. 15  $u^2$

15. 100  $u^2$