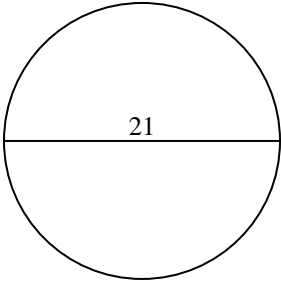


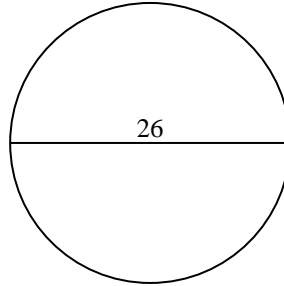


Berechne jeden Kreisumfang. Die Kreise sind nicht maßstäblich.

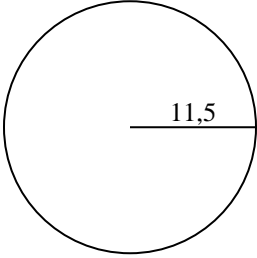
1)



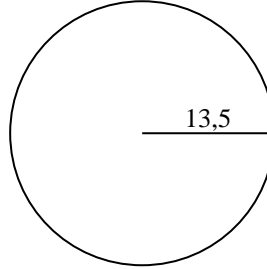
2)



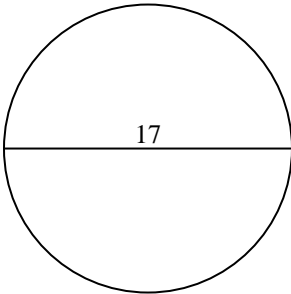
3)



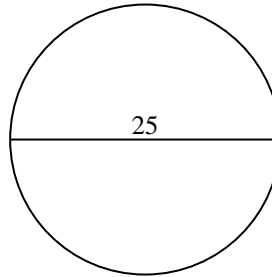
4)



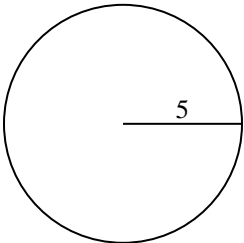
5)



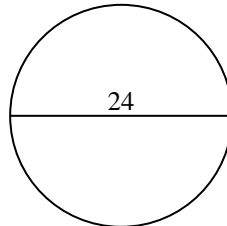
6)



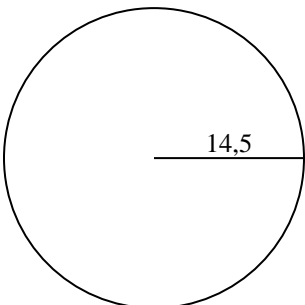
7)



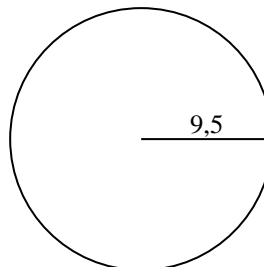
8)



9)



10)

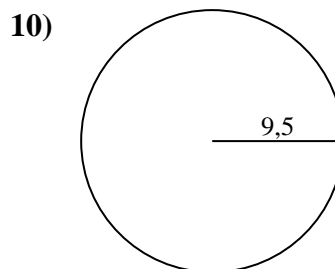
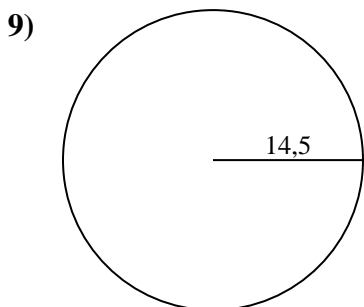
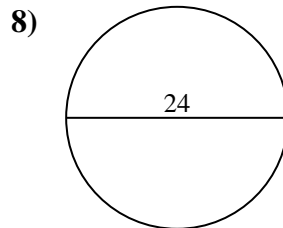
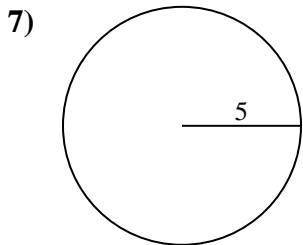
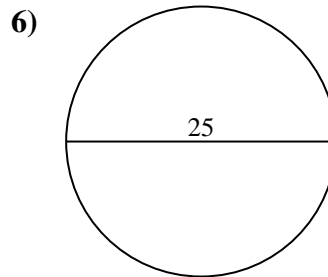
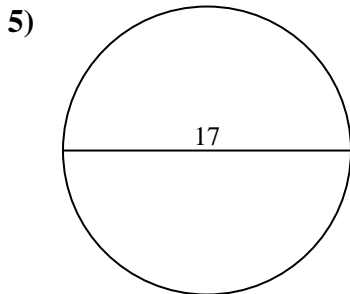
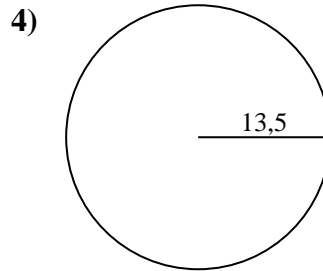
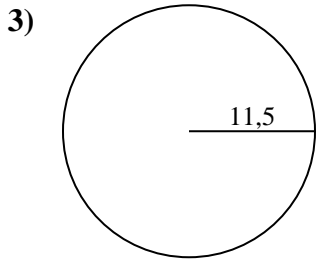
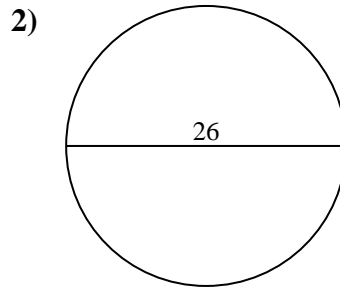
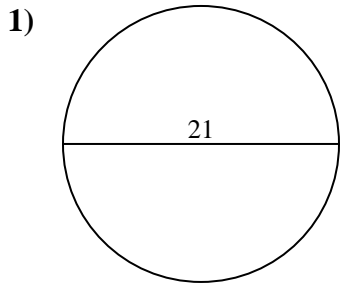


Antworten

- 1. _____
- 2. _____
- 3. _____
- 4. _____
- 5. _____
- 6. _____
- 7. _____
- 8. _____
- 9. _____
- 10. _____



Berechne jeden Kreisumfang. Die Kreise sind nicht maßstäblich.

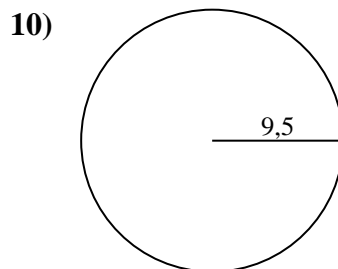
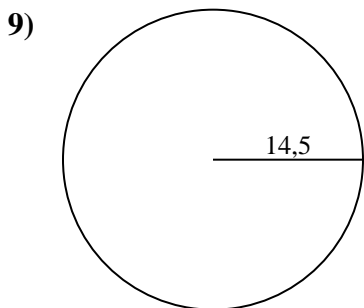
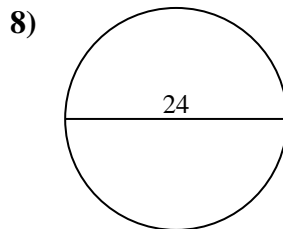
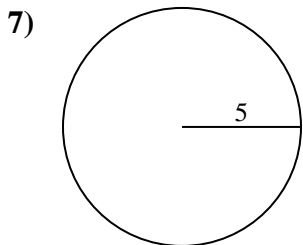
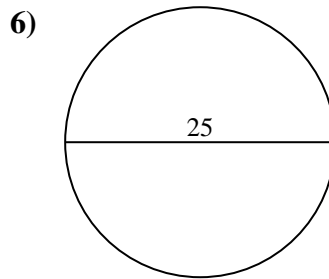
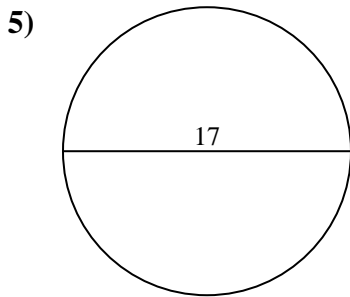
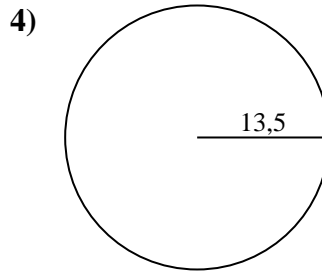
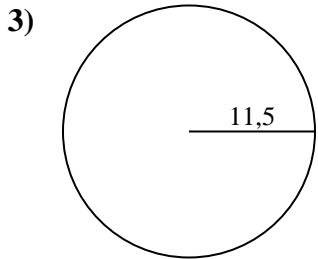
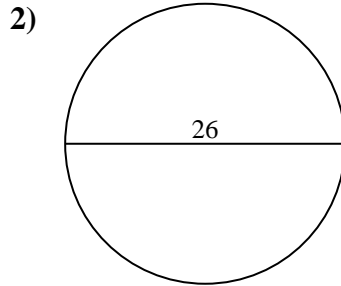
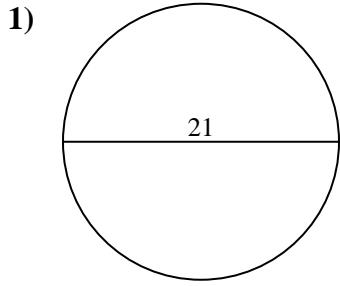
**Antworten**1. **65,97 cm**2. **81,68 cm**3. **72,26 cm**4. **84,82 cm**5. **53,41 cm**6. **78,54 cm**7. **31,42 cm**8. **75,4 cm**9. **91,11 cm**10. **59,69 cm**



Berechne jeden Kreisumfang. Die Kreise sind nicht maßstäblich.

Antworten

84,82 cm	78,54 cm	53,41 cm	65,97 cm	91,11 cm
72,26 cm	31,42 cm	75,4 cm	59,69 cm	81,68 cm



- 1. _____
- 2. _____
- 3. _____
- 4. _____
- 5. _____
- 6. _____
- 7. _____
- 8. _____
- 9. _____
- 10. _____