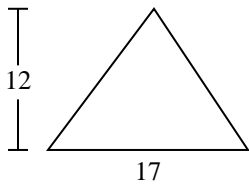




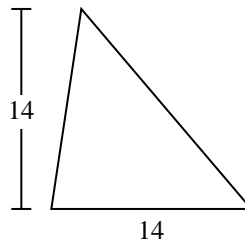
Berechne die Fläche jedes Dreiecks. Die Einheiten sind nicht maßstäblich.

Antworten

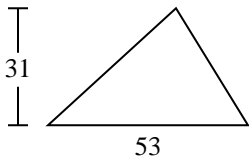
1)



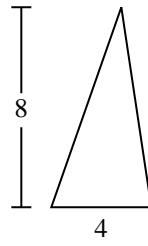
2)



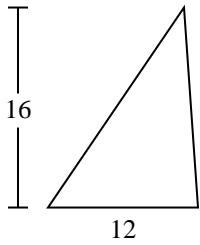
3)



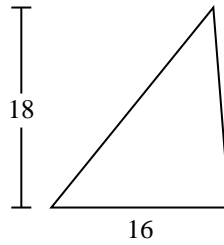
4)



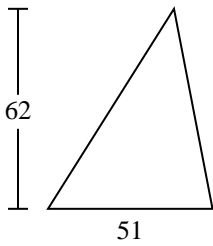
5)



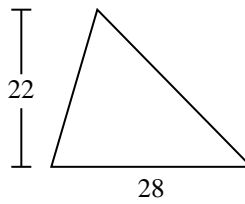
6)



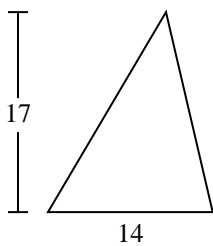
7)



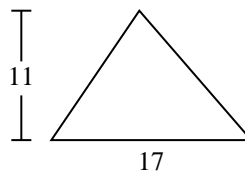
8)



9)



10)

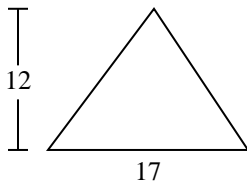


- 1. _____
- 2. _____
- 3. _____
- 4. _____
- 5. _____
- 6. _____
- 7. _____
- 8. _____
- 9. _____
- 10. _____

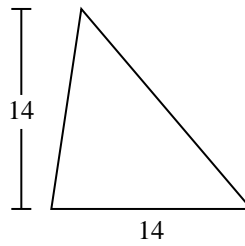


Berechne die Fläche jedes Dreiecks. Die Einheiten sind nicht maßstäblich.

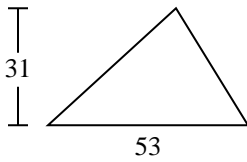
1)



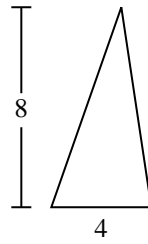
2)



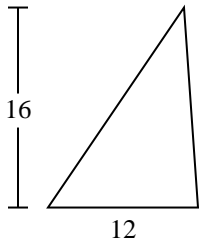
3)



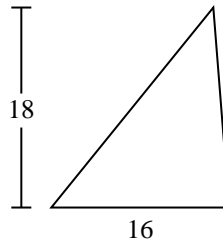
4)



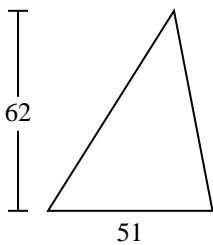
5)



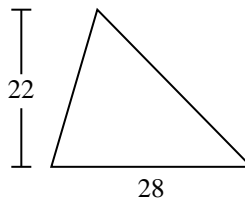
6)



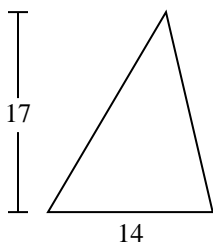
7)



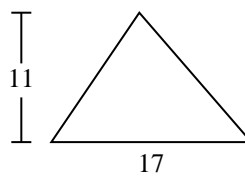
8)



9)



10)

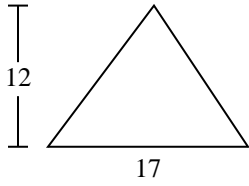
**Antworten**1. **102**2. **98**3. **821,5**4. **16**5. **96**6. **144**7. **1.581**8. **308**9. **119**10. **93,5**



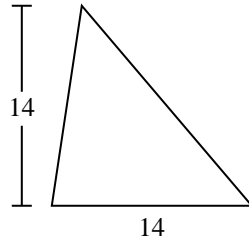
Berechne die Fläche jedes Dreiecks. Die Einheiten sind nicht maßstäblich.

102	1.581	308	144	16
119	821,5	98	96	

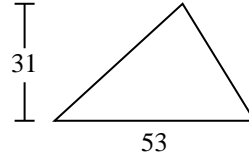
1)



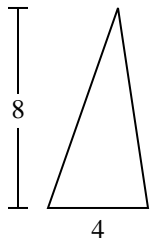
2)



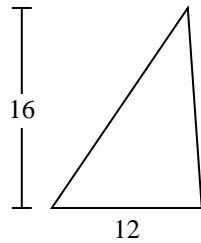
3)



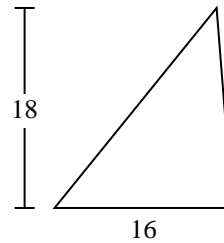
4)



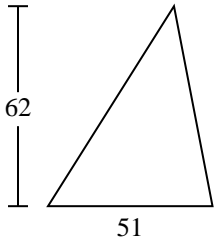
5)



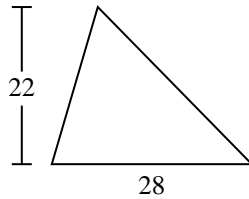
6)



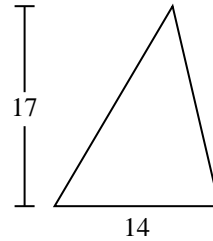
7)



8)



9)



Antworten

1. _____
2. _____
3. _____
4. _____
5. _____
6. _____
7. _____
8. _____
9. _____