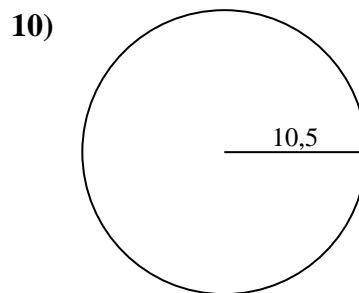
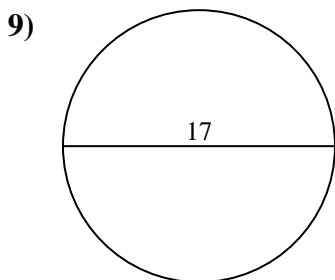
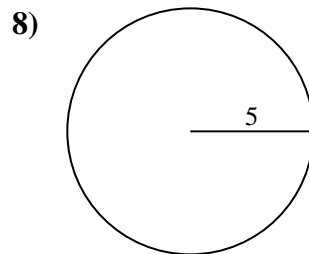
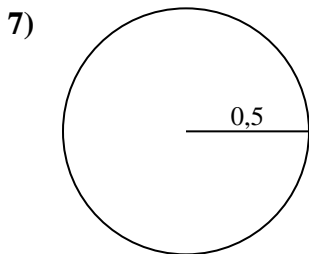
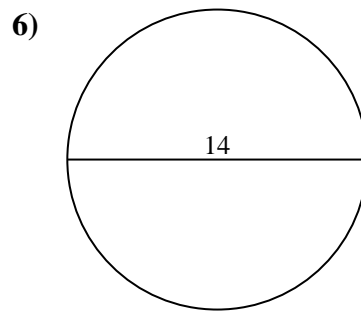
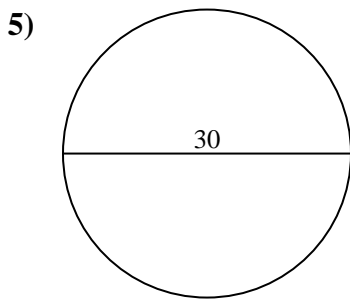
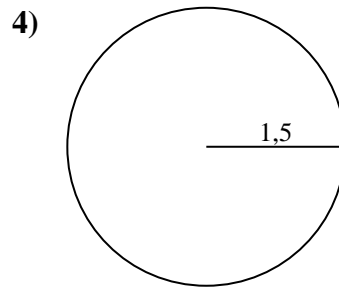
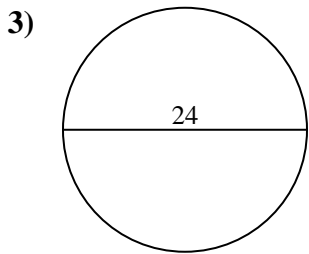
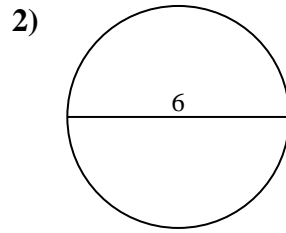
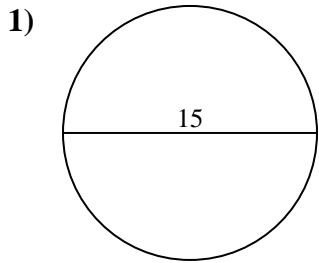




Berechne die Kreisfläche. Die Kreise sind nicht maßstäblich.

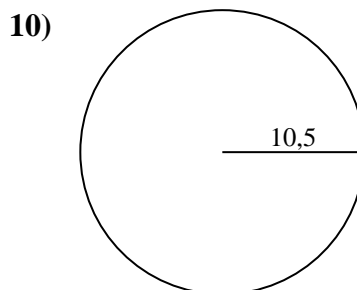
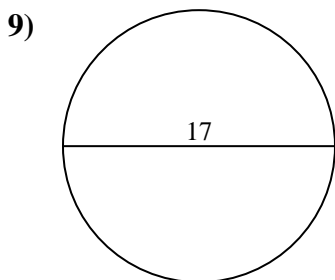
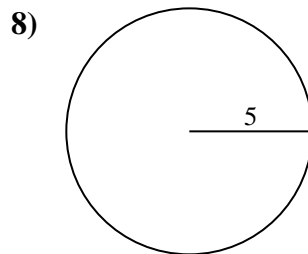
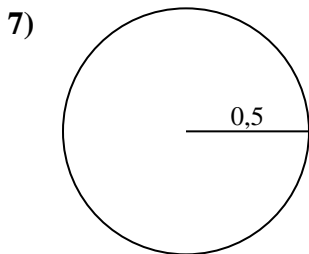
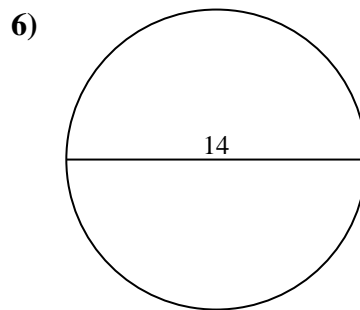
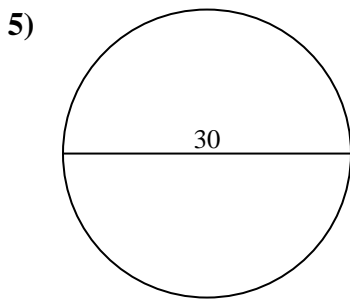
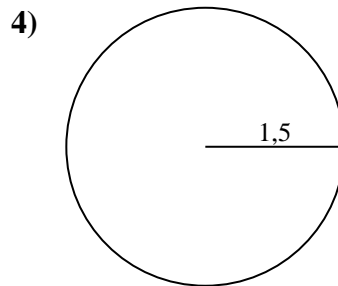
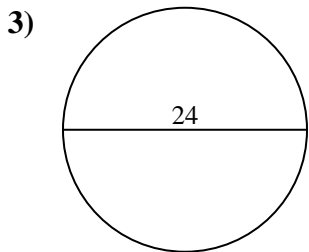
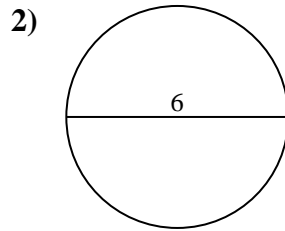
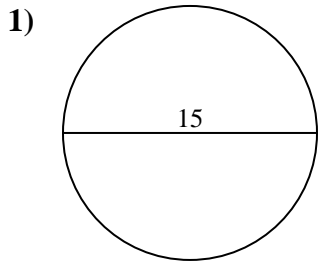
**Antworten**



- 1. \_\_\_\_\_
- 2. \_\_\_\_\_
- 3. \_\_\_\_\_
- 4. \_\_\_\_\_
- 5. \_\_\_\_\_
- 6. \_\_\_\_\_
- 7. \_\_\_\_\_
- 8. \_\_\_\_\_
- 9. \_\_\_\_\_
- 10. \_\_\_\_\_



Berechne die Kreisfläche. Die Kreise sind nicht maßstäblich.

**Antworten**1. 176,72. 28,33. 452,44. 7,15. 706,96. 153,97. 0,88. 78,59. 22710. 346,4



**Berechne die Kreisfläche. Die Kreise sind nicht maßstäblich.**

452,4	0,8	153,9	7,1	227
28,3	78,5	706,9	176,7	

**Antworten**

- 1. \_\_\_\_\_
- 2. \_\_\_\_\_
- 3. \_\_\_\_\_
- 4. \_\_\_\_\_
- 5. \_\_\_\_\_
- 6. \_\_\_\_\_
- 7. \_\_\_\_\_
- 8. \_\_\_\_\_
- 9. \_\_\_\_\_

