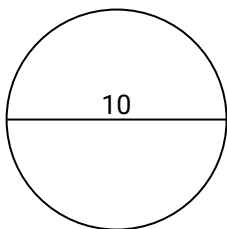




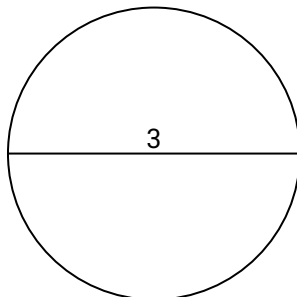
Berechne die Kreisfläche. Die Kreise sind nicht maßstäblich.

**Antworten**

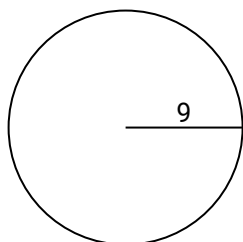
1)



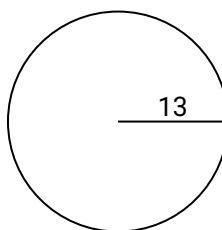
2)



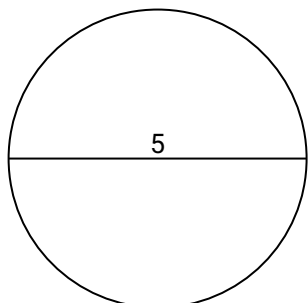
3)



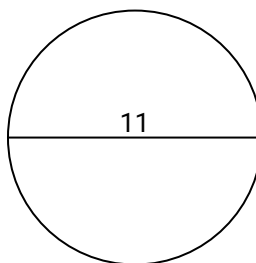
4)



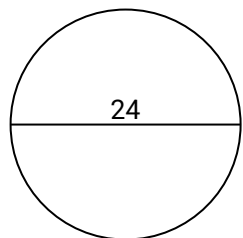
5)



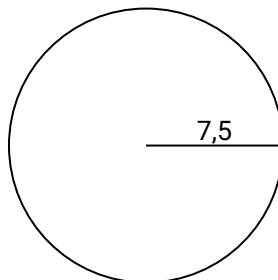
6)



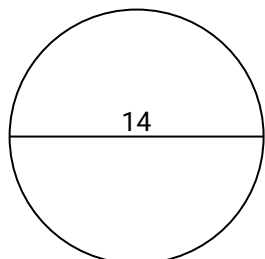
7)



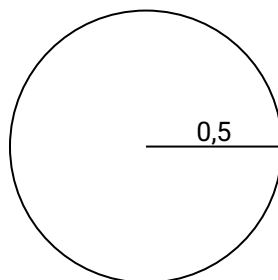
8)



9)



10)



1. \_\_\_\_\_

2. \_\_\_\_\_

3. \_\_\_\_\_

4. \_\_\_\_\_

5. \_\_\_\_\_

6. \_\_\_\_\_

7. \_\_\_\_\_

8. \_\_\_\_\_

9. \_\_\_\_\_

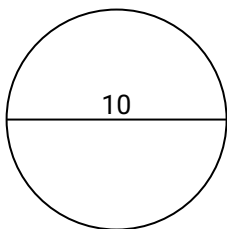
10. \_\_\_\_\_



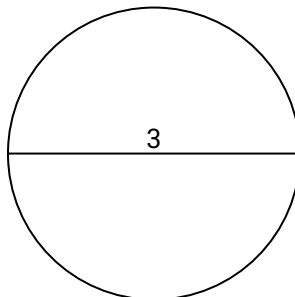
Berechne die Kreisfläche. Die Kreise sind nicht maßstäblich.

**Antworten**

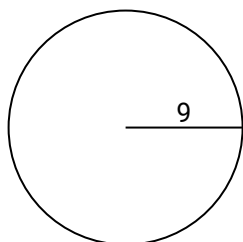
1)



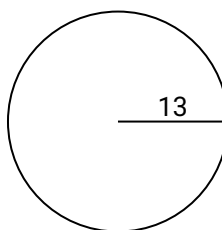
2)



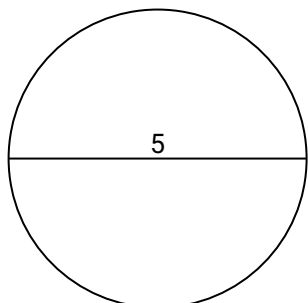
3)



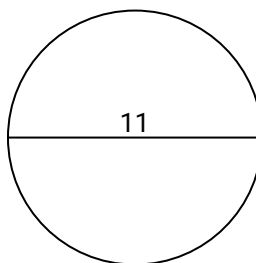
4)



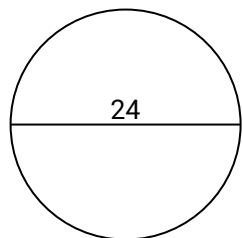
5)



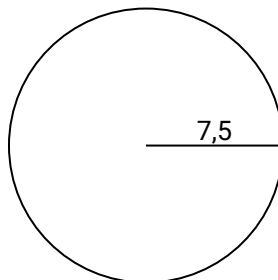
6)



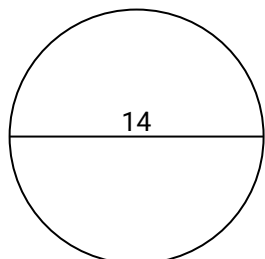
7)



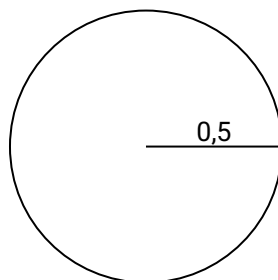
8)



9)



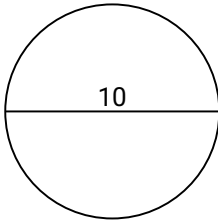
10)

1. **78,5**2. **7,1**3. **254,5**4. **530,9**5. **19,6**6. **95**7. **452,4**8. **176,7**9. **153,9**10. **0,8**

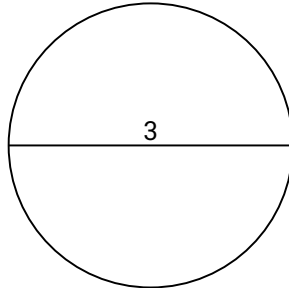
**Berechne die Kreisfläche. Die Kreise sind nicht maßstäblich.****Antworten**452,4  
19,678,5  
530,9176,7  
254,57,1  
95

153,9

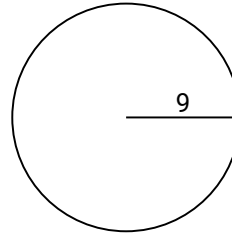
1)



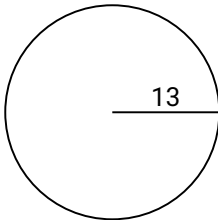
2)



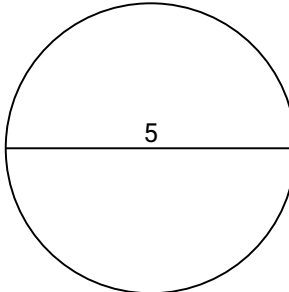
3)



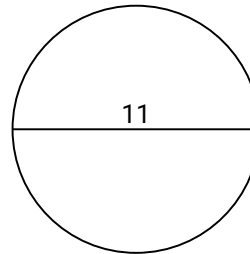
4)



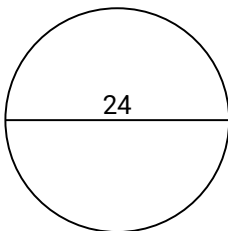
5)



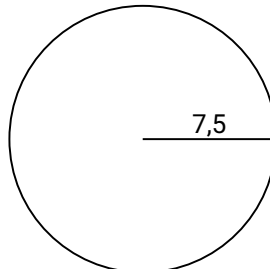
6)



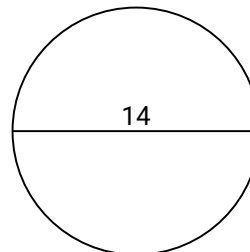
7)



8)



9)



1. \_\_\_\_\_
2. \_\_\_\_\_
3. \_\_\_\_\_
4. \_\_\_\_\_
5. \_\_\_\_\_
6. \_\_\_\_\_
7. \_\_\_\_\_
8. \_\_\_\_\_
9. \_\_\_\_\_
10. \_\_\_\_\_