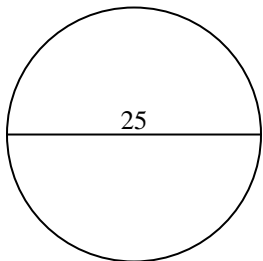


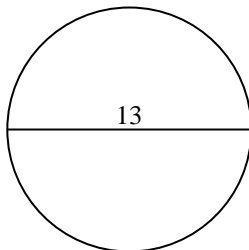


Berechne die Kreisfläche und den Kreisumfang jedes Kreises. Die Kreise sind nicht maßstäblich.

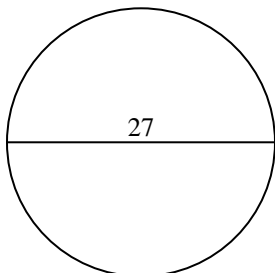
1)



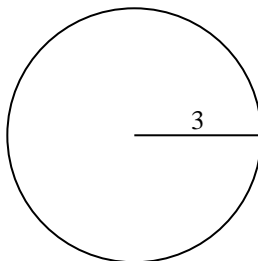
2)



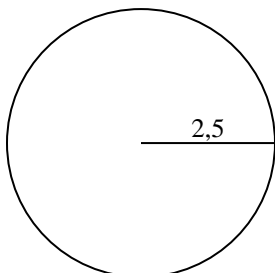
3)



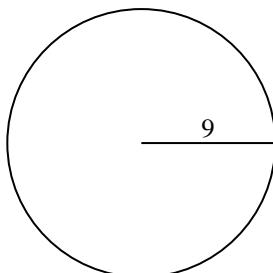
4)



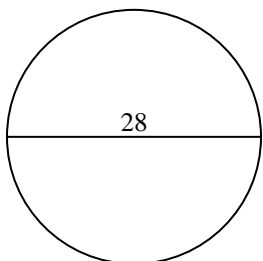
5)



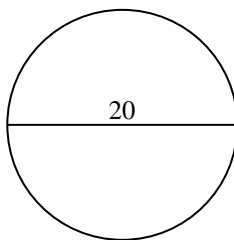
6)



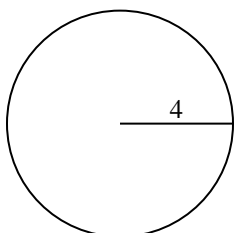
7)



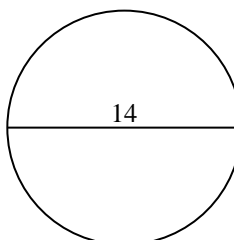
8)



9)



10)

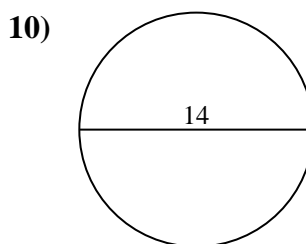
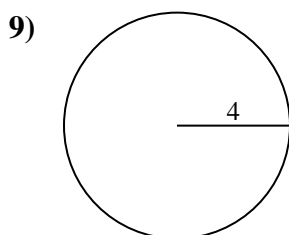
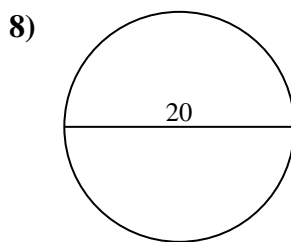
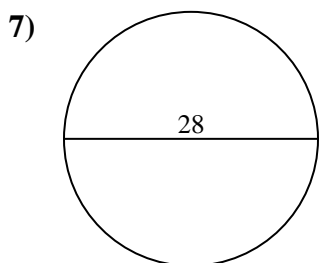
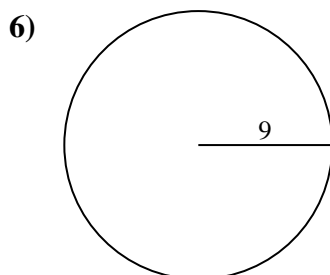
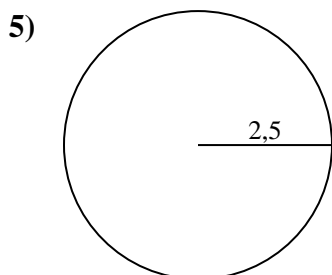
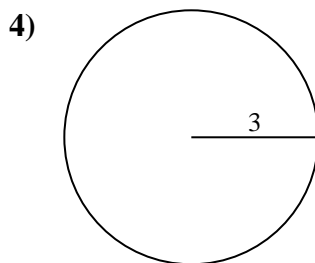
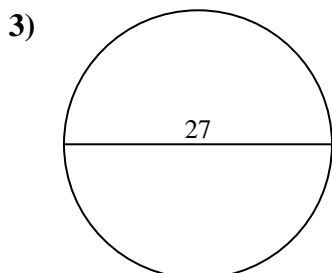
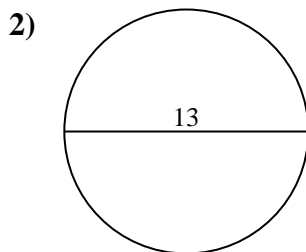
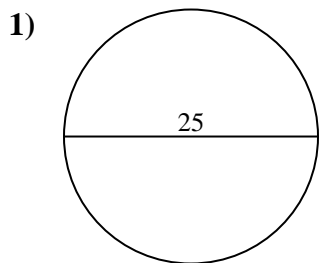


Antworten

- 1. _____
- 2. _____
- 3. _____
- 4. _____
- 5. _____
- 6. _____
- 7. _____
- 8. _____
- 9. _____
- 10. _____



Berechne die Kreisfläche und den Kreisumfang jedes Kreises. Die Kreise sind nicht maßstäblich.

**Antworten**

1.	<u>490,9</u>	<u>78,5</u>
2.	<u>132,7</u>	<u>40,8</u>
3.	<u>572,6</u>	<u>84,8</u>
4.	<u>28,3</u>	<u>18,8</u>
5.	<u>19,6</u>	<u>15,7</u>
6.	<u>254,5</u>	<u>56,5</u>
7.	<u>615,8</u>	<u>88</u>
8.	<u>314,2</u>	<u>62,8</u>
9.	<u>50,3</u>	<u>25,1</u>
10.	<u>153,9</u>	<u>44</u>



Berechne die Kreisfläche und den Kreisumfang jedes Kreises. Die Kreise sind nicht maßstäblich.

18,8	40,8	28,3	56,5	88
15,7	490,9	615,8	314,2	62,8
19,6	25,1	132,7	84,8	254,5
50,3	78,5	572,6		

Antworten

1. _____
2. _____
3. _____
4. _____
5. _____
6. _____
7. _____
8. _____
9. _____

