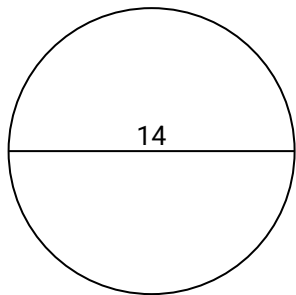




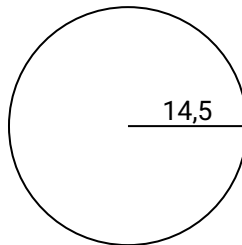
Berechne die Kreisfläche und den Kreisumfang jedes Kreises. Die Kreise sind nicht maßstäblich.

**Antworten**

1)



2)



1. \_\_\_\_\_

2. \_\_\_\_\_

3. \_\_\_\_\_

4. \_\_\_\_\_

5. \_\_\_\_\_

6. \_\_\_\_\_

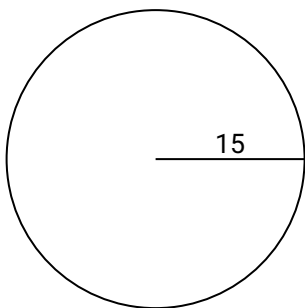
7. \_\_\_\_\_

8. \_\_\_\_\_

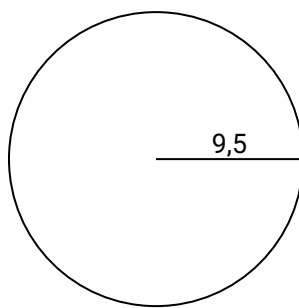
9. \_\_\_\_\_

10. \_\_\_\_\_

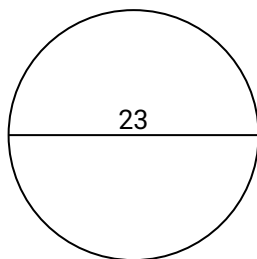
3)



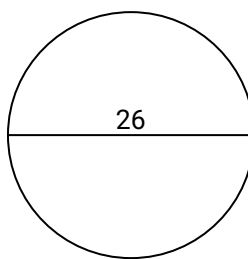
4)



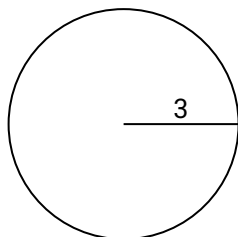
5)



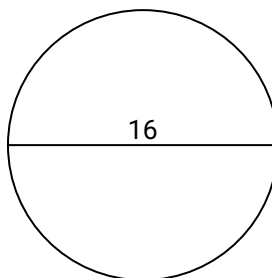
6)



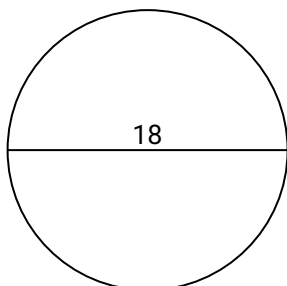
7)



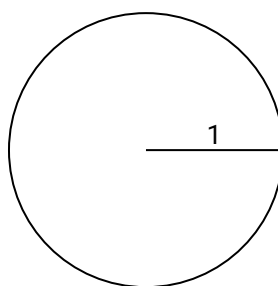
8)



9)



10)

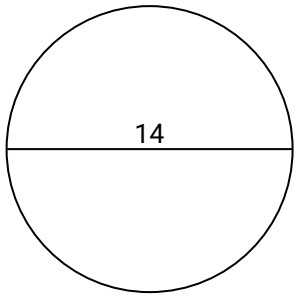




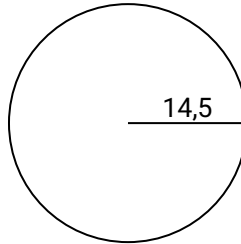
Berechne die Kreisfläche und den Kreisumfang jedes Kreises. Die Kreise sind nicht maßstäblich.

**Antworten**

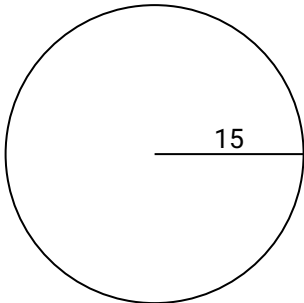
1)



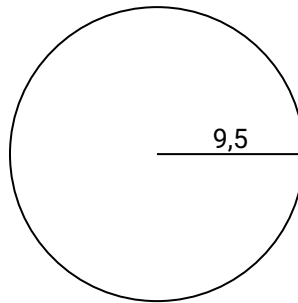
2)



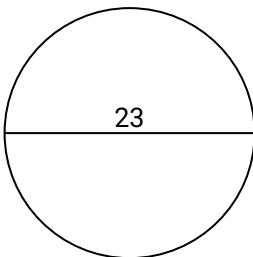
3)



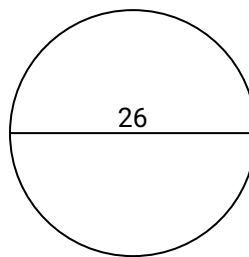
4)



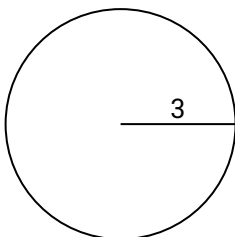
5)



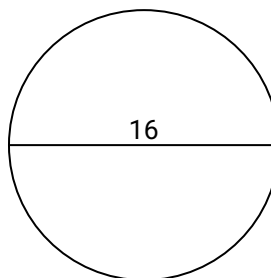
6)



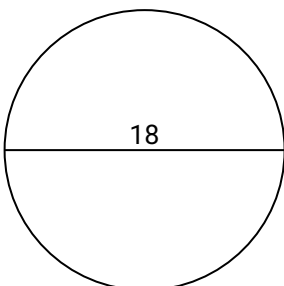
7)



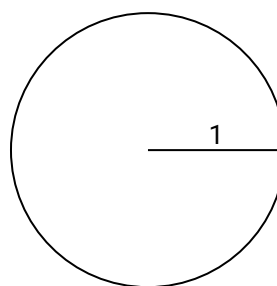
8)



9)



10)



1.	<u>153,9</u>	<u>44</u>
2.	<u>660,5</u>	<u>91,1</u>
3.	<u>706,9</u>	<u>94,2</u>
4.	<u>283,5</u>	<u>59,7</u>
5.	<u>415,5</u>	<u>72,3</u>
6.	<u>530,9</u>	<u>81,7</u>
7.	<u>28,3</u>	<u>18,8</u>
8.	<u>201,1</u>	<u>50,3</u>
9.	<u>254,5</u>	<u>56,5</u>
10.	<u>3,1</u>	<u>6,3</u>



Berechne die Kreisfläche und den Kreisumfang jedes Kreises. Die Kreise sind nicht maßstäblich.

**Antworten**

56,5

50,3

59,7

283,5

660,5

254,5

530,9

91,1

201,1

81,7

72,3

153,9

18,8

706,9

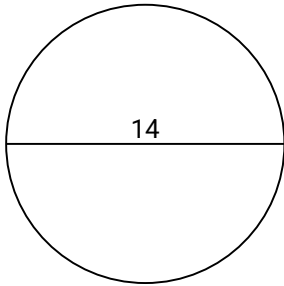
415,5

28,3

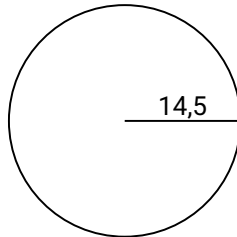
94,2

44

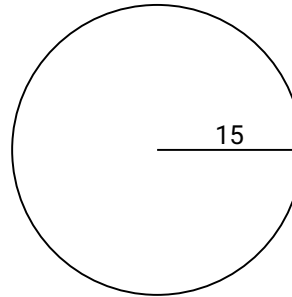
1)



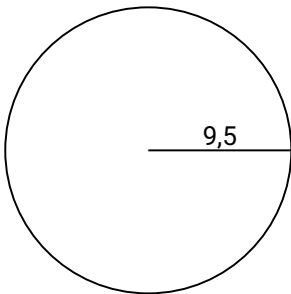
2)



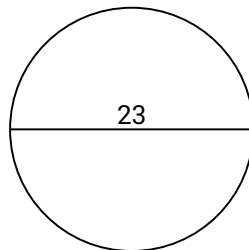
3)



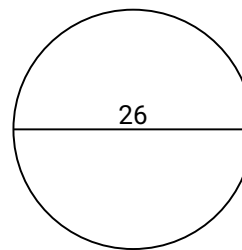
4)



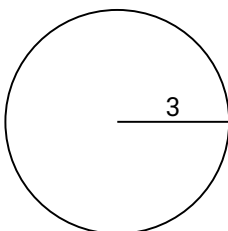
5)



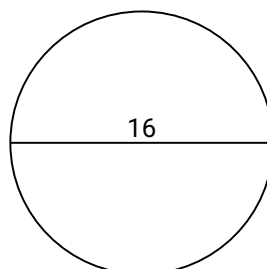
6)



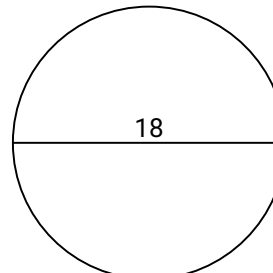
7)



8)



9)



1. \_\_\_\_\_

2. \_\_\_\_\_

3. \_\_\_\_\_

4. \_\_\_\_\_

5. \_\_\_\_\_

6. \_\_\_\_\_

7. \_\_\_\_\_

8. \_\_\_\_\_

9. \_\_\_\_\_

10. \_\_\_\_\_