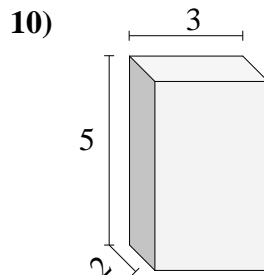
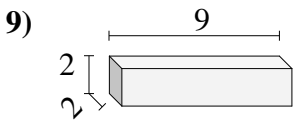
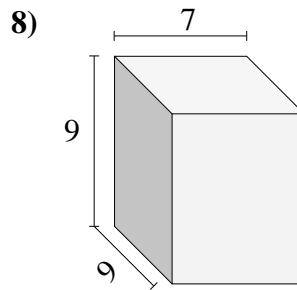
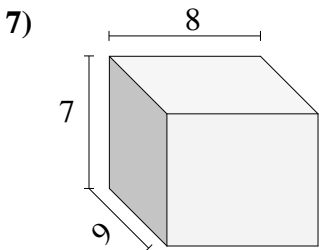
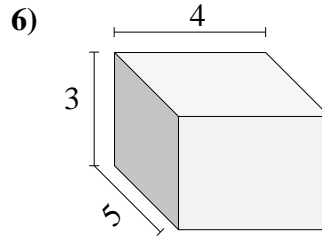
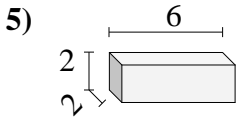
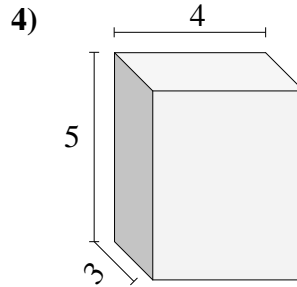
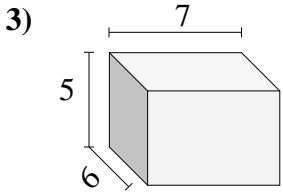
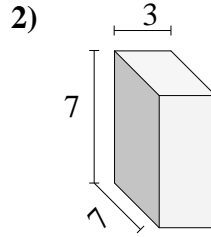
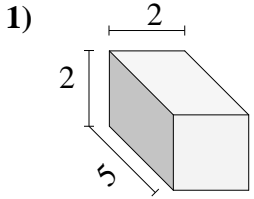




Bestimme das Volumen jedes rechteckigen Körpers. Einheiten sind in cm und nicht maßstabsgerecht.

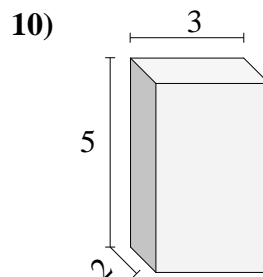
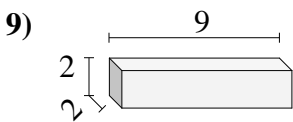
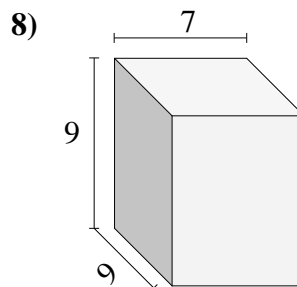
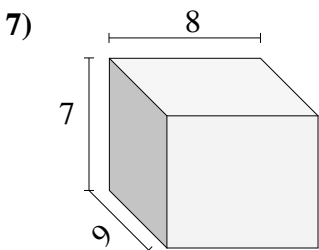
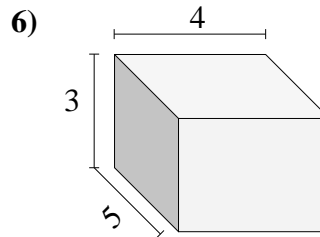
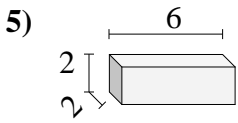
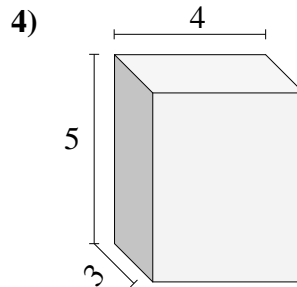
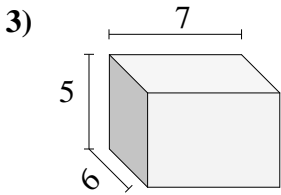
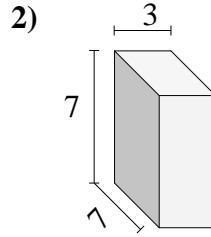
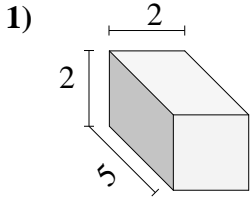


Antworten

- 1. _____
- 2. _____
- 3. _____
- 4. _____
- 5. _____
- 6. _____
- 7. _____
- 8. _____
- 9. _____
- 10. _____



Bestimme das Volumen jedes rechteckigen Körpers. Einheiten sind in cm und nicht maßstabsgerecht.

**Antworten**1. **20**2. **147**3. **210**4. **60**5. **24**6. **60**7. **504**8. **567**9. **36**10. **30**