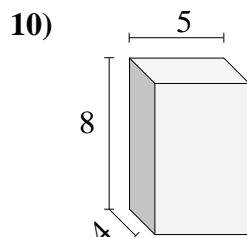
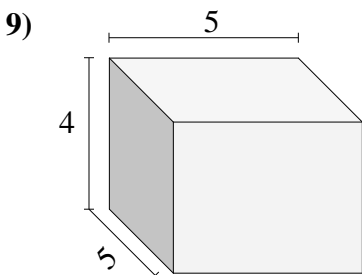
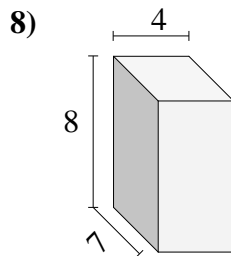
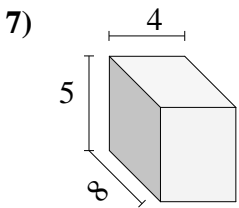
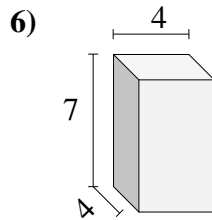
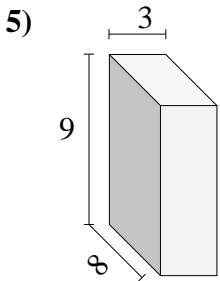
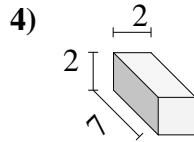
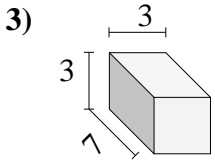
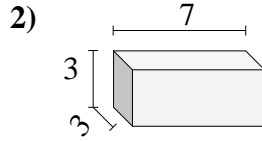
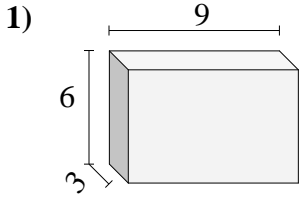




Bestimme das Volumen jedes rechteckigen Körpers. Einheiten sind in cm und nicht maßstabsgerecht.

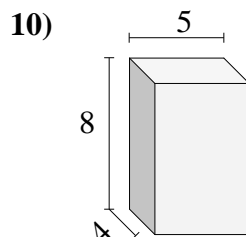
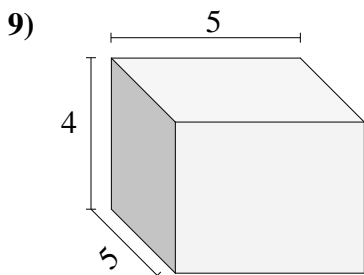
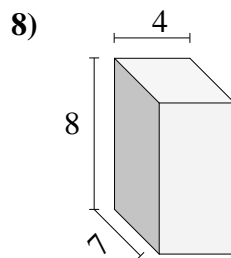
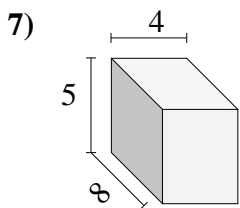
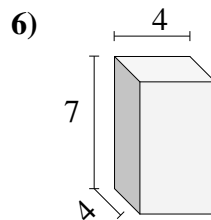
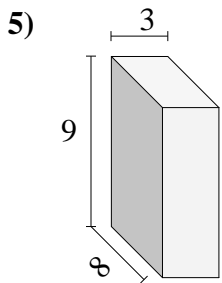
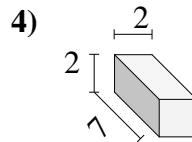
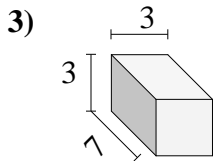
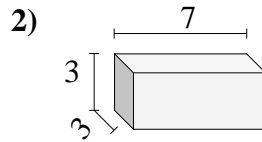
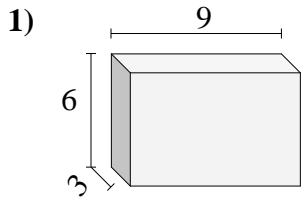


**Antworten**

- 1. \_\_\_\_\_
- 2. \_\_\_\_\_
- 3. \_\_\_\_\_
- 4. \_\_\_\_\_
- 5. \_\_\_\_\_
- 6. \_\_\_\_\_
- 7. \_\_\_\_\_
- 8. \_\_\_\_\_
- 9. \_\_\_\_\_
- 10. \_\_\_\_\_



Bestimme das Volumen jedes rechteckigen Körpers. Einheiten sind in cm und nicht maßstabsgerecht.

**Antworten**1. **162**2. **63**3. **63**4. **28**5. **216**6. **112**7. **160**8. **224**9. **100**10. **160**