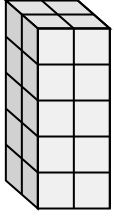


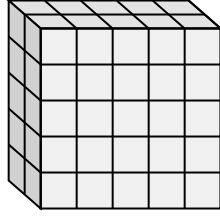


Ordne jedem Problem die Gleichung zu, die es darstellen könnte. Antworten Sie mit dem fehlenden Begriff und Buchstaben.

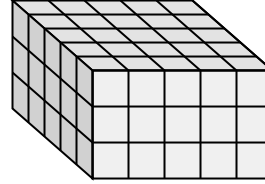
Bsp)



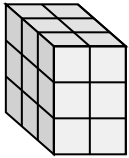
1)



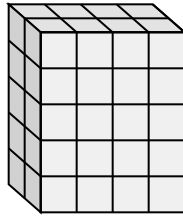
2)



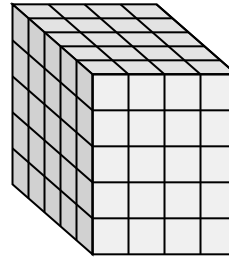
3)



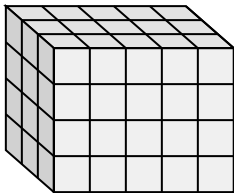
4)



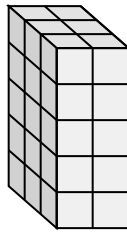
5)



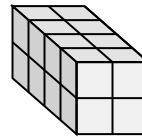
6)



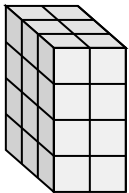
7)



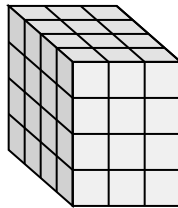
8)



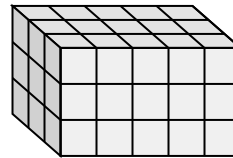
9)



10)



11)



Antworten

Bsp. B, 2

1. A, 2

2. E, 5

3. K, 2

4. I, 40

5. F, 4

6. L, 5

7. H, 30

8. D, 2

9. C, 2

10. J, 4

11. G, 45

A. $\underline{\quad} \cdot 5 \cdot 5 = 50$

B. $2 \cdot \underline{\quad} \cdot 5 = 20$

C. $3 \cdot \underline{\quad} \cdot 4 = 24$

D. $4 \cdot \underline{\quad} \cdot 2 = 16$

E. $5 \cdot \underline{\quad} \cdot 3 = 75$

F. $5 \cdot \underline{\quad} \cdot 5 = 100$

G. $3 \cdot 5 \cdot 3 = \underline{\quad}$

H. $3 \cdot 2 \cdot 5 = \underline{\quad}$

I. $2 \cdot 4 \cdot 5 = \underline{\quad}$

J. $\underline{\quad} \cdot 3 \cdot 4 = 48$

K. $3 \cdot \underline{\quad} \cdot 3 = 18$

L. $3 \cdot \underline{\quad} \cdot 4 = 60$